

## Suggested problems Chapter 11

The quiz questions will be same or very similar to the following text-book problems.

Refer to the course website for the latest version of this document.

You are encouraged to seek the help of your instructor during his office hours.

3. A 140 kg hoop rolls along a horizontal floor so that the hoop's center of mass has a speed of 0.150 m/s. How much work must be done on the hoop to stop it?

**Answer:  $-3.15 \text{ J}$**

9. In Fig. 11-33, a solid ball rolls smoothly from rest (starting at height  $H = 6.0 \text{ m}$ ) until it leaves the horizontal section at the end of the track, at height  $h = 2.0 \text{ m}$ . How far horizontally from point A does the ball hit the floor?

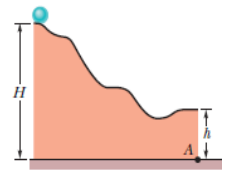


Fig. 11-33 Problem 9.

**Answer:  $4.8 \text{ m}$**

14. In Fig. 11-37, a small, solid, uniform ball is to be shot from point P so that it rolls smoothly along a horizontal path, up along a ramp, and onto a plateau. Then it leaves the plateau horizontally to land on a game board, at a horizontal distance  $d$  from the right edge of the plateau. The vertical heights are  $h_1 = 5.00 \text{ cm}$  and  $h_2 = 1.60 \text{ cm}$ . With what speed must the ball be shot at point P for it to land at  $d = 6.00 \text{ cm}$ ?

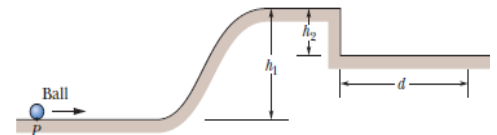


Fig. 11-37 Problem 14.

**Answer:  $1.34 \text{ m/s}$**

23. Force  $\vec{F} = (2.0 \text{ N})\hat{i} - (3.0 \text{ N})\hat{k}$  acts on a pebble with position vector  $\vec{r} = (0.50 \text{ m})\hat{j} - (2.0 \text{ m})\hat{k}$  relative to the origin. In unit vector notation, what is the resulting torque on the pebble about (a) the origin and (b) the point  $(2.0 \text{ m}, 0, -3.0 \text{ m})$ ?

**Answer: (a)  $(-1.5 \hat{i} - 4.0 \hat{j} - 1.0 \hat{k}) \text{ N} \cdot \text{m}$  (b)  $(-1.5 \hat{i} - 4.0 \hat{j} - 1.0 \hat{k}) \text{ N} \cdot \text{m}$**

27. At one instant, force  $\vec{F} = 4.0 \hat{j} \text{ N}$  acts on a 0.25 kg object that has position vector  $\vec{r} = (2.0\hat{i} - 2.0\hat{k})\text{m}$  and velocity vector  $\vec{v} = (-5.0 \hat{i} + 5.0\hat{k})\text{m/s}$ . About the origin and in unit-vector notation, what are (a) the object's angular momentum and (b) the torque acting on the object?

**Answer: (a)  $0$  (b)  $(8.0 \text{ N} \cdot \text{m}) \hat{i} + (8.0 \text{ N} \cdot \text{m}) \hat{k}$**

34. A particle is to move in an  $xy$  plane, clockwise around the origin as seen from the positive side of the  $z$  axis. In unit-vector notation, what torque acts on the particle if the magnitude of its angular momentum about the origin is (a)  $4.0 \text{ kg} \cdot \text{m}^2/\text{s}$ , (b)  $4.0 t^2 \text{ kg} \cdot \text{m}^2/\text{s}$ , (c)  $4.0/\sqrt{t} \text{ kg} \cdot \text{m}^2/\text{s}$  and (d)  $4.0/t^2 \text{ kg} \cdot \text{m}^2/\text{s}$ ?

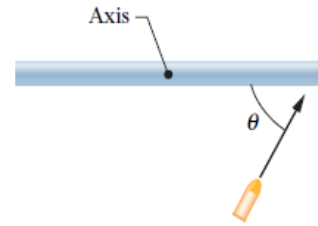
**Answer: (a)  $0$  (b)  $(-8.0 t \text{ N} \cdot \text{m}) \hat{k}$  (c)  $(-\frac{2.0}{\sqrt{t}} \hat{k}) \text{ N} \cdot \text{m}$  (d)  $(-\frac{8.0}{t^3} \hat{k}) \text{ N} \cdot \text{m}$**

---

46. The rotational inertia of a collapsing spinning star drops to  $\frac{1}{3}$  its initial value. What is the ratio of the new rotational kinetic energy to the initial rotational kinetic energy?

Answer: 3

53. A uniform thin rod of length 0.500 m and mass 4.00 kg can rotate in a horizontal plane about a vertical axis through its center. The rod is at rest when a 3.00 g bullet traveling in the rotation plane is fired into one end of the rod. As viewed from above, the bullet's path makes angle  $\theta = 60.0^\circ$  with the rod (Fig. 11-50). If the bullet lodges in the rod and the angular velocity of the rod is 10 rad/s immediately after the collision, what is the bullet's speed just before impact?



Answer:  $1.3 \times 10^3$  m/s