

NAME :	
I.D. # :	
SEC # :	

QUESTION #	SCORE	MAXIMUM
1.		20
2.		30
3.		25
4		25
TOTAL		100

Instructor: Dr. J. M. BAKHASHWAIN

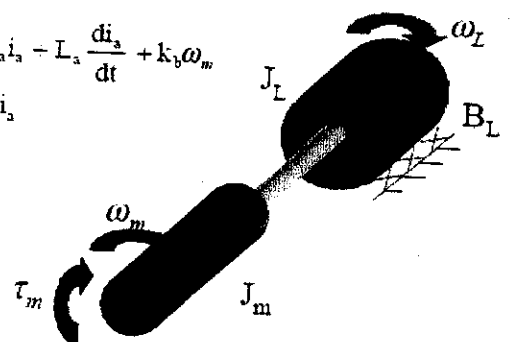
2. Draw the block diagram for armature controlled dc motor. Show that the transfer function is given by $\frac{\omega_m(s)}{V_a(s)} = \frac{a}{s^2 + bs + c}$

(i) Find a, b, and c

(ii) Find the state space representation when the state vector $x = (i_a \ \omega_m \ \theta_m)^T$

$$V_a(t) = R_a i_a + L_a \frac{di_a}{dt} + k_b \omega_m$$

$$\tau_m = k_a i_a$$



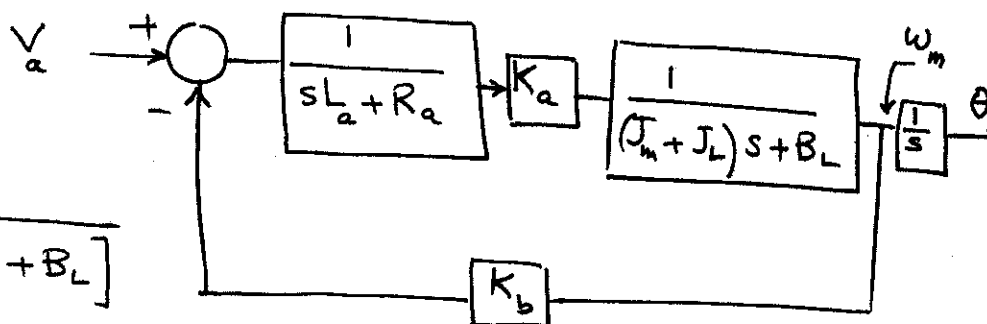
$$V_a(t) = R_a i_a(t) + L_a \frac{di_a}{dt} + k_b \omega_m$$

$$\tau_m = k_a i_a = (J_m + J_L) \ddot{\theta}_m + B_L \dot{\theta}_m$$

$$\frac{\omega_m}{V_a} = \frac{G}{1+GH}$$

$$G = \frac{K_a}{(sL_a + R_a) [(J_m + J_L)s + B_L]}$$

$$H = K_b$$



$$\therefore \frac{\omega_m(s)}{V_a(s)} = \frac{K_a}{(sL_a + R_a) [(J_m + J_L)s + B_L] + K_a K_b}$$

$$= \frac{K_a}{L_a(J_m + J_L) s^2 + [R_a(J_m + J_L) + L_a B_L] s + (R_a B_L + K_a K_b)}$$

$$= \frac{K_a}{L_a(J_m + J_L) s^2 + \left(\frac{R_a}{L_a} + \frac{B_L}{J_m + J_L} \right) s + \left(\frac{R_a B_L + K_a K_b}{L_a(J_m + J_L)} \right)}$$

$$\therefore a = \frac{K_a}{L_a(J_m + J_L)}, \quad b = \frac{R_a}{L_a} + \frac{B_L}{J_m + J_L}$$

$$c = \frac{R_a B_L + K_a K_b}{L_a(J_m + J_m)}$$

$$\frac{di_a}{dt} = -\frac{R_a}{L_a} i_a - \frac{K_b}{L_a} \omega_m + \frac{V_a}{L_a} \quad (1)$$

$$K_a i_a = (J_m + J_L) \dot{\omega}_m + B_L \omega_m$$

$$\dot{\omega}_m = \frac{K_a}{J_m + J_L} i_a - \frac{B_L}{J_m + J_L} \omega_m \quad (2)$$

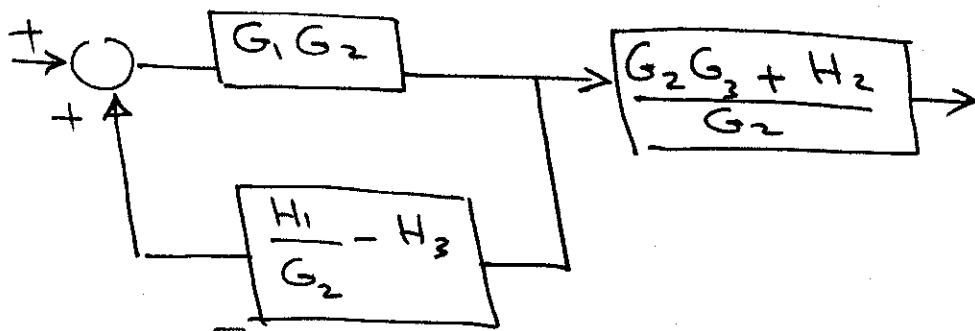
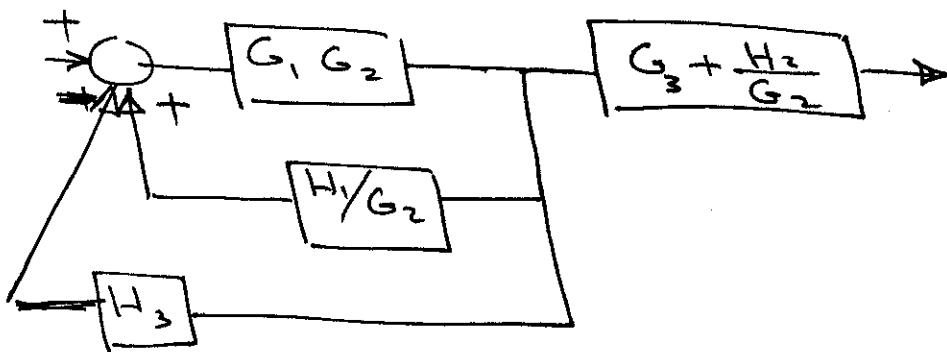
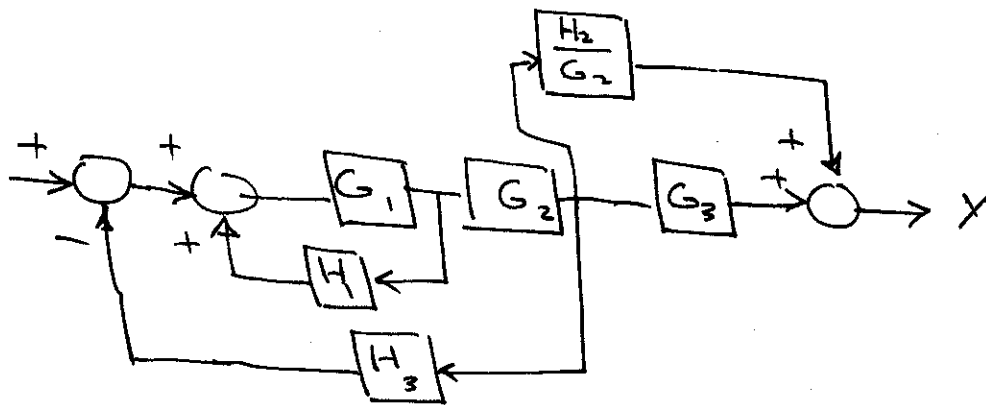
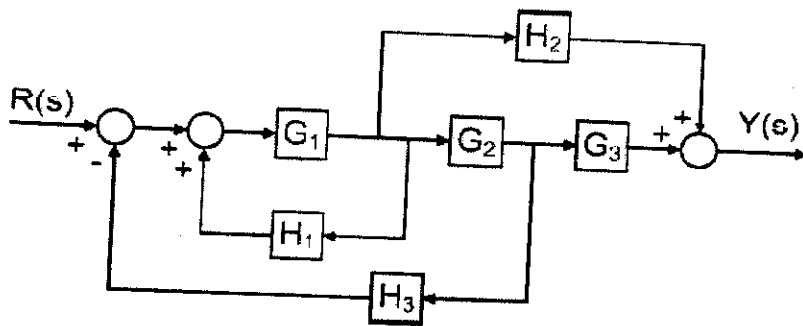
$$\dot{\theta}_m = \omega_m$$

$$\therefore \begin{aligned} \dot{X}_1 &= -\frac{R_a}{L_a} X_1 - \frac{K_b}{L_a} X_2 + \frac{1}{L_a} V_a \\ \dot{X}_2 &= \frac{K_a}{J_m + J_L} X_1 - \frac{B_L}{J_m + J_L} X_2 \\ \dot{X}_3 &= X_2 \end{aligned} \quad X = \begin{bmatrix} i_a \\ \omega_m \\ \theta_m \end{bmatrix}$$

$$\therefore \dot{X} = \begin{bmatrix} -\frac{R_a}{L_a} & -\frac{K_b}{L_a} & 0 \\ \frac{K_a}{J_m + J_L} & -\frac{B_L}{J_m + J_L} & 0 \\ 0 & 1 & 0 \end{bmatrix} X + \begin{bmatrix} \frac{1}{L_a} \\ 0 \\ 0 \end{bmatrix} V_a$$

$$Y = (0 \quad 0 \quad 1) X$$

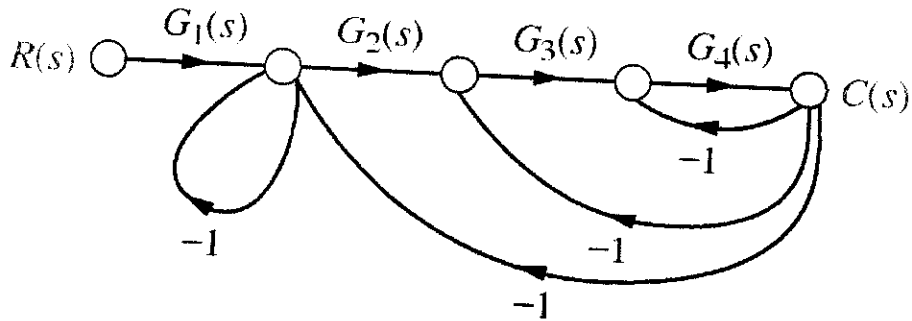
3. Simplify the block diagram shown and obtain the closed-loop transfer function $\frac{Y(s)}{R(s)}$.



$$\frac{G_1 G_2}{1 - G_1 G_2 \left(\frac{H_1}{G_2} - H_3 \right)} * \left[\frac{G_2 G_3 + H_2}{G_2} \right]$$

$$\frac{G_1 (G_2 G_3 + H_2)}{1 - G_1 H_1 + G_1 G_2 H_3} *$$

4. Using Mason's gain formula, find the transfer function for the shown signal flow graph



$$P_1 = G_1 G_2 G_3 G_4, \quad \Delta_1 = 1$$

$$L_1 = -1$$

$$L_2 = -G_2 G_3 G_4$$

$$L_3 = -G_3 G_4$$

$$L_4 = -G_4$$

$L_1 \times L_3$ non touching

$L_1 \times L_4$

$$\therefore \Delta = 1 - (L_1 + L_2 + L_3 + L_4) + L_1 L_3 + L_1 L_4$$

$$\frac{C(s)}{R(s)} = \frac{G_1 G_2 G_3 G_4}{1 + [1 + G_2 G_3 G_4 + G_3 G_4 + G_4] + (-1)(-G_3 G_4) + (-1)(-G_4)}$$

$$= \frac{G_1 G_2 G_3 G_4}{2 + G_2 G_3 G_4 + 2 G_3 G_4 + 2 G_4} \quad *$$

1. Find the value of a for the following system

$$\dot{x} = \begin{pmatrix} a & a \\ a & a \end{pmatrix} x + \begin{pmatrix} 0 \\ 1 \end{pmatrix} u(t)$$

$$y = (1 \ 0)x$$

If $y(t) = 0.5(1 - e^t + te^t)$ for an input $u(t) = e^t$. Assume zero initial conditions

$$\frac{Y(s)}{U(s)} = C (sI - A)^{-1} B + D$$

$$= (1 \ 0) \begin{pmatrix} s-a & -a \\ -a & s-a \end{pmatrix}^{-1} \begin{pmatrix} 0 \\ 1 \end{pmatrix}, \quad D = 0$$

$$= (1 \ 0) \frac{1}{\Delta(s)} \begin{bmatrix} s-a & a \\ a & s-a \end{bmatrix} \begin{bmatrix} 0 \\ 1 \end{bmatrix} = \frac{a}{\Delta(s)}$$

$$\Delta(s) = |sI - A| = (s-a)^2 - a^2 = s^2 - 2as$$

$$\therefore \frac{Y(s)}{U(s)} = \frac{a}{s^2 - 2as} = \frac{a}{s(s-2a)} \quad *$$

$$y(t) = \frac{1}{2}(1 - e^t + te^t) \Rightarrow Y(s) = \frac{1}{2} \left[\frac{1}{s} - \frac{1}{s-1} + \frac{1}{(s-1)^2} \right]$$

$$Y(s) = \frac{1}{2} \left[\frac{(s-1)^2 - s(s-1) + s}{s(s-1)^2} \right] = \frac{1}{2} \left[\frac{s^2 - 2s + 1 - s^2 + s + s}{s(s-1)^2} \right] = \frac{1/2}{s(s-1)^2}$$

$$u(t) = e^t \Rightarrow U(s) = \frac{1}{s-1}$$

$$\therefore \frac{Y(s)}{U(s)} = \frac{1/2}{s(s-1)} \quad (**)$$

$$\text{From } (*) \text{ \& } (**): \quad \frac{a}{s(s-2a)} = \frac{1/2}{s(s-1)}$$

$$\Rightarrow \boxed{a = \frac{1}{2}}$$