

بِسْمِ اللَّهِ الرَّحْمَنِ الرَّحِيمِ

King Fahd University



of Petroleum & Minerals

Department of Electrical Engineering
EE 207 Signals and Systems
Second Semester (141)

Exam I
Tuesday, 28 October 2014
7:00 pm – 8:30 pm

Name: _____ **KEY**

ID: _____

Serial: _____

Problem	Score	Out of
1		30
2		10
3		10
4		20
5		10
6		20
Total		100

Problem 1: (MCQ)

Choose the correct answer of each question

(1) A System has the following input-output relationship: $y(t) = 3x^2(t) - 5x(t - 2)$, where $x(t)$ is the input signal and $y(t)$ is the output signal. The unit step response of the system is given by:

A) $3u(t) - 5u(t - 2)$

B) $5tu^2(t) - 3u(t - 2)$

C) $-3u(t - 2) + 5u(t)$

D) $3\delta(t) - 5u(t - 2)$

E) $3u(t) - 5\delta(t - 2)$

(2) Let $x(t) = e^{-t}u(t)$ and $y(t) = 2te^{-t}$. The convolution $x(t) * y(t)$ equals:

A) $t^2e^{-t}u(t)$

B) $2te^{-t}u(t)$

C) t^2e^{-t}

D) $2te^{-t}$

E) $(1 - e^{-t})u(t)$

(3) The unit step response of a linear time invariant system is given by $tu(t - 4)$. The unit impulse response of the system is given by

A) $h(t) = u(t - 4) + 4\delta(t - 4)$

B) $h(t) = \delta(t - 4)$

C) $h(t) = u(t - 4) + \delta(t)$

D) $h(t) = u(t) + t\delta(t)$

E) $h(t) = tu(t - 4) + \delta(t - 4)$

(4) A linear time invariant system has the impulse response

$$h(t) = (c + 1)\delta(t) - (c^2 - 1)u(t), \quad \text{where } c \text{ is some constant.}$$

The possible value of the constant c such that the system will be memoryless is

A) $c = 1$

B) $c = -1$

C) $c = 2$

D) $c = 0$

E) The system will be dynamic regardless of the value of c .

(5) If $x(t) = 2u(t - 2) - r(t - 2) + 2r(t - 4) + 2u(t - 4)$, where $u(t)$ is the unit step function and $r(t) = tu(t)$ is the unit ramp function, the value of $x(5)$ is

A) -1

B) 1

C) 2

D) 5

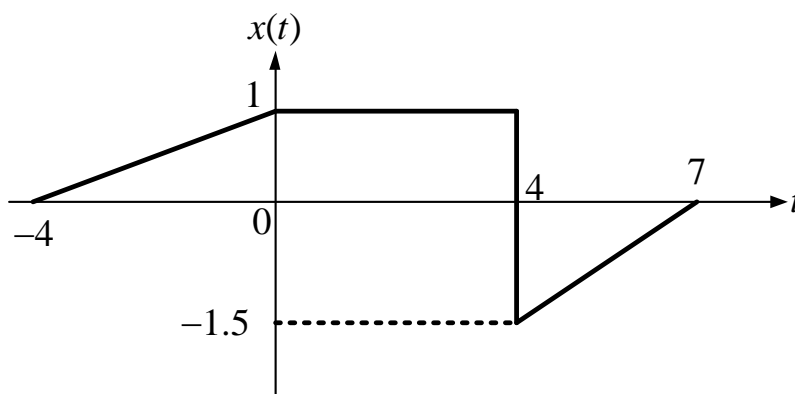
E) 0

Answer is 3 (was not included by mistake)

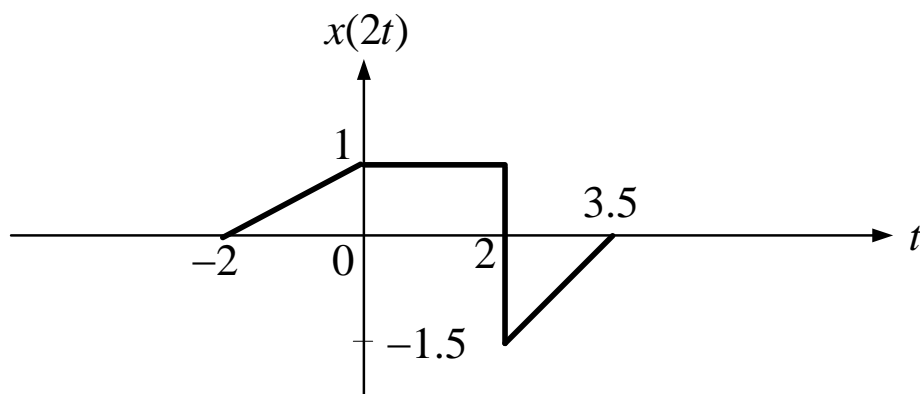
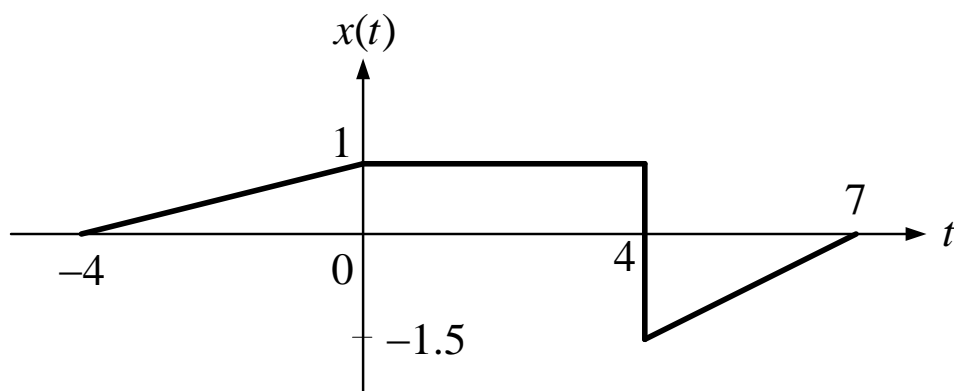
Problem 2:

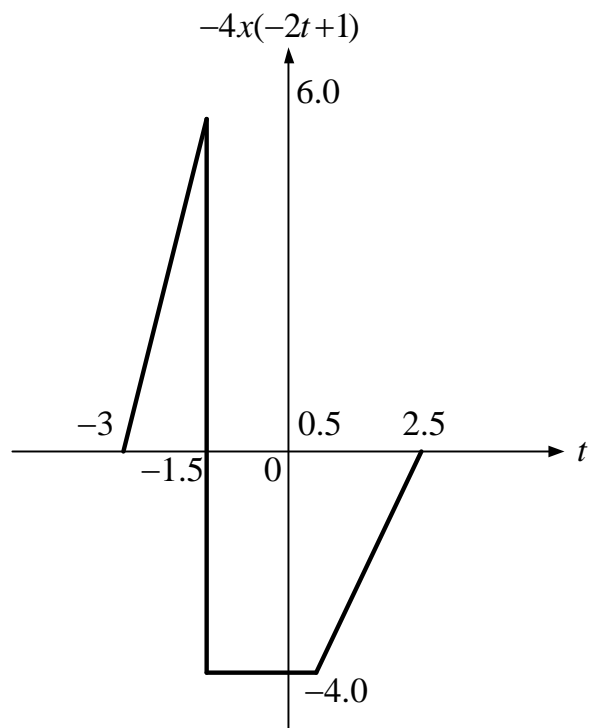
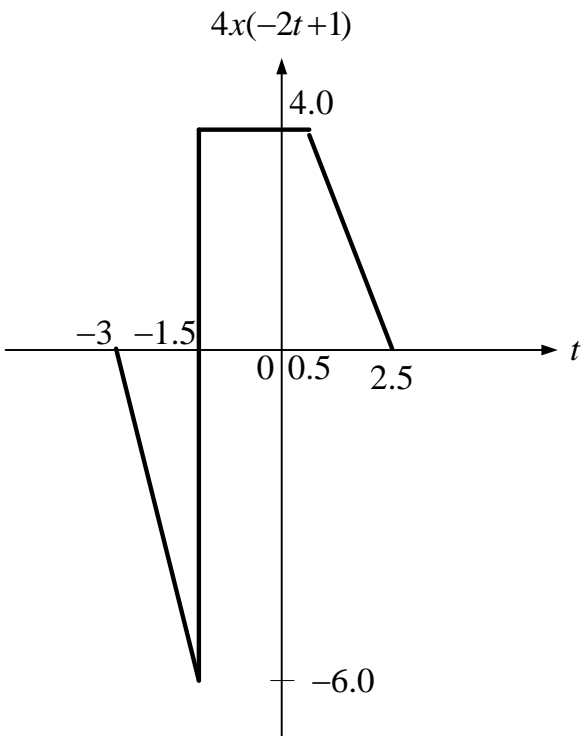
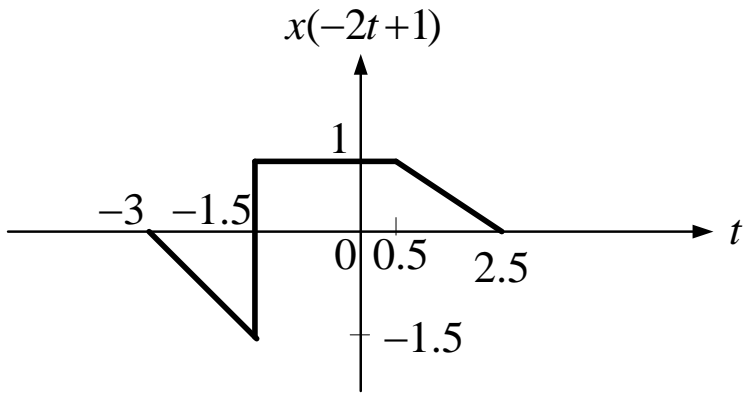
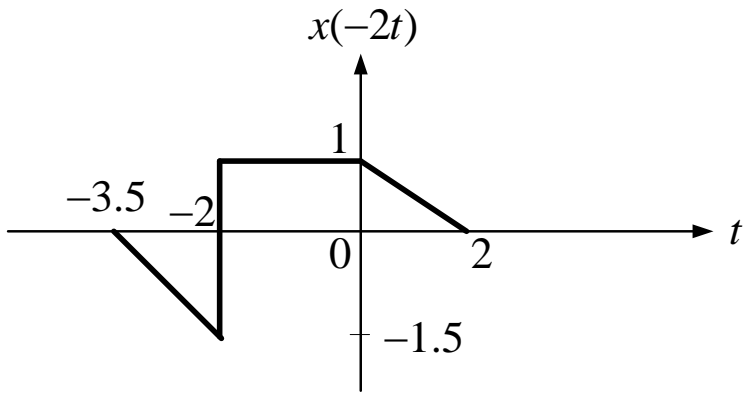
Sketch and label $y(t) = -4x(-2t + 1) + 2$, where $x(t)$ is shown below.

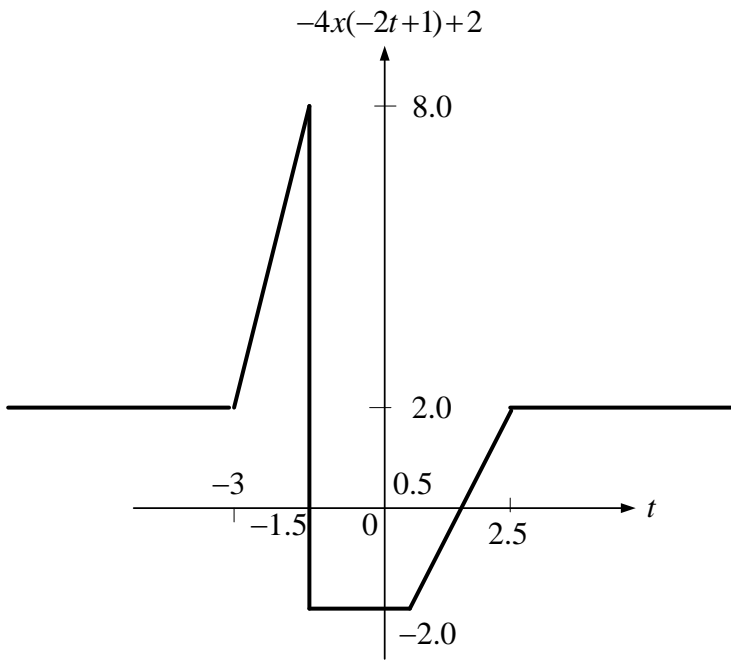
Explain all your steps.



Solution







Problem 3:

Let the input/output of a system described by $y(t) = 4 x(t) u(t)$

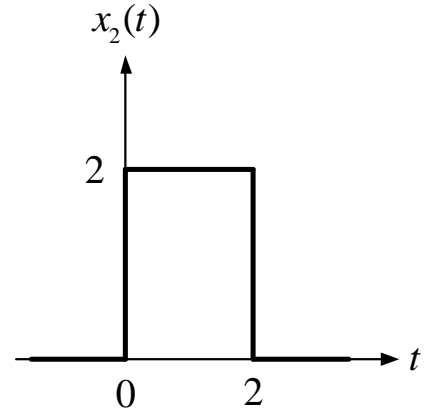
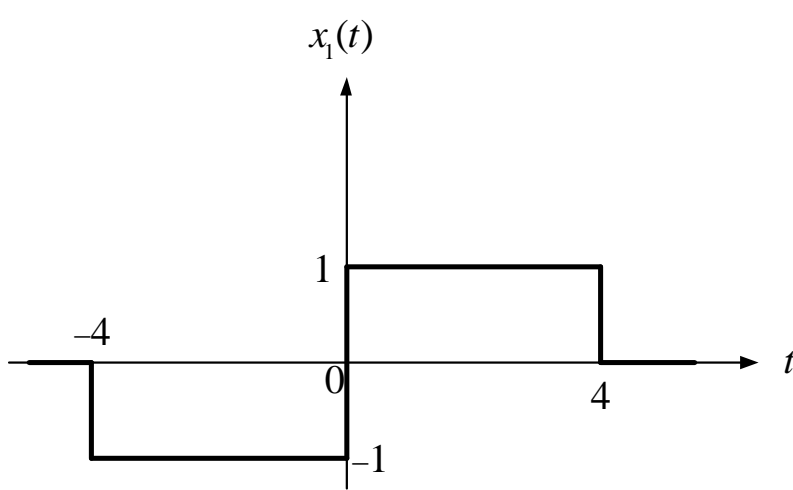
For each of the system properties listed below decide if the property is valid or not by writing **Yes** or **No** and give a brief explanation for deciding **Yes** or **No**

Properties	Yes or No	Explanation
causal	YES	Output do not depend on future input
BIBO Stable	YES	$ x(t) < \infty$ and $ u(t) < \infty \rightarrow y(t) < \infty$
Time-Invariant	No	$y(t) = s[x(t)]=4x(t)u(t) \rightarrow y(t-1) = 4x(t-1)u(t-1)$ $s[x(t-1)]=4x(t-1)u(t)$ $y(t-1) \neq s[x(t-1)] \rightarrow$ Time variant
Linear	YES	$y_1(t) = 4x_1(t)u(t)$ $y_2(t) = 4x_2(t)u(t)$ $s[\alpha_1 x_1(t) + \alpha_2 x_2(t)] = 4(\alpha_1 x_1(t) + \alpha_2 x_2(t))u(t)$ $= \alpha_1 4x_1(t)u(t) + \alpha_2 4x_2(t)u(t) = \alpha_1 y_1(t) + \alpha_2 y_2(t)$ \Rightarrow Linear
Invertible	NO	For all $t < 0$, $y(t) = 0$ \rightarrow many $x(t)$ ($t < 0$) map to $y(t) = 0$ \rightarrow many to one mapping \rightarrow Not invertible

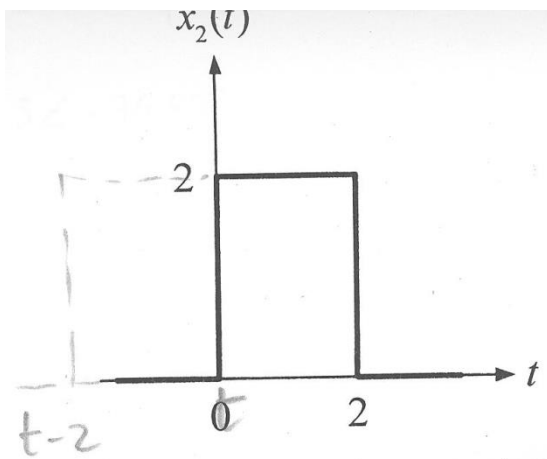
Problem 4:

Consider the functions $x_1(t)$ and $x_2(t)$ sketched below, and let $y(t) = x_1(t) * x_2(t)$.

- Calculate $y(0)$ before performing the convolution.
- Perform the convolution showing all the steps and sketch $y(t)$ showing all labels and important values.



(a)



(a)
$$y(0) = \int_{-\infty}^{\infty} x_1(\tau) x_2(0-\tau) d\tau$$
$$= - \int_{-2}^0 (-1)(2) d\tau$$
$$= -2 [0 - (-2)] = -4$$


(b)

⑥ $t \leq -4 : y(t) = 0$

$4 < t \leq -2 : y(t) = \int_{-4}^t (-1)(2) dt = -2(t+4)$

$-2 < t \leq 0$: Full overlap with the negative box $\Rightarrow y(t) = (-1)(2)(2) = -4$

$0 < t \leq 2$: Partial overlap with both boxes:



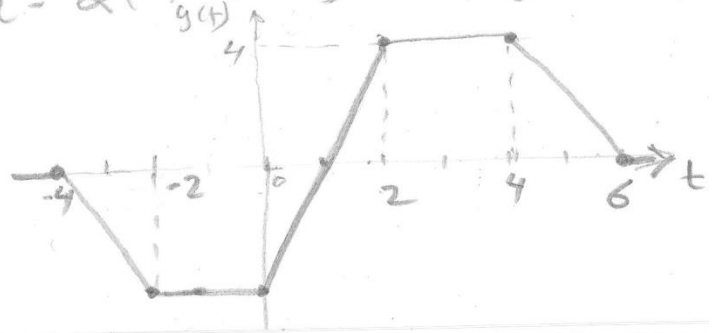
$$y(t) = \int_{t-2}^0 (-1)(2) dz + \int_0^t (1)(2) dz$$
$$= +2(t-2) + 2t = 4t-4$$

$2 < t \leq 4$: Full overlap with the positive box $\Rightarrow y(t) = (1)(2)(2) = 4$

$4 < t \leq 6 : y(t) = \int_{t-2}^4 (1)(2) dz = 2(4 - (t-2)) = 2(6-t)$

$t > 6 : y(t) = 0$

$$\Rightarrow y(t) = \begin{cases} 0 & ; t < -4 \text{ or } t > 6 \\ -2(t+4) & ; 4 < t \leq -2 \\ -4 & ; -2 < t \leq 0 \\ 4t-4 & ; 0 < t \leq 2 \\ 4 & ; 2 < t \leq 4 \\ 2(6-t) & ; 4 < t \leq 6 \end{cases}$$



Problem 5:

Let $x(t)$ be periodical function with period $T_o = 0.1$ s , given as

$$x(t) = 12 \sin(20\pi t) \cdot \cos(40\pi t) + 8 \cos(60\pi t) + 16 \sin^2(20\pi t)$$

(a) Show that the complex Fourier Series coefficients C_k are

$$C_o = 8 \quad C_1 = 3 \angle 90^\circ \quad C_2 = -4 \quad C_3 = 5 \angle -36.87^\circ$$

Let $x(t)$ be periodical function with period $T_o = (1/10)$ s , given as

$$x(t) = 12 \sin(20\pi t) \cdot \cos(40\pi t) + 8 \cos(60\pi t) + 16 \sin^2(20\pi t)$$

(a) Find the complex Fourier Series coefficients C_k ?

(b) Plot the magnitude and phase of C_k (i.e, line spectra)

solution using Trig identities we have

$$\begin{aligned} x(t) &= 6 \sin(60\pi t) - 6 \sin(20\pi t) + 8 \cos(60\pi t) + 8[1 - \cos(40\pi t)] \\ &= 8 - 8 \cos(40\pi t) + 8 \cos(60\pi t) - 6 \sin(20\pi t) + 6 \sin(60\pi t) \\ &= 8 - [4e^{(j40\pi t)} + 4e^{-(j40\pi t)}] + [4e^{(j60\pi t)} + 4e^{-(j60\pi t)}] - \left[\frac{3}{j} e^{(j20\pi t)} - \frac{3}{j} e^{-(j20\pi t)} \right] \\ &\quad + \left[\frac{3}{j} e^{(j60\pi t)} - \frac{3}{j} e^{-(j60\pi t)} \right] \\ &= \left[4 - \frac{3}{j} \right] e^{-(j60\pi t)} - 4e^{-(j40\pi t)} + \frac{3}{j} e^{-(j20\pi t)} + 8 - \frac{3}{j} e^{(j20\pi t)} - 4e^{(j40\pi t)} + \left[4 + \frac{3}{j} \right] e^{(j60\pi t)} \\ \Rightarrow C_o &= 8 \quad C_1 = -\frac{3}{j} = 3 \angle 90^\circ \quad C_2 = -4 \quad C_3 = \left[4 + \frac{3}{j} \right] = [4 - 3j] = 5 \angle -36.87^\circ \end{aligned}$$

(b) Plot the double sided *line spectra* (magnitude and phase) of C_k

