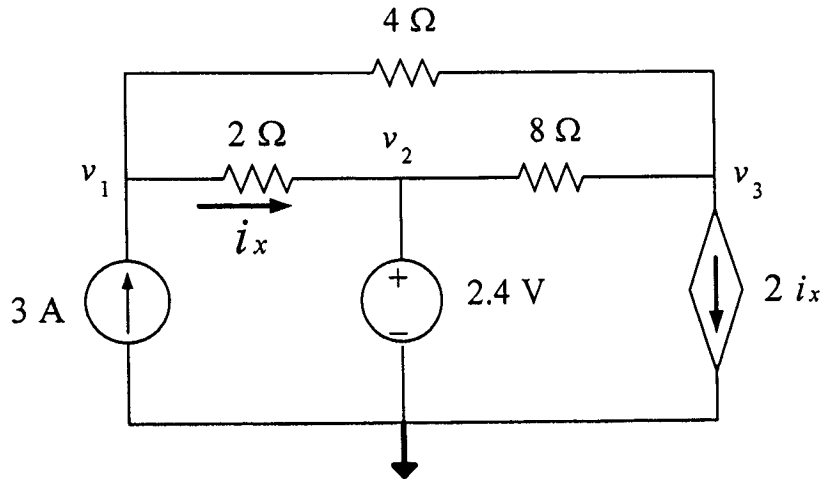


QZ 2

SER	ID	NAME	KEY
-----	----	------	-----



For the circuit shown above, using the nodal voltage method only find the node voltage v_1 , v_2 , v_3 ?

$$v_2 = 2.4 \quad (\text{by inspection})$$

$$\text{KCL at node } v_1 \quad -3 + \frac{v_1 - v_2}{2} + \frac{v_1 - v_3}{4} = 0$$

$$\Rightarrow 3v_1 - v_3 = 16.8 \quad \text{--- (1)}$$

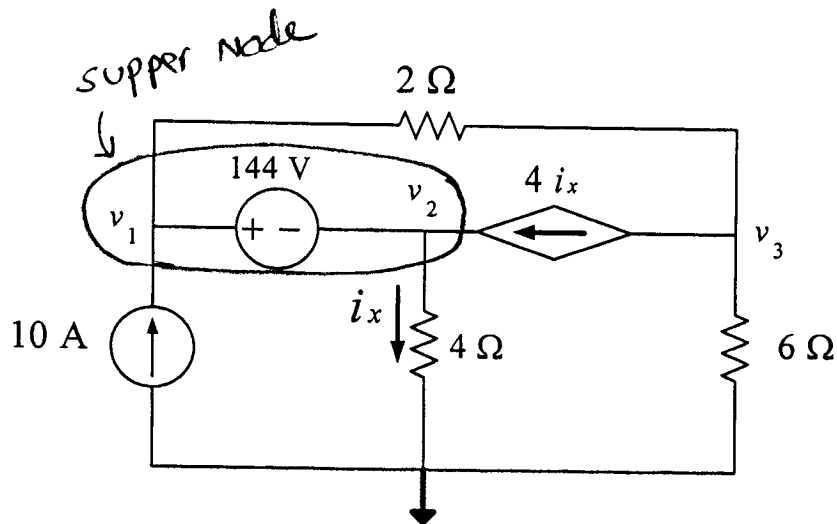
$$\text{KCL at node } v_3 \quad \frac{v_3 - v_2}{8} + \frac{v_3 - v_1}{4} + 2i_x = 0$$

$$2i_x = \frac{v_1 - v_2}{2}$$

$$\Rightarrow 2v_1 + v_3 = 7.2 \quad \text{--- (2)}$$

solving eqs (1) and (2) $\Rightarrow v_1 = 4.8 \text{ V}$
 $v_2 = -2.4 \text{ V}$

SER	ID	NAME	KEY
-----	----	------	-----



For the circuit shown above, find the nodal equations necessary to solve for the node voltages v_1 , v_2 , v_3 . Do not solve the equations

KCL at super node

$$-10 + \frac{v_1 - v_3}{2} + \frac{v_2}{4} - 4i_x = 0$$

$$i_x = \frac{v_2}{4}$$

$$\Rightarrow 2v_1 - 3v_2 - 2v_3 = 40 \quad \text{--- (1)}$$

KCL at node 3

$$\frac{v_3}{6} + \frac{v_3 - v_1}{2} + 4i_x = 0$$

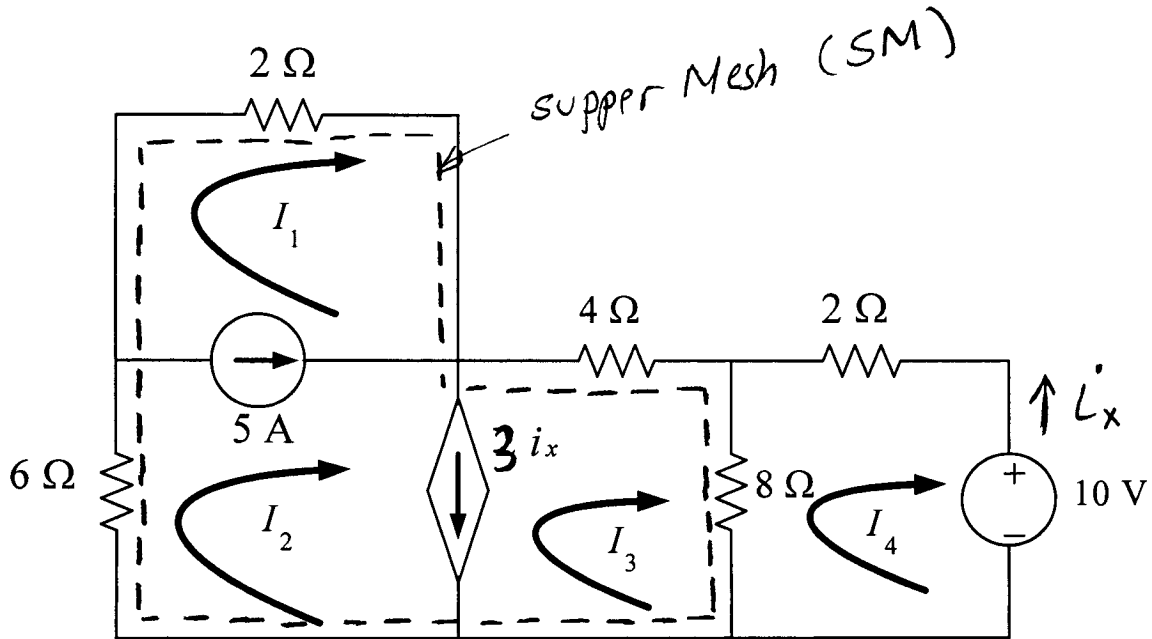
$$\Rightarrow -3v_1 + 6v_2 + 4v_3 = 0 \quad \text{--- (2)}$$

From Independent voltage source, we have

$$v_1 - v_2 = 144 \quad \text{--- (3)}$$

QZ 2

SER	ID	NAME	KEY
-----	----	------	-----



For the circuit shown above, find the mesh equations necessary to solve for the mesh currents I_1, I_2, I_3, I_4 ? **Do not Solve the equations**

KVL on (SM)

$$2I_1 + 4I_3 + 8(I_3 - I_4) + 6I_2 = 0$$

$$\Rightarrow I_1 + 3I_2 + 6I_3 - 4I_4 = 0 \quad - \textcircled{1}$$

KVL on Mesh 4

$$2I_4 + 10 + 8(I_4 - I_3) = 0$$

$$\Rightarrow -4I_3 + 5I_4 = -5 \quad - \textcircled{2}$$

From Independent current source, we have

$$I_2 - I_1 = 5 \quad - \textcircled{3}$$

From dependent current source,

$$I_2 - I_3 = 3i_x \quad i_x = -I_4 \Rightarrow I_2 - I_3 + 3I_4 = 0 \quad - \textcircled{4}$$