

King Fahd University of Petroleum & Minerals Computer Engineering Dept

COE 202 – Fundamentals of Computer
Engineering

Term 081

Dr. Ashraf S. Hasan Mahmoud

Rm 22-148-3

Ext. 1724

Email: ashraf@kfupm.edu.sa

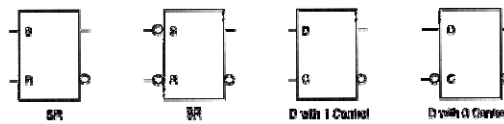
11/26/2015

Dr. Ashraf S. Hasan Mahmoud

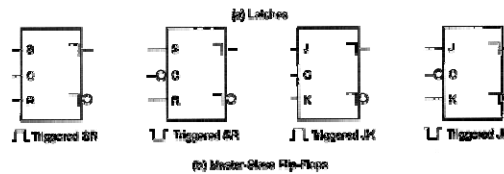
1

Standard Graphics Symbols

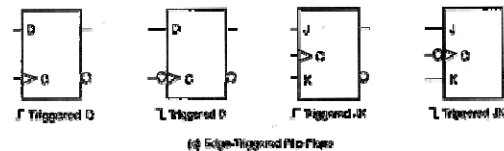
- (a) Latch Symbols



- (b) Master-Slave Flip-Flops



- (c) Edge-Triggered Flip-Flops



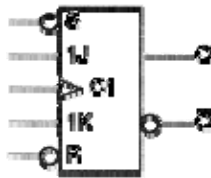
11/26/2015

Dr. Ashraf S. Hasan Mahmoud

2

Asynchronous Inputs

- Special inputs for setting or resetting them asynchronously
 - Independent of the clock input
- The *direct set* and *direct reset* signals are called *preset* and *clear*, respectively
- Examining the function table:
 - When $S=0, R=1$, the FF is set regardless of the clock and the JK inputs
 - When $S=1, R=0$, the FF is reset regardless of the clock and the JK inputs
 - For the JK to operate normally, S and R should be 1 and 1.



(a) Graphic symbol

S	R	J	K	Q	Q'
0	1	X	X	1	0
1	0	X	X	0	1
0	0	X	X	?	Undefined
1	1	0	0	Q	No change
1	1	0	1	0	1
1	1	1	0	1	0
1	1	1	1	Q'	Complement

(b) Function table

11/26/2015

Dr. Ashraf S. Hasan Mahmoud

3

Flip-Flop Characteristic Tables

Table 6-7

(a) JK Flip-Flop				(b) SR Flip-Flop			
J	K	Q(t+1)	Operation	S	R	Q(t+1)	Operation
0	0	Q(t)	No change	0	0	Q(t)	No change
0	1	0	Reset	0	1	0	Reset
1	0	1	Set	1	0	1	Set
1	1	Q'(t)	Complement	1	1	?	Undefined
(c) D Flip-Flop				(d) T Flip-Flop			
D	Q(t+1)	Operation	T	Q(t+1)	Operation		
0	0	Reset	0	Q(t)	No change		
1	1	Set	1	Q'(t)	Complement		

11/26/2015

Dr. Ashraf S. Hasan Mahmoud

4

JK Flip-Flop Characteristic Equation

- Using table on previous slide, one can write:

KQ(t)	00	01	11	10
J				
0	0	1	0	0
1	1	1	0	1

J	K	Q(t)	Q(t+1)
0	0	0	0
0	0	1	1
0	1	0	0
0	1	1	0
1	0	0	1
1	0	1	1
1	1	0	1
1	1	1	0

$$Q(t+1) = J\overline{Q(t)} + \overline{K}Q(t)$$

11/26/2015

Dr. Ashraf S. Hasan Mahmoud

5

SR Flip-Flop Characteristic Equation

- Using table on slide 19, one can write:

RQ(t)	00	01	11	10
S				
0	0	1	0	0
1	1	1	X	X

S	R	Q(t)	Q(t+1)
0	0	0	0
0	0	1	1
0	1	0	0
0	1	1	0
1	0	0	1
1	0	1	1
1	1	0	X
1	1	1	X

$$Q(t+1) = S + \overline{R}Q(t)$$

11/26/2015

Dr. Ashraf S. Hasan Mahmoud

6

D Flip-Flop Characteristic Equation

- Using table slide 19, one can write:

$$Q(t+1) = D$$

D	Q(t)	Q(t+1)
0	0	0
0	1	0
1	0	1
1	1	1

11/26/2015

Dr. Ashraf S. Hasan Mahmoud

7

T Flip-Flop Characteristic Equation

- Using table on slide 19, one can write:

$$Q(t+1) = T \oplus Q(t)$$

T	Q(t)	Q(t+1)
0	0	0
0	1	1
1	0	1
1	1	0

11/26/2015

Dr. Ashraf S. Hasan Mahmoud

8

Flip-Flop Excitation Tables

Table 6-7

(a) JK Flip-Flop				(b) SR Flip-Flop			
Q(t)	Q(t+1)	J	K	Q(t)	Q(t+1)	S	R
0	0	0	X	0	0	0	X
0	1	1	X	0	1	1	0
1	0	X	1	1	0	0	1
1	1	X	0	1	1	X	0

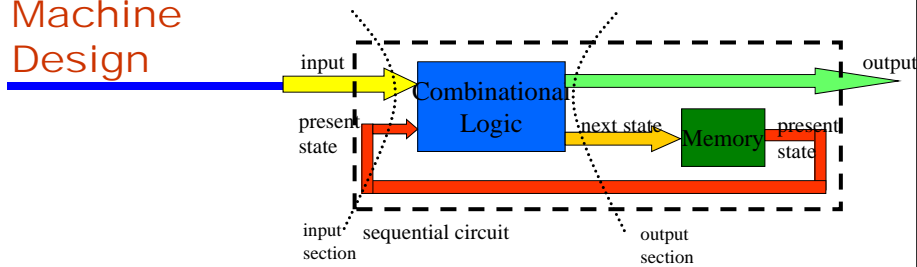
(c) D Flip-Flop			(d) T Flip-Flop		
Q(t)	Q(t+1)	D	Q(t)	Q(t+1)	T
0	0	0	0	0	0
0	1	1	0	1	1
1	0	0	1	0	1
1	1	1	1	1	0

11/26/2015

Dr. Ashraf S. Hasan Mahmoud

9

State Machine Design



Present State		Input	Output	Next State		Flip-Flop Inputs			
A	B	X	Y	A	B	J _A	K _A	J _B	K _B
0	0	0	1	0	1	0	X	1	X
0	0	1	0	0	0	0	X	0	X
0	1	0	1	1	1	1	X	X	0
0	1	1	1	1	0	1	X	X	1
1	0	0	1	1	1	X	0	1	X
1	0	1	0	1	0	X	0	0	X
1	1	0	0	0	0	X	1	X	1
1	1	1	1	1	1	X	0	X	0

input section

output section – derived from problem specification or state diagram

derived from excitation table of the particular flip-flop we use as memory

11/26/2015

10

Example

- **Problem:**
 - a) Write characteristic equations for each type of flip-flops, using the information in Table 6-7. A characteristic equation gives the function $Q(t+1)$ in terms of $Q(t)$ and the input variables to the flip-flop.
 - b) Use the characteristic equation for the JK flip-flop to find equations $A(t+1)$ and $B(t+1)$ from the flip-flop input equations corresponding to Table shown on next slide.
- **Solution:**
 - a) Refer to previous slides for the development of characteristic equations

11/26/2015

Dr. Ashraf S. Hasan Mahmoud

11

Example – cont'd

- **Solution (cont'd):**

b)

- The columns J_A, K_A (for flip flop A) and J_B, K_B (for flip flop B) are obtained with the aid of the excitation table
- To obtain the equations for $J_A, K_A, J_B,$ and K_B we do K-maps in terms of the inputs

Table

Present State		Input X	Next State		Flip-Flop Inputs			
A	B		A	B	J_A	K_A	J_B	K_B
0	0	0	0	1	0	X	1	X
0	0	1	0	0	0	X	0	X
0	1	0	1	1	1	X	X	0
0	1	1	1	0	1	X	X	1
1	0	0	1	1	X	0	1	X
1	0	1	1	0	X	0	0	X
1	1	0	0	0	X	1	X	1
1	1	1	1	1	X	0	X	0

This is input

This is derived from problem specification or state diagram

This is derived from excitation table of the particular flip-flop

11/26/2015

Dr. Ashraf S. Hasan Mahmoud

12

Example – cont'd

- Solution (cont'd):**

b) From the K-maps

$$J_A = B(t),$$

$$K_A = B(t)X',$$

while

$$J_B = X',$$

$$K_B = A(t)X' + A'(t)X$$

Present State		Input X	Next State		Flip-Flop Inputs			
A	B		A	B	J_A	K_A	J_B	K_B
0	0	0	0	1	0	X	1	X
0	0	1	0	0	0	X	0	X
0	1	0	1	1	1	X	X	0
0	1	1	1	0	1	X	X	1
1	0	0	1	1	X	0	1	X
1	0	1	1	0	X	0	X	X
1	1	0	0	0	X	1	X	1
1	1	1	1	1	X	0	X	0

This is input

This is derived from problem specification or state diagram

This is derived from excitation table of the particular flip-flop

BX \ A	00	01	11	10
0	0	0	1	1
1	X	X	X	X

K-map for J_A

BX \ A	00	01	11	10
0	1	0	X	X
1	1	0	X	X

11/26/2015 K-map for J_B

BX \ A	00	01	11	10
0	X	X	X	X
1	0	0	0	1

K-map for K_A

BX \ A	00	01	11	10
0	X	X	1	0
1	X	X	0	1

Dr. Ashraf S. H: K-map for K_B id

13

Example – cont'd

- Solution (cont'd):**

b) Finally, Using the characteristic equation for the A JK flip-flop:

$$A(t+1) = J_A A(t)' + K_A' A(t) \rightarrow$$

$$A(t+1) = B(t)A(t)' + (B(t)X')A(t)$$

$$= B(t)A(t)' + B(t)'A(t) + XA(t)$$

- Same for the B JK flip-flop:

$$B(t+1) = J_B B(t)' + K_B' B(t) \rightarrow$$

$$B(t+1) = X'B(t)' + (A(t)X' + A'(t)X)'B(t)$$

$$B(t+1) = X'B(t)' + A(t)B(t)X + A'(t)B(t)X'$$

11/26/2015

Dr. Ashraf S. Hasan Mahmoud

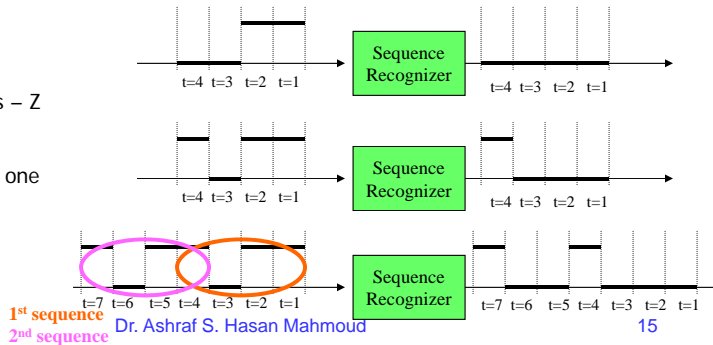
14

Sequence Recognizer

- **Problem:** Design a circuit to recognize the occurrence of the bits 1101 (input from left to right) on an input line X by making an output signal Z equal to 1; Otherwise Z is equal to 0
- **Solution:**
Sequential circuit with one input X and one output Z

Examples of operation:

1. No sequence – Z remains zero
2. sequence occurs – Z is one
3. Two overlapping sequences – Z is one twice!



11/26/2015

1st sequence
2nd sequence Dr. Ashraf S. Hasan Mahmoud

15

Sequence Recognizer – State Diagram

- **Solution (cont'd):**

You always start from an initial state → State S_0

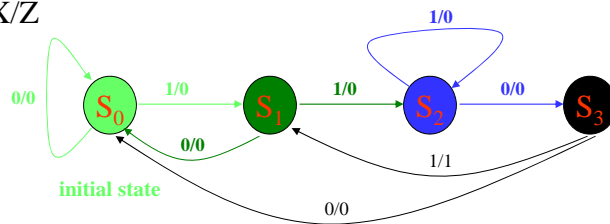
To remember first '1' of sequence → State S_1

To remember two consecutive 1s of sequence → State S_2

To remember '110' sequence → State S_3

Note an arrival of S_1 while in state S_3 should make the output $Z = 1$, and move to state S_1 to remember this '1' which could be the first digit of another 1101 sequence

Arc label: X/Z




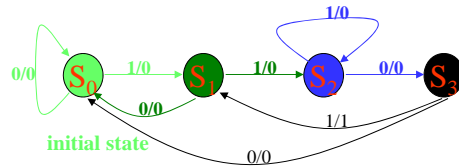
11/26/2015

Dr. Ashraf S. Hasan Mahmoud

16

Sequence Recognizer – State Table

- Solution (cont'd):**



Present State	Next State		Output Z	
	X = 0	X = 1	X = 0	X = 1
S ₀	S ₀	S ₁	0	0
S ₁	S ₀	S ₂	0	0
S ₂	S ₃	S ₂	0	0
S ₃	S ₀	S ₁	0	1

11/26/2015

Dr. Ashraf S. Hasan Mahmoud

17


Sequence Recognizer – State Table (2)

- Solution (cont'd):**

Present State	Next State		Output Z	
	X = 0	X = 1	X = 0	X = 1
S ₀	S ₀	S ₁	0	0
S ₁	S ₀	S ₂	0	0
S ₂	S ₃	S ₂	0	0
S ₃	S ₀	S ₁	0	1

State Code Assignment (Grey Coding):

S₀ → 00
 S₁ → 01
 S₂ → 11
 S₃ → 10



Present State	Next State		Output Z	
	X = 0	X = 1	X = 0	X = 1
00	00	01	0	0
01	00	11	0	0
11	10	11	0	0
10	00	01	0	1

11/26/2015

Dr. Ashraf S. Hasan Mahmoud

18


Sequence Recognizer – State Table (3)

- Solution (cont'd):**

Present State	Next State		Output Z	
	X = 0	X = 1	X = 0	X = 1
00	00	01	0	0
01	00	11	0	0
11	10	11	0	0
10	00	01	0	1

-Another way of writing the state table
 - Four states → we need two flip-flops A & B
 (in general if number of states is n, then we require $\log_2 n$ flip-flops)

Present State		Input X	Next State		Output Z
A	B		A	B	
0	0	0	0	0	0
0	0	1	0	1	0
0	1	0	0	0	0
0	1	1	1	1	0
1	0	0	0	0	0
1	0	1	0	1	1
1	1	0	1	0	0
1	1	1	1	1	0



11/26/2015

Dr. Ashraf S. Hasan Mahmoud

19

Sequence Recognizer – Design Using D Flip-Flops

- Solution (cont'd):**

Present State		Input X	Next State		Output Z
A	B		A	B	
0	0	0	0	0	0
0	0	1	0	1	0
0	1	0	0	0	0
0	1	1	1	1	0
1	0	0	0	0	0
1	0	1	0	1	1
1	1	0	1	0	0
1	1	1	1	1	0

-The characteristic equation for the D flip-flop is $Q(t+1) = D$
 → The D input is the same as the desired next state

Present State		Input X	Next State		Output Z	D Flip-Flops Input	
A	B		A	B		D _A	D _B
0	0	0	0	0	0	0	0
0	0	1	0	1	0	0	1
0	1	0	0	0	0	0	0
0	1	1	1	1	0	1	1
1	0	0	0	0	0	0	0
1	0	1	0	1	1	0	1
1	1	0	1	0	0	1	0
1	1	1	1	1	0	1	1

(c) D Flip-Flop

Q(t)	Q(t+1)	D
0	0	0
0	1	1
1	0	0
1	1	1



11/26/2015

Dr. Ashraf S. Hasan Mahmoud

20

Sequence Recognizer – Design Using *D* Flip-Flops (2)

- Solution (cont'd):**

Present State			Next State			Output	<i>D</i> Flip-Flops Input	
A	B	X	A	B	Z	<i>D</i> _A	<i>D</i> _B	
0	0	0	0	0	0	0	0	
0	0	1	0	1	0	0	1	
0	1	0	0	0	0	0	0	
0	1	1	1	1	0	1	1	
1	0	0	0	0	0	0	0	
1	0	1	0	1	1	0	1	
1	1	0	1	0	0	1	0	
1	1	1	1	1	0	1	1	



-Use K-maps to get D_A and D_B in terms of the states A and B and the input X
 -Use K-map to get Z in terms of states A and B and the input X

BX \ A	00	01	11	10	
0	0	0	1	0	$D_A = AB + BX$
1	0	0	1	1	
BX \ A	00	01	11	10	
0	0	1	1	0	$D_B = X$
1	0	1	1	0	
BX \ A	00	01	11	10	
0	0	0	0	0	$Z = AB'X$
1	0	1	0	0	

11/26/2015

Dr. Ashraf S. Hasan Mahmoud

21

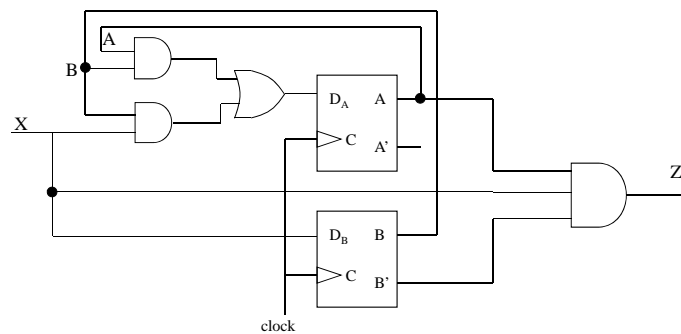
Sequence Recognizer – Design Using *D* Flip-Flops (3)

- Solution (cont'd):**

$$D_A = AB + BX$$

$$D_B = X$$

$$Z = AB'X$$

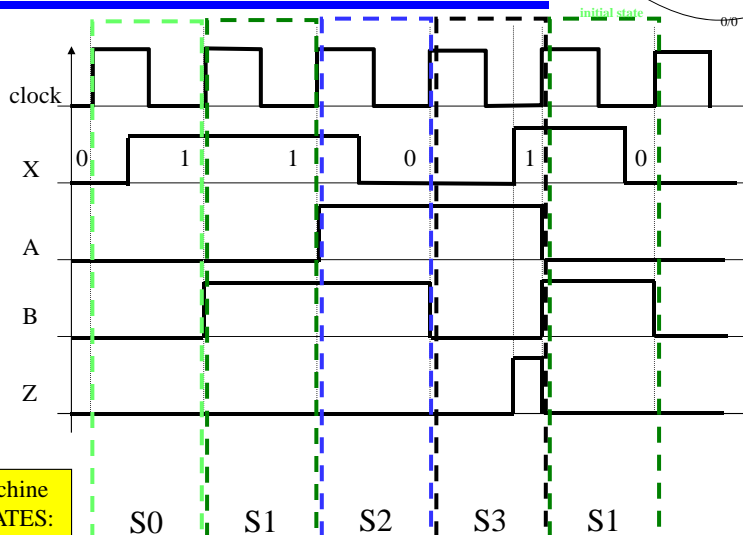
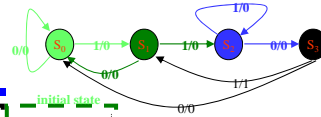


11/26/2015

Dr. Ashraf S. Hasan Mahmoud

22

Let's Check Our Design - Timing Diagram



Machine STATES:

11/26/2015

Dr. Ashraf S. Hasan Mahmoud

23

Let's Check Our Design - Timing Diagram - cont'd

• Important Notes

- The value of the input prior to the positive edge is the value used to generate the rest of the outputs
 - In other words, the input signal is sampled at the positive-edge instant minus epsilon – these samples constitute the input signal X
- Positive-edge triggered FFs respond to the input existing prior to the positive edge of the clock – and their output (state) lasts till the next positive edge at least
- The combination logic (AND gate for this example) for producing Z responds to instantaneously to signals at the input of this combination logic – regardless of the clock signal

11/26/2015

Dr. Ashraf S. Hasan Mahmoud

24

Sequence Recognizer – Design Using JK Flip-Flops

• **Solution (cont'd):**

-Use the excitation table for the JK flip-flop
-To fill the J/K entries for each flip-flop

Present State			Next State			Output
A	B	X	A	B	Z	
0	0	0	0	0	0	
0	0	1	0	1	0	
0	1	0	0	0	0	
0	1	1	1	1	0	
1	0	0	0	0	0	
1	0	1	0	1	1	
1	1	0	1	0	0	
1	1	1	1	1	0	

Present State			Next State			JK Flip-Flop Input		JK Flip-Flop Input	
A	B	X	A	B	Z	J _A	K _A	J _B	K _B
0	0	0	0	0	0	0	X	0	X
0	0	1	0	1	0	0	X	1	X
0	1	0	0	0	0	0	X	X	1
0	1	1	1	1	0	1	X	X	0
1	0	0	0	0	0	X	1	0	X
1	0	1	0	1	1	X	1	1	X
1	1	0	1	0	0	X	0	X	1
1	1	1	1	1	0	X	0	X	0

(a) JK Flip-Flop

Q(t)	Q(t+1)	J	K
0	0	0	X
0	1	1	X
1	0	X	1
1	1	X	0



11/26/2015

Dr. Ashraf S. Hasan Mahmoud

25

Sequence Recognizer – Design Using JK Flip-Flops (2)

• **Solution (cont'd):**

-Use K-maps to get D_A and D_B in terms of the states A and B and the input X
-Use K-map to get Z in terms of states A and B and the input X

Present State			Next State			JK Flip-Flop Input		JK Flip-Flop Input	
A	B	X	A	B	Z	J _A	K _A	J _B	K _B
0	0	0	0	0	0	0	X	0	X
0	0	1	0	1	0	0	X	1	X
0	1	0	0	0	0	0	X	X	1
0	1	1	1	1	0	1	X	X	0
1	0	0	0	0	0	X	1	0	X
1	0	1	0	1	1	X	1	1	X
1	1	0	1	0	0	X	0	X	1
1	1	1	1	1	0	X	0	X	0

BX \ A	00	01	11	10
0	0	0	1	0
1	x	x	x	x

$J_A = BX$

BX \ A	00	01	11	10
0	x	x	x	x
1	1	1	0	0

$K_A = B'$

BX \ A	00	01	11	10
0	0	1	x	x
1	0	1	x	x


$J_B = X$

BX \ A	00	01	11	10
0	x	x	0	1
1	x	x	0	1

$K_B = X'$

BX \ A	00	01	11	10
0	0	0	0	0
1	0	1	0	0

$Z = AB'X$



11/26/2015

Dr. Ashraf S. Hasan Mahmoud

26

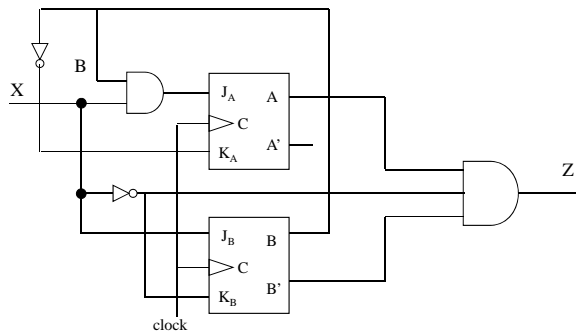
Sequence Recognizer – Design Using JK Flip-Flops (3)

- **Solution (cont'd):**

$$J_A = BX \quad K_A = B'$$

$$J_B = X \quad K_B = X'$$

$$Z = AB'X$$



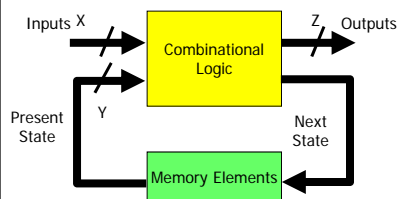
11/26/2015

Dr. Ashraf S. Hasan Mahmoud

27

Mealy and Moore Type Finite State Machines

- **Mealy Machine:**
 - In a Mealy machine, the outputs are a function of the present state and the value of the inputs as shown in figure.
 - The outputs may change asynchronously in response to any change in the inputs.



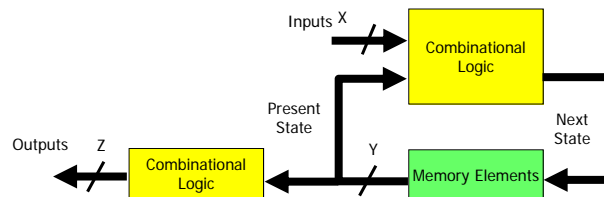
11/26/2015

Dr. Ashraf S. Hasan Mahmoud

28

Mealy and Moore Type Finite State Machines – cont'd

- Moore Machine:
 - In a Moore machine the outputs depend only on the present state as shown in figure.
 - A combinational logic block maps the inputs and the current state into the necessary flip-flop inputs to store the appropriate next state just like Mealy machine.
 - However, the outputs are computed by a combinational logic block whose inputs are only the flip-flops state outputs.
 - The outputs change synchronously with the state transition triggered by the active clock edge



11/26/2015

Dr. Ashraf S. Hasan Mahmoud

29

Serial Two's Complementer – Problem 6-15

- **Problem:** A serial two's complementer is to be designed. A binary integer of arbitrary length is presented to the serial two's complementer least significant bit first on input X. When a given bit is presented on input X, the corresponding output bit is to appear during the same clock cycle on output Z. To indicate that a sequence is complete and that the circuit is to be initialized to receive another sequence, input Y becomes 1 for one clock cycle. Otherwise, Y is 0
 - a) Find the state diagram for the serial two's complementer
 - b) Find the state table for the serial two's complementer
 - c) Design the circuit using *D* flip-flops
 - d) Design the circuit using *JK* flip-flops

11/26/2015

Dr. Ashraf S. Hasan Mahmoud

30

Serial Two's Complementer – Problem 6-15

- Solution:**

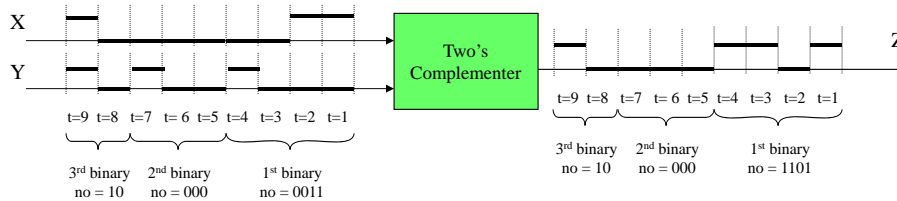
Remember to complement $A_n A_{n-1} \dots A_1 A_0$, we scanned the binary digits from LSB to MSB, skipping all zeros and passing the first 1 bit. All subsequent bits are complemented. The result is the two's complement of $A_n A_{n-1} \dots A_1 A_0$

Example: 2's complement of (10110100) is equal to (01001100)

Example: 2's complement of (0011) is equal to (1101)

Example: 2's complement of (000) is equal to (000)

Example: 2's complement of (10) is equal to (10)



11/26/2015

Dr. Ashraf S. Hasan Mahmoud

31

Serial Two's Complementer – Problem 6-15 – State Diagram

- Solution (cont'd):**

Two inputs X: the binary bits in serial

Y: indicator when number is complete

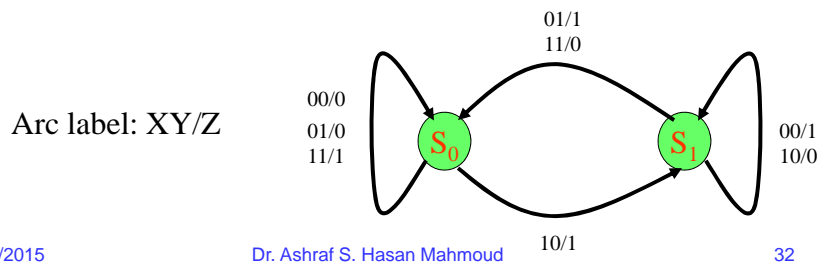
Scanning the binary number, we switch between two modes:

copying binary digits till first 1 is found

inverting subsequent bits

Hence TWO states are needed – need to remember that we passed the one

Because we have four inputs, each state has FOUR departing arcs



11/26/2015

Dr. Ashraf S. Hasan Mahmoud

32

Serial Two's Complementer – Problem 6-15 – State Diagram (2)

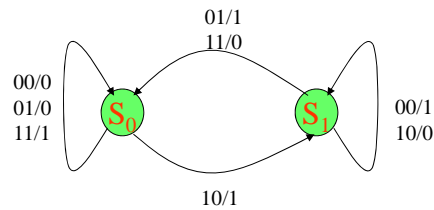
- Solution (cont'd):**

State S_0 : initial state (copying X to Z without inverting bits)

- if zero arrives (input patterns 00 or 01) on X it is copied to Z –
- if one arrives (input pattern 11) on X it is also copied to Z if Y is 1 (i.e last bit of number)
- if one arrives and it is not last bit (input pattern 10) then it is copied to Z but circuit moves to the other state – to start complementing bits

State S_1 : (copying X to Z while inverting bits) till Y = 1

when Y = 1, another number is about to start – move to initial state S_0



11/26/2015

Dr. Ashraf S. Hasan Mahmoud

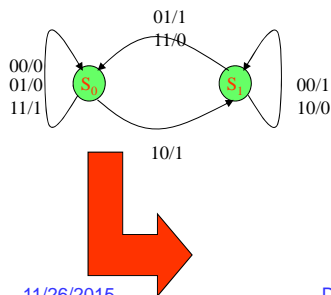
33

Serial Two's Complementer – Problem 6-15 – State Table

- Solution (cont'd):**

2 States \rightarrow need one flip-flop

Let $S_0 = 0$, while $S_1 = 1$



Present State $Q(t)$	Inputs		Next State $Q(t+1)$	Output Z
	X	Y		
0	0	0	0	0
0	0	1	0	0
0	1	0	1	1
0	1	1	0	1
1	0	0	1	1
1	0	1	0	1
1	1	0	1	0
1	1	1	0	0

11/26/2015

Dr. Ashraf S. Hasan Mahmoud

34

Serial Two's Complementer – Problem 6-15 – Implementation Using *D* Flip-Flops

- Solution (cont'd):**

Present State	Inputs		Next State	Output	<i>D</i> -Flip-Flop Input
<i>Q</i> (<i>t</i>)	<i>X</i>	<i>Y</i>	<i>Q</i> (<i>t</i> +1)	<i>Z</i>	<i>D</i> ₀
0	0	0	0	0	0
0	0	1	0	0	0
0	1	0	1	1	1
0	1	1	0	1	0
1	0	0	1	1	1
1	0	1	0	1	0
1	1	0	1	0	1
1	1	1	0	0	0

(c) <i>D</i> Flip-Flop		
<i>Q</i> (<i>t</i>)	<i>Q</i> (<i>t</i> +1)	<i>D</i>
0	0	0
0	1	1
1	0	0
1	1	1

<i>XY</i>	00	01	11	10
<i>Q</i> (<i>t</i>)				
0	0	0	0	1
1	1	0	0	1

$$D_0 = QY' + XY'$$

<i>XY</i>	00	01	11	10
<i>Q</i> (<i>t</i>)				
0	0	0	1	1
1	1	1	0	0

$$Z = Q'X + QX'$$

11/26/2015

Dr. Ashraf S. Hasan Mahmoud

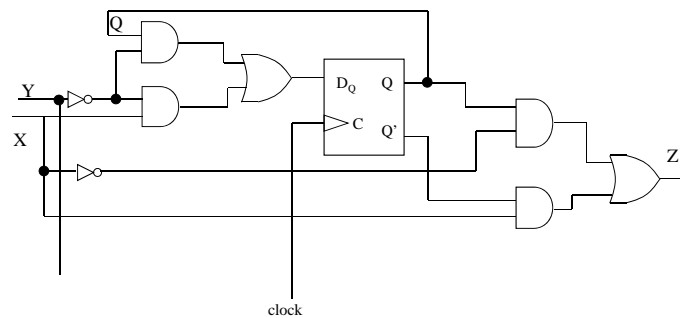
35

Serial Two's Complementer – Problem 6-15 – Implementation Using *D* Flip-Flops (2)

- Solution (cont'd):**

$$D_0 = QY' + XY'$$

$$Z = Q'X + QX'$$

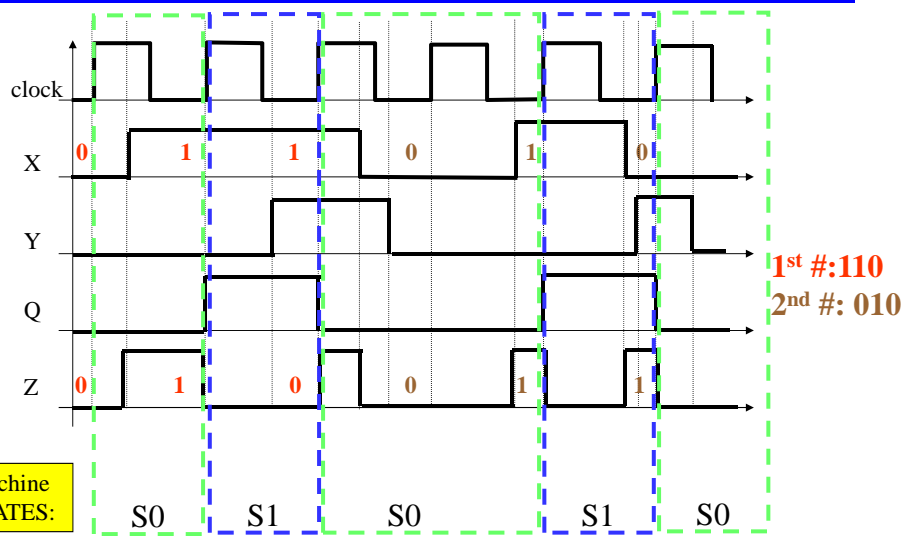


11/26/2015

Dr. Ashraf S. Hasan Mahmoud

36

Let's Check Our Design – Timing Diagram For Serial Complementer



Serial Two's Complementer – Problem 6-15 – Implementation Using JK Flip-Flops

• Solution (cont'd):

Present State	Inputs		Next State	Output	JK-Flip-Flop Input	
Q(t)	X	Y	Q(t+1)	Z	J _Q	K _Q
0	0	0	0	0	0	X
0	0	1	0	0	0	X
0	1	0	1	1	1	X
0	1	1	0	1	0	X
1	0	0	1	1	X	0
1	0	1	0	1	X	1
1	1	0	1	0	X	0
1	1	1	0	0	X	1

(a) JK Flip-Flop

Q(t)	Q(t+1)	J	K
0	0	0	X
0	1	1	X
1	0	X	1
1	1	X	0

XY	00	01	11	10
Q(t)	0	0	0	1
1	x	x	x	x

$$J_Q = XY'$$

XY	00	01	11	10
Q(t)	x	x	x	x
1	0	1	1	0

$$K_Q = Y$$

XY	00	01	11	10
Q(t)	0	0	1	1
1	1	1	0	0

$$Z = Q'X + QX'$$

11/26/2015

Dr. Ashraf S. Hasan Mahmoud

38

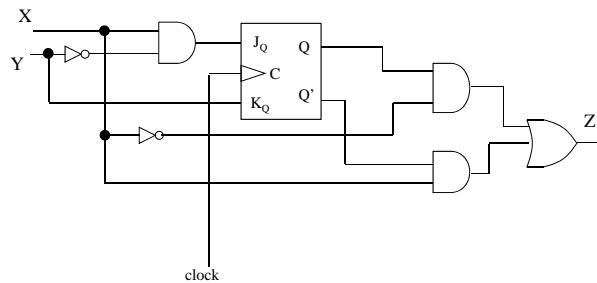
Serial Two's Complementer – Problem 6-15 – Implementation Using *JK* Flip-Flops (2)

- **Solution (cont'd):**

$$J_Q = XY'$$

$$K_Q = Y$$

$$Z = Q'X + QX'$$



11/26/2015

Dr. Ashraf S. Hasan Mahmoud

39

More Examples: Problem 6-14

- **Problem:** Design a sequential circuit with two *D* flip-flops A and B and one input X. When X = 0, the state of the circuit remains the same. When X = 1, the circuit goes through the state transitions 00 to 10 to 11 to 01, and back to 00, and then repeats.

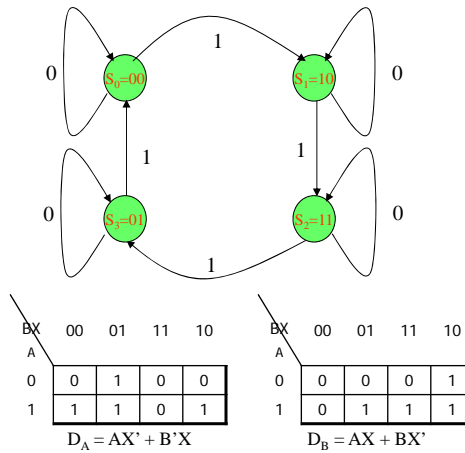
11/26/2015

Dr. Ashraf S. Hasan Mahmoud

40

Problem 6 -14 – State Diagram / Table

• **Solution:**



Present State		Input	Next State	
A	B	X	A	B
0	0	0	0	0
0	0	1	1	0
0	1	0	0	1
0	1	1	0	0
1	0	0	1	0
1	0	1	1	1
1	1	0	1	1
1	1	1	0	1

Note that the output in this case is the states AB

11/26/2015

Dr. Ashraf S. Hasan Mahmoud

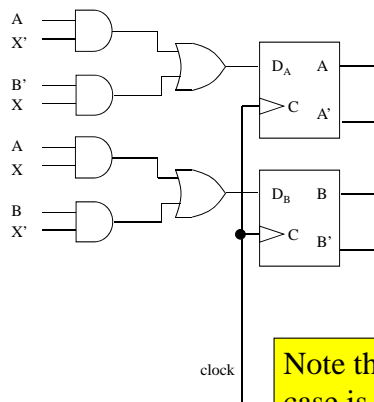
41

Problem 6-14 – Circuit Implementation

• **Solution:**

$D_A = AX' + B'X$

$D_B = AX + BX'$



Note that the output in this case is the states AB

11/26/2015

Dr. Ashraf S. Hasan Mahmoud

42

Another Example: Problem 6-5

- **Problem:** A sequential circuit with two D flip-flops A and B, two inputs X and Y, and one output Z is specified by the following input equations:

$$D_A = X'Y + XA; D_B = X'B + XA; Z = XB$$

- Draw the logic diagram of the circuit
- Derive the state table
- Derive the state diagram

This is NOT a design problem – should be much easier than the ones presented earlier!

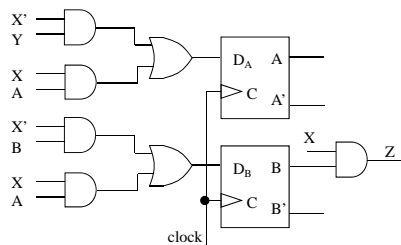
11/26/2015

Dr. Ashraf S. Hasan Mahmoud

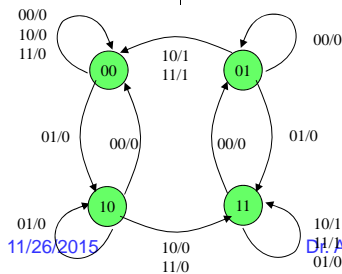
43

Problem 6-5:

- **Solution:**



Present State		Inputs		Next State		Output
A	B	X	Y	A	B	Z
0	0	0	0	0	0	0
0	0	0	1	1	0	0
0	0	1	0	0	0	0
0	0	1	1	0	0	0
0	1	0	0	0	1	0
0	1	0	1	1	1	0
0	1	1	0	0	0	1
0	1	1	1	0	0	1
1	0	0	0	0	0	0
1	0	0	1	1	0	0
1	0	1	0	1	1	0
1	0	1	1	1	1	0
1	1	0	0	0	1	0
1	1	0	1	1	1	0
1	1	1	0	1	1	1
1	1	1	1	1	1	1



11/26/2015

Dr. Ashraf S. Hasan Mahmoud

44

Yet Another Example: Up/Down Counter with Enable

- Problem:** Design a sequential circuit with two JK flip-flops A and B and two inputs X and E. If $E = 0$, the circuit remains in the same state, regardless of the input X. When $E = 1$ and $X = 1$, the circuit goes through the state transitions from 00 to 01 to 10 to 11, back to 00, and then repeats. When $E = 1$ and $X = 0$, the circuit goes through the state transitions from 00 to 11 to 10 to 01, back to 00 and then repeats.

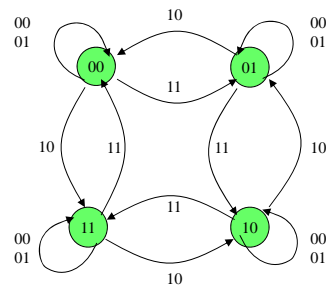
11/26/2015

Dr. Ashraf S. Hasan Mahmoud

45

Example: State Diagram/Table

- Solution:**



Arc Label: EX

(a) JK Flip-Flop

Q(t)	Q(t+1)	J	K
0	0	0	X
0	1	1	X
1	0	X	1
1	1	X	0

Present State		Inputs		Next State		FF Inputs			
A	B	E	X	A	B	J_A	K_A	J_B	K_B
0	0	0	0	0	0	0	X	0	X
0	0	0	1	0	0	0	X	0	X
0	0	1	0	1	1	1	X	1	X
0	0	1	1	0	1	0	X	1	X
0	1	0	0	0	1	0	X	X	0
0	1	0	1	0	1	0	X	X	0
0	1	1	0	0	0	0	X	X	1
0	1	1	1	1	0	1	X	X	1
1	0	0	0	1	0	X	0	0	X
1	0	0	1	1	0	X	0	0	X
1	0	1	0	0	1	X	1	1	X
1	0	1	1	1	1	X	0	1	X
1	1	0	0	1	1	X	0	X	0
1	1	0	1	1	1	X	0	X	0
1	1	1	0	1	0	X	0	X	1
1	1	1	1	0	0	X	1	X	1

11/26/2015

Dr. Ashraf S. Hasan Mahmoud

46

Example – Logic Circuit

• **Solution:**

EX AB	00	01	11	10
00	0	0	0	1
01	0	0	1	0
11	x	x	x	x
10	x	x	x	x

$$J_A = BEX + B'EX'$$

EX AB	00	01	11	10
00	x	x	x	x
01	x	x	x	x
11	0	0	1	0
10	0	0	0	1

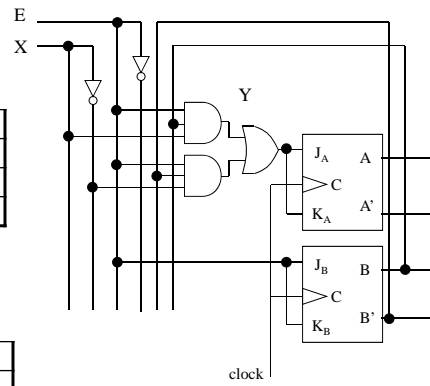
$$K_A = BEX + B'EX'$$

EX AB	00	01	11	10
00	0	0	1	1
01	x	x	x	x
11	x	x	x	x
10	0	0	1	1

$$J_B = E$$

EX AB	00	01	11	10
00	x	x	x	x
01	0	0	1	1
11	0	0	1	1
10	x	x	x	x

$$K_B = E$$



11/26/2015

Dr. Ashraf S. Hasan Mahmoud

47