



STUDENT NUMBER:

NAME:

SECTION NUMBER:

KING FAHD UNIVERSITY OF PETROLEUM AND MINERALS

COURSE: CH101

EXAM: THE FINAL EXAM OF CHEM101 - 042

TEST CODE NUMBER: XXX

INSTRUCTIONS:

1. PRINT YOUR STUDENT NUMBER, NAME, AND SECTION NUMBER ON THE EXAM.
2. PRINT YOUR STUDENT NUMBER, SECTION NUMBER, AND YOUR NAME ON THE EXAM ANSWER FORM. PRINT THE TEST CODE NUMBER, OR CHECK IT IF IT HAS ALREADY BEEN PRINTED ON YOUR ANSWER FORM.
3. CODE YOUR STUDENT NUMBER AND SECTION NUMBER ON THE EXAM ANSWER FORM. CODE THE TEST CODE NUMBER, OR CHECK IT IF IT IS ALREADY CODED.
4. CODE YOUR ANSWERS ON THE EXAM ANSWER FORM. YOU MUST NOT GIVE MORE THAN ONE ANSWER PER QUESTION.
5. RETURN THE EXAM AND ANSWER FORM TO THE INSTRUCTOR WHEN YOU HAVE FINISHED.



STUDENT NUMBER:

NAME:

SECTION NUMBER:

KING FAHD UNIVERSITY OF PETROLEUM AND MINERALS

COURSE: CH101

EXAM: THE FINAL EXAM OF CHEM101 - 042

TEST CODE NUMBER: XXX

INSTRUCTIONS:

1. PRINT YOUR STUDENT NUMBER, NAME, AND SECTION NUMBER ON THE EXAM.
2. PRINT YOUR STUDENT NUMBER, SECTION NUMBER, AND YOUR NAME ON THE EXAM ANSWER FORM. PRINT THE TEST CODE NUMBER, OR CHECK IT IF IT HAS ALREADY BEEN PRINTED ON YOUR ANSWER FORM.
3. CODE YOUR STUDENT NUMBER AND SECTION NUMBER ON THE EXAM ANSWER FORM. CODE THE TEST CODE NUMBER, OR CHECK IT IF IT IS ALREADY CODED.
4. CODE YOUR ANSWERS ON THE EXAM ANSWER FORM. YOU MUST NOT GIVE MORE THAN ONE ANSWER PER QUESTION.
5. RETURN THE EXAM AND ANSWER FORM TO THE INSTRUCTOR WHEN YOU HAVE FINISHED.



 QUESTION NO: 1

All the numbers in

$$\begin{array}{r} 123.4 + 1.42 \\ \hline 17.0000 - 16.950 \end{array}$$

are measured quantities. The number of significant figures to which the answer must be given is:

- A. 2
- B. 1
- C. 3
- D. 4
- E. 5

 QUESTION NO: 2

Four samples from a solution known to contain 12.40% CaCl_2 were analyzed by a student. The following results were obtained:

12.81% 12.84% 12.80% 12.87%

These results

- A. are precise but not accurate
- B. are not precise and not accurate
- C. are accurate but not precise
- D. prove that there are no systematic errors
- E. prove that random errors are absent



QUESTION NO: 3

Which statement is false?

- A. By directing an alpha-particle beam onto a thin gold foil, Rutherford concluded that the atom has a plum pudding structure.
- B. Using a cathode ray tube, Thomson discovered that atoms contain electrons.
- C. The cathode ray tube experiment was the one in which electrons were discovered.
- D. Using charged oil droplets, Millikan determined the charge of an electron.
- E. Most alpha particles are not deflected by a thin metal foil.

QUESTION NO: 4

The correct name of CrCl_3 is:

- A. Chromium (III) chloride
- B. Chromium chloride
- C. Chromium trichloride
- D. Chromium (III) chlorite
- E. Chromium perchlorate



QUESTION NO: 5

Which pair of the following compounds illustrates the law of multiple proportions?

- A. CrCl_2 , CrCl_3
- B. NO_2 , KNO_3
- C. Na_2CO_3 , NaHCO_3
- D. FeCl_2 , $\text{Fe}(\text{ClO})_2$
- E. PCl_3 , AlCl_3

QUESTION NO: 6

Chlorine has two isotopes, ^{35}Cl (35.0 amu) and ^{37}Cl (37.0 amu). Which is the more abundant one and what is its percent abundance?

- A. ^{35}Cl , abundance 77.5%
- B. ^{35}Cl , abundance 22.5%
- C. ^{37}Cl , abundance 77.5%
- D. ^{37}Cl , abundance 22.5%
- E. ^{35}Cl , abundance 55.5%



 QUESTION NO: 7

When octane (C_8H_{18}) is burned in oxygen in a particular combustion engine, the actual yield of products (carbon dioxide and water) is 93%. Considering this yield, what mass of carbon dioxide will be produced in this engine, when 15.0 g of octane are burned with 15.0 g of oxygen gas?

- A. 12 g
- B. 13 g
- C. 21 g
- D. 54 g
- E. 43 g

 QUESTION NO: 8

The percent composition by mass of a compound is 76.0 % C, 12.8% H and 11.2 % O. The molar mass of this compound is 284.5 g/mol. What is the molecular formula of the compound?

- A. $C_{18}H_{36}O_2$
- B. $C_{20}H_{12}O_2$
- C. $C_{16}H_{28}O_4$
- D. $C_9H_{18}O$
- E. $C_{10}H_6O$



QUESTION NO: 9

What mass of Na_2CrO_4 is required to precipitate all of the silver ions from 75.0 mL of a 0.100 M solution of AgNO_3 ?

- A. 0.607 g
- B. 1.21 g
- C. 6.07 g
- D. 12.1 g
- E. 60.7 g

QUESTION NO: 10

A drug contains aspirin, $\text{C}_9\text{H}_7\text{O}_4$, which has one

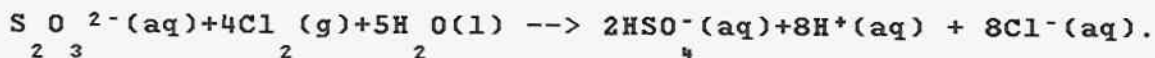
acidic hydrogen. A 0.500 g sample of the drug required 21.5 mL of a 0.100 M NaOH solution to neutralize it. Calculate the percentage by mass of aspirin in the drug.

- A. 77.5%
- B. 7.75%
- C. 38.7%
- D. 3.87%
- E. 50.0%



 QUESTION NO: 11

Identify the reducing agent in the following redox reaction:



- A. S O_{23}^{2-}
 B. Cl_2
 C. H_2O
 D. HSO_4^-
 E. H^+

 QUESTION NO: 12

Oxygen generated in the decomposition by heat of potassium chlorate by the following reaction:



is collected over water. At a total atmospheric pressure of 765 torr a volume of 128 mL of oxygen gas was collected by displacement of water at 24.0°C. Calculate the mass of KClO_3

in the sample that has decomposed. The pressure of water vapor at 24.0°C is 22.4 torr (1 atm = 760 torr).

- A. 0.419 g
 B. 0.127 g
 C. 0.170 g
 D. 0.164 g
 E. 0.629 g



QUESTION NO: 13

A gas consisting of only carbon and hydrogen has an empirical formula of CH_2 . The gas has a density of 1.65 g/L at 27.0°C

and 734 torr. What is its molar mass?

- A. 42.1 g/mol
- B. 112 g/mol
- C. 70.2 g/mol
- D. 224 g/mol
- E. 154 g/mol

QUESTION NO: 14

The rate of effusion of an unknown gas is 31.50 mL/min. Under identical conditions, the effusion rate of O_2 is 22.31 mL/min. The unknown gas is:

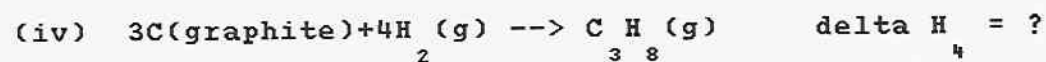
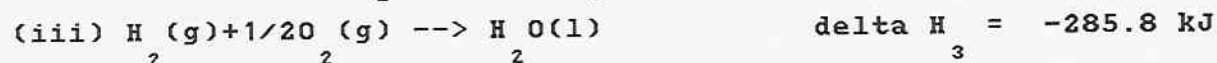
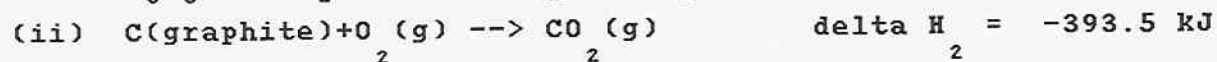
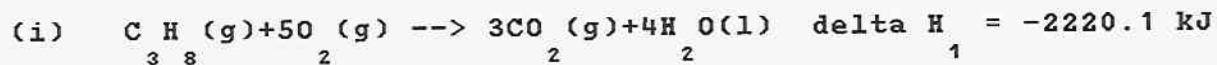
- A. CH_4
- B. CO
- C. NO
- D. CO_2
- E. NO_2



 QUESTION NO: 15

Using the following heats of combustion, determine
 ΔH for the overall reaction (iv) and round up to the

next whole number:



- A. -104 kJ
- B. +104 kJ
- C. -2258 kJ
- D. +2258 kJ
- E. -2154 kJ



 QUESTION NO: 16

The standard enthalpy of combustion of ethene gas, $C_2H_4(g)$, is $\Delta H_c^\circ[C_2H_4(g)] = -1411.1 \text{ kJ/mol}$ at 298 K. Given the enthalpies of formation, $\Delta H_f^\circ[CO_2(g)] = -393.5 \text{ kJ/mol}$ and $\Delta H_f^\circ[H_2O(l)] = -285.8 \text{ kJ/mol}$, calculate

$\Delta H_f^\circ[C_2H_4(g)]$ for ethene.

- A. +52.5 kJ/mol
- B. -52.5 kJ/mol
- C. -731.8 kJ/mol
- D. +731.8 kJ/mol
- E. -338.3 kJ/mol

 QUESTION NO: 17

Which of the following orbitals is occupied by the outer electrons in Sr^{2+} ?

- A. 4p
- B. 4s
- C. 5p
- D. 5s
- E. 3d



QUESTION NO: 18

What is the wavelength in nm ($1 \text{ nm} = 10^{-9} \text{ m}$) of the electromagnetic radiation needed to remove an electron from the $n = 3$ level of an excited hydrogen atom?

- A. 820.5 nm
- B. 547.0 nm
- C. 273.5 nm
- D. 136.7 nm
- E. 102.6 nm

QUESTION NO: 19

Which of the following has the highest first ionization energy?

- A. Cl
- B. P
- C. Se
- D. S
- E. As

QUESTION NO: 20

The electronic configuration of titanium (Ti) is:

- A. $1s^2 2s^2 2p^6 3s^2 3p^6 4s^2 3d^2$
- B. $[\text{Ar}] 3d^4$
- C. $[\text{Ar}] 4s^2 4p^2$
- D. $[\text{Kr}] 5s^2 4d^{10} 5p^2$
- E. $1s^2 2s^2 2p^6 3s^2 3p^6$



QUESTION NO: 21

Which one of the following molecules has a dipole moment?

- A. HCl
- B. SF₆
- C. CH₄
- D. CO₂
- E. N₂

QUESTION NO: 22

Calculate the lattice energy of CsCl (in kJ/mol) using the following data:

Standard enthalpy of formation of CsCl:	-443 kJ/mol
Enthalpy of sublimation of Cs:	79 kJ/mol
First ionization energy of Cs:	376 kJ/mol
Electron affinity of Cl:	-349 kJ/mol
Bond energy of Cl :	244 kJ/mol

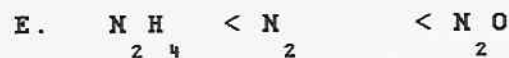
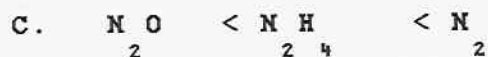
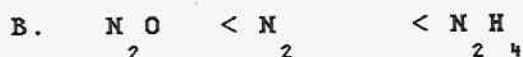
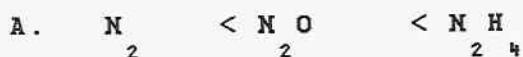
- A. -671 kJ/mol
- B. -523 kJ/mol
- C. -1235 kJ/mol
- D. -793 kJ/mol
- E. 754 kJ/mol



 QUESTION NO: 23





Arrange the following molecules in the order of increase in their nitrogen-nitrogen bond length

N_2O (skeleton structure NNO), N_2 , N_2H_4 (skeleton structure HNNH ; 2 N-H bonds to each N)



 QUESTION NO: 24

Arrange Cs^+ , K^+ , I^- , Xe in the order of decreasing size.





QUESTION NO: 25

Give the number of sigma and pi bonds in a carbon dioxide molecule.

- A. 2 sigma bonds and 2 pi bonds
- B. 1 sigma bonds and 2 pi bonds
- C. 2 sigma bonds and 1 pi bonds
- D. 3 sigma bonds and 1 pi bonds
- E. 3 sigma bonds and 2 pi bonds

QUESTION NO: 26

Given the following compounds with the hybridization on the central atom, X, identify the compound that is polar.

- A. XY_5 , d^2sp^3
- B. XY_2 , sp
- C. XY_3 , sp^2
- D. XY_5 , dsp^3
- E. XY_4 , d^2sp^3



QUESTION NO: 27

Which of the following has a linear molecular shape?

- A. 2 sigma bonds plus 3 lone pairs
- B. sp^2 hybridization and no lone pair
- C. 2 sigma bonds plus 2 lone pairs
- D. dsp^3 hybridization and no lone pair
- E. sp^3 hybridization and no lone pair

QUESTION NO: 28

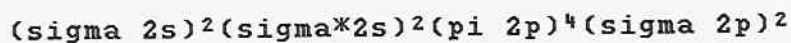
What is the bond order in O_2^+ ?

- A. 2.5
- B. 0.5
- C. 1.0
- D. 1.5
- E. 2.0



QUESTION NO: 29

The molecular orbital electron configuration



can describe which one of the following diatomic molecules?

- A. CN^-
- B. O_2
- C. F_2
- D. C_2
- E. BC

QUESTION NO: 30

There are 250 mL of water stored in a 500 mL sealed container.
As the temperature increases from 298 K to 308 K, the number
of water molecules

- A. in the liquid phase decreases.
- B. in the liquid phase increases.
- C. in the vapor phase increases indefinitely.
- D. in the vapor phase decreases.
- E. in the vapor phase remains constant.



QUESTION NO: 31

The vapor pressures of aluminum at 1760.°C and 1908°C are 10.00 torr and 40.00 torr, respectively. The enthalpy of vaporization of aluminum is:

- A. 345.4 kJ/mol
- B. 3.452 kJ/mol
- C. 5217 kJ/mol
- D. 3649 kJ/mol
- E. 4340 kJ/mol

QUESTION NO: 32

How much energy is required to convert 10.0 g of ice at -118°C to ice at -10.0°C at normal atmospheric pressure. The specific heat of ice is 2.09 J/(g K).

- A. 2.26 kJ
- B. 3.35 kJ
- C. 4.18 kJ
- D. 2.30 kJ
- E. 2.07 kJ



QUESTION NO: 33

A phase diagram is

- A. a graphical summary of the conditions under which different states of a substance are stable.
- B. a graphical summary of the energy needed to convert a solid at a given temperature to a gas at a given temperature.
- C. a graphical summary of crystal formation.
- D. a graphical summary of the energy changes that occur as a substance changes from solid to liquid to gas.
- E. a graphical representation of the logarithm of the vapor pressure as a function of the inverse of the temperature.

QUESTION NO: 34

The edge of a body-centered cubic unit cell of the rare earth metal europium (Eu) is 476 pm. What is the density of europium?

- A. 4.68 g/cm³
- B. 5.25 g/cm³
- C. 10.5 g/cm³
- D. 14.0 g/cm³
- E. 7.77 g/cm³



QUESTION NO: 35

The distance between two planes of a crystal is 0.348 nm.
At what angle will the first order reflections occur for
X-rays of 0.135 nm wavelength?

- A. 11.2°
- B. 40.3°
- C. 5.0°
- D. 2.0°
- E. 22.8°

QUESTION NO: 36

Which one of the following in their liquid states would be a
good solvent for iodine, I ?

- A. CS₂
- B. NH₃
- C. CH₃OH
- D. H₂O
- E. HCl



QUESTION NO: 37

What is the percentage by mass of CdSO_4 in a 1.00 molal aqueous CdSO_4 solution?

- A. 17.3%
- B. 24.4%
- C. 20.8%
- D. 0.100%
- E. 0.001%

QUESTION NO: 38

According to Raoult's law, which statement is FALSE?

- A. The vapor pressure of a solvent over a solution decreases as its mole fraction increases.
- B. The solubility of a gas increases as the temperature decreases.
- C. The vapor pressure of a solvent over a solution is less than that over pure solvent.
- D. The greater the pressure of a gas over a solution the greater is its solubility.
- E. Ionic solutes dissociate in solution causing an enhancement of all colligative properties.



 QUESTION NO: 39

A solution that contains 55.0 g of a nonelectrolyte solute in 250.0 g of water freezes at -2.32°C . What is the molecular formula of the solute (K_f of water is $1.86^{\circ}\text{C}/m$)?

f

- A. $\text{C}_6\text{H}_8\text{O}_6$
 B. $\text{C}_{10}\text{H}_{22}\text{O}_4$
 C. $\text{C}_3\text{H}_4\text{O}$
 D. $\text{C}_{12}\text{H}_{24}\text{O}$
 E. $\text{C}_8\text{H}_{10}\text{O}_6$

 QUESTION NO: 40

Arrange the following aqueous solutions in the order of their increasing boiling points:

$0.050\text{ m Mg}(\text{NO}_3)_2$; 0.100 m ethanol ; 0.090 m NaCl .

- A. ethanol < $\text{Mg}(\text{NO}_3)_2$ < NaCl
 B. $\text{Mg}(\text{NO}_3)_2$ < NaCl < ethanol
 C. ethanol < NaCl < $\text{Mg}(\text{NO}_3)_2$
 D. NaCl < ethanol < $\text{Mg}(\text{NO}_3)_2$
 E. $\text{Mg}(\text{NO}_3)_2$ < ethanol < NaCl