

King Fahd University of Petroleum and Minerals

Prep-Year Math Program

Math 002 Class Test 2B
Textbook Sections: 6.3 to 8.3
Term 153
Time Allowed: 70 Minutes

Student's Name:
ID #:..... Section: 13..... Serial Number:

Provide neat and complete solutions.
Show all necessary steps for full credit and write the answer in simplest form.

No Calculators, Cameras, or Mobiles are allowed during this exam.

Question	Points	Student's Score
1	5	
2	5	
3	5	
4	5	
5	5	
6	5	
7	5	
8	5	
9	6	
10	4	
Total	50	_____ 50
		_____ 100

Q1. (5 points) (7.1 Recitation Q#1): If $\sec \theta = \frac{x+4}{x}$, then find $\csc \theta = ?$

Solution:

Question 5

If $\sec \theta = \frac{x+4}{x}$, then $\csc \theta =$

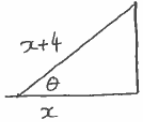
a) $\pm \frac{(x+4)\sqrt{2x+4}}{4(x+2)}$

b) $\pm \frac{(x+4)\sqrt{x+2}}{8(x+2)}$

c) $\pm \frac{\sqrt{2x+4}}{(x+4)}$

d) $\pm \frac{(x+4)\sqrt{x+2}}{2x+4}$

e) $\pm \frac{2\sqrt{x+2}}{x+4}$

$$\csc \theta = \pm \frac{(x+4)}{\sqrt{8x+16}} = \pm \frac{(x+4)}{\sqrt{8} \sqrt{x+2}} \cdot \left(\frac{\sqrt{8} \sqrt{x+2}}{\sqrt{8} \sqrt{x+2}} \right)$$


$$= \pm \frac{\sqrt{8} (x+4) \sqrt{x+2}}{8 (x+2)} = \pm \frac{2\sqrt{2} (x+4) \sqrt{x+2}}{8 (x+2)}$$

$$= \pm \frac{(x+4) \sqrt{2x+4}}{4 (x+2)}$$

Q2. (5 points) (7.2 Recitation Q#4): If $\sin^4 x - \cos^4 x = A \cos Bx$, then $A = ?$ and $B = ?$

Solution:

$$\sin^4 x - \cos^4 x = (\sin^2 x - \cos^2 x) (\sin^2 x + \cos^2 x)$$

$\underbrace{\hspace{10em}}_{=1}$

$$= \sin^2 x - \cos^2 x$$

$$= \sin^2 x - (1 - \sin^2 x)$$

$$= \sin^2 x - 1 + \sin^2 x$$

$$= 2 \sin^2 x - 1$$

$$= -(1 - 2 \sin^2 x)$$

$$= -\cos 2x$$

Then $A = -1$ and $B = 2$

Q3. (5 points) (7.5 Textbook Example 6): Evaluate $\tan\left(2 \arcsin \frac{2}{5}\right) = ?$

Solution:

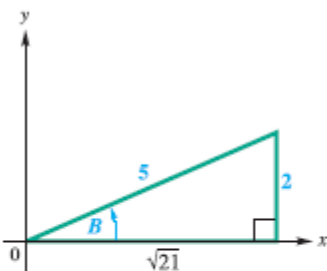


Figure 24

(b) Let $\arcsin \frac{2}{5} = B$. Then, from the double-angle tangent identity,

$$\tan\left(2 \arcsin \frac{2}{5}\right) = \tan 2B = \frac{2 \tan B}{1 - \tan^2 B} \quad (\text{Section 7.4})$$

Since $\arcsin \frac{2}{5} = B$, $\sin B = \frac{2}{5}$. Sketch a triangle in quadrant I, find the length of the third side, and then find $\tan B$. From the triangle in Figure 24, $\tan B = \frac{2}{\sqrt{21}}$, and

$$\tan\left(2 \arcsin \frac{2}{5}\right) = \frac{2\left(\frac{2}{\sqrt{21}}\right)}{1 - \left(\frac{2}{\sqrt{21}}\right)^2} = \frac{\frac{4}{\sqrt{21}}}{1 - \frac{4}{21}} = \frac{\frac{4}{\sqrt{21}}}{\frac{17}{21}} = \frac{4}{\sqrt{21}} \cdot \frac{\sqrt{21}}{\sqrt{21}} = \frac{4\sqrt{21}}{21} = \frac{4\sqrt{21}}{17}$$

Be careful simplifying the complex fraction.

Q4. (5 points)(7.6 Textbook Exercise 21): Solve the equation $-2\sin^2 x = 3\sin x + 1$ over the interval $[0, 2\pi)$

Solution:

$$\begin{aligned}
 21. \quad -2\sin^2 x &= 3\sin x + 1 \\
 -2\sin^2 x &= 3\sin x + 1 \\
 2\sin^2 x + 3\sin x + 1 &= 0 \\
 (2\sin x + 1)(\sin x + 1) &= 0 \\
 2\sin x + 1 = 0 &\Rightarrow \sin x = -\frac{1}{2} \text{ or} \\
 \sin x + 1 = 0 &\Rightarrow \sin x = -1
 \end{aligned}$$

Over the interval $[0, 2\pi)$, the equation

$\sin x = -\frac{1}{2}$ has two solutions. The angles in quadrants III and IV that have a reference angle of $\frac{\pi}{6}$ are $\frac{7\pi}{6}$ and $\frac{11\pi}{6}$.

In the same interval, $\sin x = -1$ when the angle is $\frac{3\pi}{2}$. Solution set: $\left\{\frac{7\pi}{6}, \frac{3\pi}{2}, \frac{11\pi}{6}\right\}$

Q5. (5 points): Find the exact value of $\frac{\tan 69^\circ + \cot 24^\circ}{1 - \tan 69^\circ \tan 66^\circ} = ?$

Solution:

$$\begin{aligned}
 \frac{\tan 69^\circ + \cot 24^\circ}{1 - \tan 69^\circ \tan 66^\circ} &= \frac{\tan 69^\circ + \tan(90^\circ - 24^\circ)}{1 - \tan 69^\circ \tan 66^\circ} \\
 &= \frac{\tan 69^\circ + \tan 66^\circ}{1 - \tan 69^\circ \tan 66^\circ} \\
 &= \tan(69^\circ + 66^\circ) \\
 &= \tan 135^\circ \\
 &= -\tan 45^\circ \\
 &= -1
 \end{aligned}$$

Q6. (5 points): Solve the equation $\cos^{-1} \frac{x}{2} + \sin^{-1} \left(\frac{-3}{5}\right) - \frac{\pi}{3} = 0$

Solution: $\cos^{-1} \frac{x}{2} = \frac{\pi}{3} - \sin^{-1} \left(\frac{-3}{5}\right) \Rightarrow \cos\left(\cos^{-1} \frac{x}{2}\right) = \cos\left(\frac{\pi}{3} - \sin^{-1} \left(\frac{-3}{5}\right)\right) \Rightarrow$

$$\frac{x}{2} = \cos\left(\frac{\pi}{3} - \sin^{-1} \left(\frac{-3}{5}\right)\right)$$

Let $\theta = \sin^{-1} \left(\frac{-3}{5}\right)$ where $-\frac{\pi}{2} \leq \theta \leq \frac{\pi}{2}$. $\Rightarrow \sin \theta = \frac{-3}{5}$, $-\frac{\pi}{2} \leq \theta \leq \frac{\pi}{2} \Rightarrow$

θ is in Quadrant IV $y = -3$, $r = 5$, $x = +\sqrt{r^2 - y^2} = \sqrt{25 - 9} = \sqrt{16} = 4$

$$\frac{x}{2} = \cos\left(\frac{\pi}{3} - \theta\right) = \cos \frac{\pi}{3} \cos \theta + \sin \frac{\pi}{3} \sin \theta = \frac{1}{2} \left(\frac{4}{5}\right) + \frac{\sqrt{3}}{2} \left(\frac{-3}{5}\right)$$

$$x = \frac{4 - 3\sqrt{3}}{5} \Rightarrow SS = \left\{\frac{4 - 3\sqrt{3}}{5}\right\}$$

Q7. (5 points): Given the vectors $u = \langle -2, 2\sqrt{3} \rangle$ and $v = -2\sqrt{3}i + 2j$. Find the following

- (a) $\|u\|$
- (b) The unit vector e in the opposite direction of u .
- (c) The direction angle of $v = -2\sqrt{3}i + 2j$.
- (d) The vector $2u - \sqrt{3}v$.
- (e) The smallest nonnegative angle between u and v .

Solution:

(a): $\|u\| = \sqrt{(-2)^2 + (2\sqrt{3})^2} = \sqrt{4+12} = 4$

(b): $e = -\frac{\vec{u}}{\|\vec{u}\|} = -\frac{\langle -2, 2\sqrt{3} \rangle}{4} = \langle \frac{1}{2}, -\frac{\sqrt{3}}{2} \rangle$

(c): Let θ be the direction angle of $v = -2\sqrt{3}i + 2j$. Then

$\tan \theta = \frac{2}{-2\sqrt{3}} = -\frac{1}{\sqrt{3}}$, $\theta \in QII \Rightarrow \theta = 180^\circ - 30^\circ = 150^\circ = \frac{5\pi}{6}$

(d): $2u - \sqrt{3}v = 2\langle -2, 2\sqrt{3} \rangle - \sqrt{3}\langle -2\sqrt{3}, 2 \rangle = \langle -4, 4\sqrt{3} \rangle + \langle 6, -2\sqrt{3} \rangle = \langle 2, 2\sqrt{3} \rangle$

(e): Let α be the smallest nonnegative angle between u and v . Then

$\cos \alpha = \frac{u \cdot v}{\|u\| \|v\|} = \frac{\langle -2, 2\sqrt{3} \rangle \cdot \langle -2\sqrt{3}, 2 \rangle}{(4)(4)} = \frac{4\sqrt{3} + 4\sqrt{3}}{16} = \frac{\sqrt{3}}{2} \Rightarrow \alpha = 30^\circ = \frac{\pi}{6}$

Q8. (5 points): Find the **amplitude, range, period, phase shift**, and sketch the graph the

function $f(x) = \cos \frac{x}{2} - \sqrt{3} \sin \frac{x}{2}$.

Solution: $a = -\sqrt{3}$, $b = 1 \Rightarrow \alpha$ is in Quadrant II. $k = \sqrt{a^2 + b^2} = \sqrt{(-\sqrt{3})^2 + (1)^2} = \sqrt{4} = 2$

amplitude = 2, period = 4π

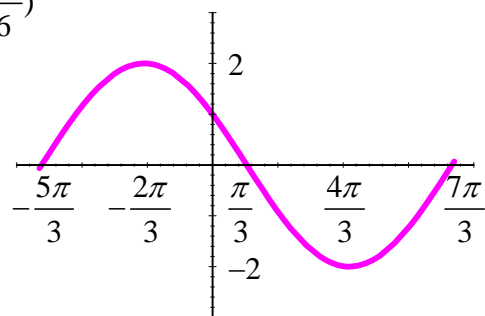
$$\left. \begin{aligned} \sin \alpha' = |\sin \alpha| &= \left| \frac{b}{k} \right| = \left| \frac{1}{2} \right| = \frac{1}{2} \\ \cos \alpha' = |\cos \alpha| &= \left| \frac{a}{k} \right| = \left| \frac{-\sqrt{3}}{2} \right| = \frac{\sqrt{3}}{2} \end{aligned} \right\} \Rightarrow \alpha' = \frac{\pi}{6} \Rightarrow \alpha = \pi - \frac{\pi}{6} = \frac{5\pi}{6}$$

$f(x) = -\sqrt{3} \sin \frac{x}{2} + \cos \frac{x}{2} = k \sin(\frac{x}{2} + \alpha) = 2 \sin(\frac{x}{2} + \frac{5\pi}{6})$

$f(x) = 2 \sin(\frac{x}{2} + \frac{5\pi}{6})$

phase shift = $-\frac{5\pi}{3}$

The period is $P = \frac{2\pi}{\frac{1}{2}} = 4\pi$



Q9. (6 points): Given $y = 3\sin\left(2x - \frac{\pi}{4}\right) + 4$, $x \in \left[\frac{3\pi}{8}, \frac{11\pi}{8}\right]$.

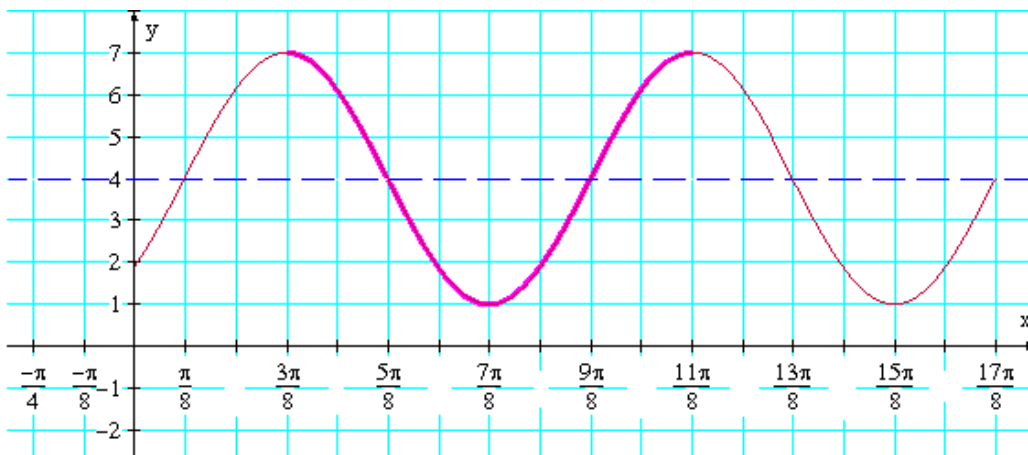
- (a): Determine the interval where the function is increasing.
- (b): Determine the interval where the function is decreasing.
- (c): Determine the **coordinates of the lowest point** of the graph.

Solution: $P = \frac{2\pi}{b} = \frac{2\pi}{2} = \pi$

Phase Shift = $x_0 = -\frac{c}{b} = -\frac{-\pi/4}{2} = \frac{\pi}{8}$ units to the right

$\frac{1}{4}P = \frac{\pi}{4} = \frac{2\pi}{8} \Rightarrow x_0 + \frac{1}{4}P = \frac{\pi}{8} + \frac{\pi}{4} = \frac{3\pi}{8}$

The Key Points are: $\frac{\pi}{8}$ $\frac{3\pi}{8}$ $\frac{5\pi}{8}$ $\frac{7\pi}{8}$ $\frac{9\pi}{8}$ $\frac{11\pi}{8}$



(a): Given $x \in \left[\frac{3\pi}{8}, \frac{11\pi}{8}\right]$ then the function is **increasing on** $\left[\frac{7\pi}{8}, \frac{11\pi}{8}\right]$

(b): Given $x \in \left[\frac{3\pi}{8}, \frac{11\pi}{8}\right]$ then the function is **decreasing on** $\left[\frac{3\pi}{8}, \frac{7\pi}{8}\right]$

(c): Given $x \in \left[\frac{3\pi}{8}, \frac{11\pi}{8}\right]$ then the coordinates of the lowest point is $\left(\frac{7\pi}{8}, 1\right)$

Q10. (4 points) (6.6 Textbook Exercise 32): Graph $y = 3\tan\left(\frac{3}{4}x - \pi\right)$ over a two period.

Solution: $-\frac{\pi}{2} < \frac{3}{4}x - \pi < \frac{\pi}{2} \Rightarrow -2\pi < 3x - 4\pi < 2\pi \Rightarrow 2\pi < 3x < 6\pi$

$\Rightarrow \frac{2\pi}{3} < x < 2\pi$

Graph of $y = 3\tan\left(\frac{3}{4}x - \pi\right)$:

