

King Fahd University of Petroleum and Minerals

Prep-Year Math Program

Math 002 Class Test II
Textbook Sections: 6.2 to 8.3
Term 151
Time Allowed: 90 Minutes
Time: 6:00 pm – 7:30 pm

Student's Name:

ID #:.....

Section:

Serial Number:

Provide neat and complete solutions.

Show all necessary steps for full credit and write the answer in simplest form.

No Calculators, Cameras, or Mobiles are allowed during this exam.

Question	Points	Student's Score
1	5	
2	6	
3	6	
4	3	
5	4	
6	4	
7	4	
8	4	
9	4	
10	4	
11	6	
Total	50	<u> </u> 50
		<u> </u> 100

Q1. (5 points) (6.2 Textbook Exercises 7-11): Find the exact value of the following:

(a): $\sin \frac{7\pi}{6}$

(b): $\cos \frac{5\pi}{3}$

(c): $\tan \frac{3\pi}{4}$

(d): $\sec \frac{2\pi}{3}$

(e): $\csc \frac{11\pi}{6}$

Solution:

$$\sin \frac{7\pi}{6} = \sin 210^\circ = -\sin 30^\circ = -\frac{1}{2}.$$

$$\cos \frac{5\pi}{3} = \cos 300^\circ = \cos 60^\circ = \frac{1}{2}.$$

$$\tan \frac{3\pi}{4} = \tan 135^\circ = -\tan 45^\circ = -1.$$

$$\sec \frac{2\pi}{3} = \sec 120^\circ = -\sec 60^\circ = -2.$$

$$\csc \frac{11\pi}{6} = \csc 330^\circ = -\csc 30^\circ = -2.$$

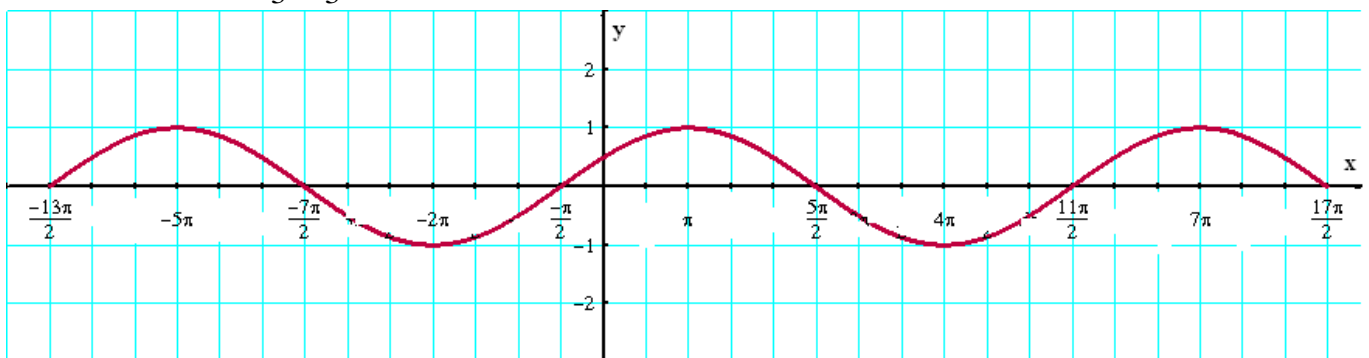
Q2. (6 points) (6.4 Additional Exercises 15): Given $y = \cos\left(\frac{x}{3} - \frac{\pi}{3}\right)$, $-\frac{13\pi}{2} \leq x \leq \frac{17\pi}{2}$.

(a): Sketch the graph of function over the interval $\left[-\frac{13\pi}{2}, \frac{17\pi}{2}\right]$.

(b): Find the intervals where the function is below the x -axis.

(c): Find the intervals where the function is decreasing over the given interval.

Solution (a): $0 \leq \frac{x}{3} - \frac{\pi}{3} \leq 2\pi \Rightarrow 0 \leq x - \pi \leq 6\pi \Rightarrow \pi \leq x \leq 7\pi$



(b): The graph is below the x -axis on $\left(-\frac{7\pi}{2}, -\frac{\pi}{2}\right)$ and on $\left(\frac{5\pi}{2}, \frac{11\pi}{2}\right)$

(c) The graph is decreasing on $(-5\pi, -2\pi)$, $(\pi, 4\pi)$ and $\left(7\pi, \frac{17\pi}{2}\right)$

Q3. (6 points): (Recitation 6.5):

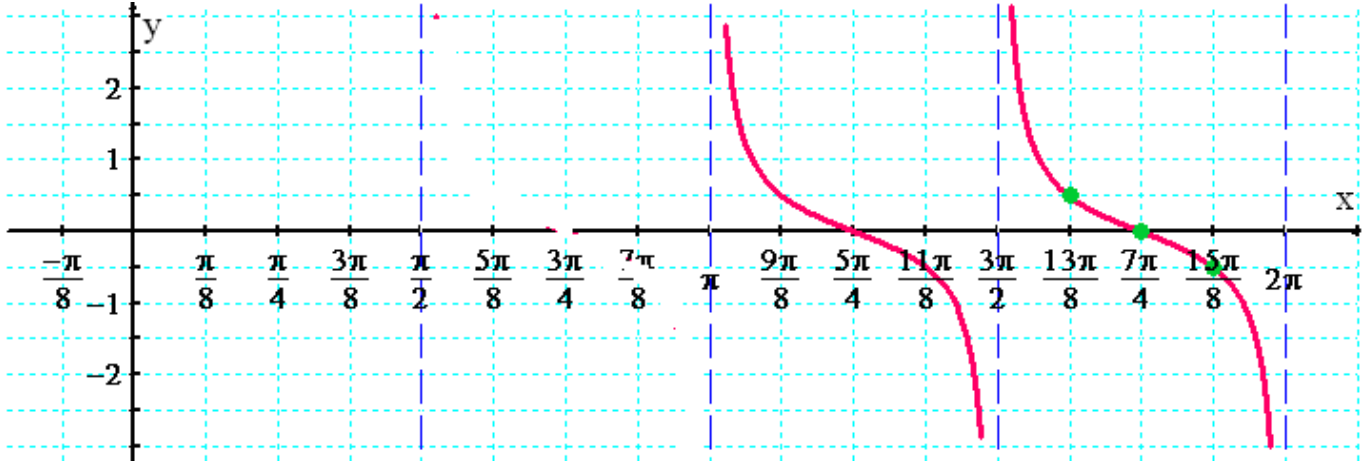
(a): Graph the function $y = \frac{1}{2} \cot(2x - 3\pi)$ in the Interval $[\pi, 2\pi]$.

(b): Determine the intervals where the graph of the function is below the x -axis.

(c): Determine the equations of vertical asymptotes over the interval $[\pi, 2\pi]$.

Solution (a): $0 < 2x - 3\pi < \pi \Rightarrow 3\pi < 2x < 4\pi \Rightarrow \frac{3\pi}{2} < x < 2\pi$.

$y = \frac{1}{2} \cot(2x - 3\pi)$:



(b): The graph is below the x -axis on $\left(\frac{5\pi}{4}, \frac{3\pi}{2}\right)$ and $\left(\frac{7\pi}{4}, 2\pi\right)$.

(c): The vertical asymptotes are: $x = \pi$, $x = \frac{3\pi}{2}$ and $x = 2\pi$

Q4. (3 points) (6.6 Additional Exercise 9): The adjacent graph represents part of the graph of

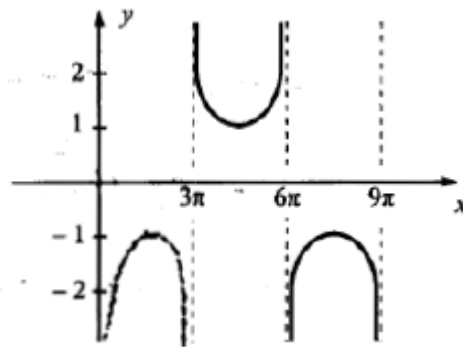
A) $y = \sec 9x$

B) $y = -\sec \frac{x}{3}$

C) $y = -\csc \frac{x}{3}$

D) $y = -\csc \frac{x}{9}$

E) $y = 2 \csc \frac{x}{3}$



Solution: Clearly, it is the graph of $y = a \csc bx$ where $a = -1$.

Period = 6π

$\frac{2\pi}{b} = 6\pi \Rightarrow b = \frac{1}{3}$

$y = a \csc bx = (-1) \csc \left(\frac{1}{3}x\right) = -\csc \frac{x}{3}$

Answer: C) $y = -\csc \frac{x}{3}$

Q5. (4 points) (7.1 Recitation Q#1): If the terminal side of an angle θ intersects the unit circle at the point $\left(-\frac{4}{5}, -\frac{3}{5}\right)$, then find the exact value of $\sec(-\theta) + \tan(-\theta)$.

Solution: $(x, y) = \left(-\frac{4}{5}, -\frac{3}{5}\right)$ and the radius $r = 1$

$$\cos \theta = \frac{x}{r} = -\frac{4}{5} \quad \text{and} \quad \sin \theta = \frac{y}{r} = -\frac{3}{5}$$

$$\sec(-\theta) = \sec \theta = -\frac{5}{4}$$

$$\tan(-\theta) = -\tan \theta = -\frac{-\frac{3}{5}}{-\frac{4}{5}} = -\frac{3}{4}$$

$$\sec(-\theta) + \tan(-\theta) = -\frac{5}{4} - \frac{3}{4} = -\frac{8}{4} = -2 \quad \text{Answer: } -2$$

Q6. (4 points) (7.3 Textbook Exercises 89): Suppose $\cos s = -\frac{1}{5}$, $\sin t = \frac{3}{5}$ where s and t are in quadrant II. Find $\cos(s - t) = ?$ and $\sec(s - t) = ?$.

Solution:

$$\cos s = -\frac{1}{5}, \quad \sin t = \frac{3}{5}, \quad s \text{ and } t \text{ are in quadrant II.}$$

$$\cos s = \frac{x}{r} \Rightarrow \cos s = -\frac{1}{5} = \frac{-1}{5} \Rightarrow x = -1, r = 5.$$

Substituting into the Pythagorean theorem, we have $(-1)^2 + y^2 = 5^2 \Rightarrow y^2 = 24 \Rightarrow y = \sqrt{24}$,

$$\text{since } \sin x > 0. \text{ Thus, } \sin s = \frac{y}{r} = \frac{\sqrt{24}}{5}.$$

$$\begin{aligned} \cos t &= -\sqrt{1 - \sin^2 t} = -\sqrt{1 - \left(\frac{3}{5}\right)^2} \\ &= -\sqrt{1 - \frac{9}{25}} = -\sqrt{\frac{16}{25}} = -\frac{4}{5} \end{aligned}$$

$$\cos(s - t) = \cos s \cos t + \sin s \sin t$$

$$\begin{aligned} &= \left(-\frac{1}{5}\right)\left(-\frac{4}{5}\right) + \left(\frac{\sqrt{24}}{5}\right)\left(\frac{3}{5}\right) \\ &= \frac{4}{25} + \frac{3\sqrt{24}}{25} = \frac{4}{25} + \frac{6\sqrt{6}}{25} = \frac{4 + 6\sqrt{6}}{25} \end{aligned}$$

$$\sec(s - t) = \frac{1}{\cos(s - t)} = \frac{25}{4 + 6\sqrt{6}} = \frac{25}{2(2 + 3\sqrt{6})} = \frac{25(2 - 3\sqrt{6})}{2(4 - 54)} = \frac{25(2 - 3\sqrt{6})}{2(-50)} = -\frac{2 - 3\sqrt{6}}{4} = \frac{3\sqrt{6} - 2}{4}$$

Q7. (4 points) (7.4 Textbook Exercise 100): Verify $\cos x = \frac{1 - \tan^2 \frac{x}{2}}{1 + \tan^2 \frac{x}{2}}$ is an identity.

Solution: $\tan \frac{x}{2} = \pm \sqrt{\frac{1 - \cos x}{1 + \cos x}} \Rightarrow \tan^2 \frac{x}{2} = \frac{1 - \cos x}{1 + \cos x}$

100. Verify $\cos x = \frac{1 - \tan^2 \frac{x}{2}}{1 + \tan^2 \frac{x}{2}}$ is an identity.

Working with the right side, we have

$$\frac{1 - \tan^2 \frac{x}{2}}{1 + \tan^2 \frac{x}{2}} = \frac{1 - \frac{1 - \cos x}{1 + \cos x}}{1 + \frac{1 - \cos x}{1 + \cos x}} = \frac{1 - \frac{1 - \cos x}{1 + \cos x}}{1 + \frac{1 - \cos x}{1 + \cos x}} \cdot \frac{1 + \cos x}{1 + \cos x} = \frac{(1 + \cos x) - (1 - \cos x)}{(1 + \cos x) + (1 - \cos x)} = \frac{2 \cos x}{2} = \cos x$$

Q8. (4 points) (Ch7 Textbook Review Exercise 98): $\sec\left(2 \sin^{-1}\left(-\frac{1}{3}\right)\right) = ?$

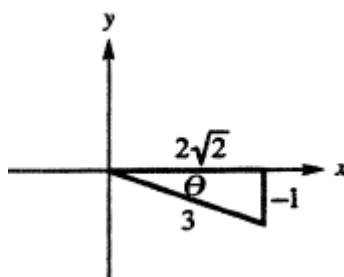
Solution:

98. $\sec\left(2 \sin^{-1}\left(-\frac{1}{3}\right)\right)$

Let $\theta = \sin^{-1}\left(-\frac{1}{3}\right)$, so $\sin \theta = -\frac{1}{3}$. Since arcsine is defined only in quadrants I and IV, and $-\frac{1}{3}$ is negative, θ is in quadrant IV.

Sketch θ and label a triangle with the side adjacent to θ equal to

$$\theta = \sqrt{3^2 - (-1)^2} = \sqrt{9 - 1} = \sqrt{8} = 2\sqrt{2}.$$



Thus, $\cos \theta = \frac{2\sqrt{2}}{3}$ and

$$\sec\left(2 \sin^{-1}\left(-\frac{1}{3}\right)\right) = \sec 2\theta.$$

$$\begin{aligned} \sec 2\theta &= \frac{1}{\cos 2\theta} = \frac{1}{2 \cos^2 \theta - 1} = \frac{1}{2 \left(\frac{2\sqrt{2}}{3}\right)^2 - 1} \\ &= \frac{1}{2 \left(\frac{8}{9}\right) - 1} = \frac{1}{\frac{16}{9} - 1} = \frac{9}{16 - 9} = \frac{9}{7} \end{aligned}$$

Q9. (4 points) (Quiz Textbook Review Exercise 109): Solve $\cos \theta + 1 = 2 \sin^2 \theta$ over $[0^\circ, 360^\circ)$.

Solution:

6. $\begin{aligned} \cos \theta + 1 &= 2 \sin^2 \theta \\ \cos \theta + 1 &= 2(1 - \cos^2 \theta) \end{aligned}$

$$\begin{aligned} 2 \cos^2 \theta + \cos \theta - 1 &= 0 \\ (2 \cos \theta - 1)(\cos \theta + 1) &= 0 \Rightarrow \end{aligned}$$

$$\cos \theta = \frac{1}{2} \text{ or } \cos \theta = -1$$

Over the interval $[0^\circ, 360^\circ)$, the equation

$\cos \theta = \frac{1}{2}$ has two solutions, the angles in

quadrants I and IV that have a reference angle of 60° . These are 60° and 300° . Over the interval $[0^\circ, 360^\circ)$, the equation $\cos \theta = -1$ has one solution, 180° .

Solution set: $\{60^\circ, 180^\circ, 300^\circ\}$

Q10. (4 points) (7.7 Textbook Exercise 38): Find the solution set of $\arccos x + 2 \arcsin \frac{\sqrt{3}}{2} = \frac{\pi}{3}$.

Solution:

$$38. \arccos x + 2 \arcsin \frac{\sqrt{3}}{2} = \frac{\pi}{3}$$

$$\arccos x + 2 \arcsin \frac{\sqrt{3}}{2} = \frac{\pi}{3} \Rightarrow$$

$$\arccos x + 2 \left(\frac{\pi}{3} \right) = \frac{\pi}{3} \Rightarrow \arccos x = -\frac{\pi}{3}$$

$-\frac{\pi}{3}$ is not in the range of $\arccos x$. Therefore,

the equation has no solution. Solution set: \emptyset

Q11. (6 points) Given the vectors $\mathbf{u} = 6\mathbf{i} + 3\sqrt{3}\mathbf{j}$ and $\mathbf{v} = 12\mathbf{i} + 8\sqrt{3}\mathbf{j}$, then

(a): Find the magnitude of $\mathbf{w} = \frac{1}{3}\mathbf{u} - \frac{1}{4}\mathbf{v}$

(b): Find a unit vector in the direction of $\mathbf{w} = \frac{1}{3}\mathbf{u} - \frac{1}{4}\mathbf{v}$.

(c): Find a vector of magnitude 8 in the opposite direction of $\mathbf{w} = \frac{1}{3}\mathbf{u} - \frac{1}{4}\mathbf{v}$.

Solution:

(a):

$$\begin{aligned} \mathbf{w} &= \frac{1}{3}\mathbf{u} - \frac{1}{4}\mathbf{v} \\ &= \frac{1}{3}\langle 6, 3\sqrt{3} \rangle - \frac{1}{4}\langle 12, 8\sqrt{3} \rangle \\ &= \langle 2, \sqrt{3} \rangle - \langle 3, 2\sqrt{3} \rangle \\ &= \langle -1, -\sqrt{3} \rangle \end{aligned}$$

$$\|\mathbf{w}\| = \left\| \frac{1}{3}\mathbf{u} - \frac{1}{4}\mathbf{v} \right\| = \left\| \langle -1, -\sqrt{3} \rangle \right\| = \sqrt{(-1)^2 + (\sqrt{3})^2} = \sqrt{4} = 2$$

$$\tan \theta = \frac{-\sqrt{3}}{-1} = \sqrt{3} \quad \theta = \frac{4\pi}{3} = 240^\circ$$

$$\mathbf{(b):} \quad \frac{1}{\|\mathbf{w}\|}\mathbf{w} = \frac{1}{2}\langle -1, -\sqrt{3} \rangle = \left\langle -\frac{1}{2}, -\frac{\sqrt{3}}{2} \right\rangle$$

$$\mathbf{(c):} \quad (-8) \frac{1}{\|\mathbf{w}\|}\mathbf{w} = (-8) \frac{1}{2}\langle -1, -\sqrt{3} \rangle = (-4)\langle -1, -\sqrt{3} \rangle = \langle 4, 4\sqrt{3} \rangle$$