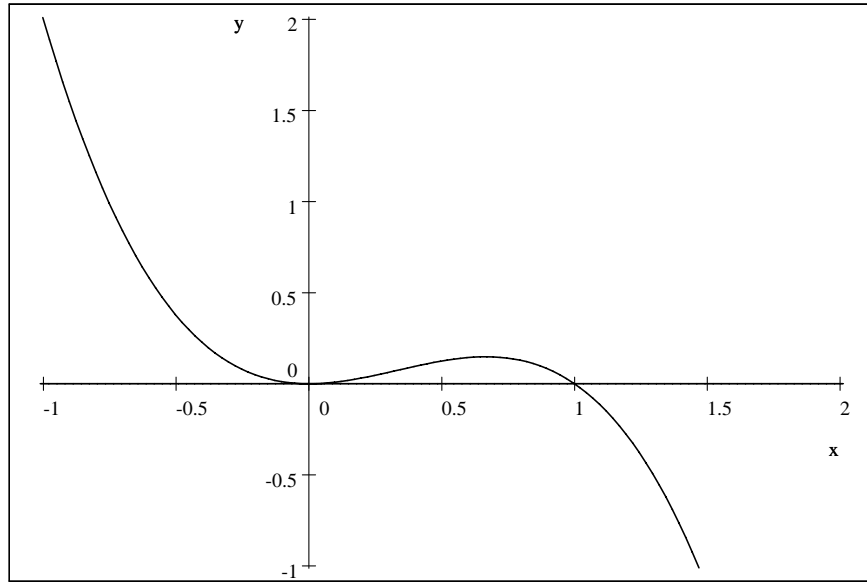


Q.1. (7 points). Find the volume of the solid obtained by rotating the region bounded by $y = x^2 - x^3$ and $y = 0$ about the y -axis.

SOLUTION. *. Intersection with X -axis and Y -axis.

$$y = x^2 - x^3$$



$$y(0) = 0$$

$$y(x) = x^2 - x^3 = 0$$

$$\implies x^2(1 - x) = 0$$

$$\implies x = 0 \text{ or } x = 1 \dots (2 \text{ points})$$

**. Rotate the region R about Y -axis,

the volume of the solid obtained is given by:

$$V = 2\pi \int_0^1 x(x^2 - x^3) dx \dots (3 \text{ points})$$

$$= 2\pi \int_0^1 (x^3 - x^4) dx$$

$$= 2\pi \left[\frac{x^4}{4} - \frac{x^5}{5} \right]_0^1 \dots (1 \text{ point})$$

$$= 2\pi \left[x^4 \left(\frac{1}{4} - \frac{x}{5} \right) \right]_0^1$$

$$= 2\pi \left[(1)^4 \left(\frac{1}{4} - \frac{1}{5} \right) \right]$$

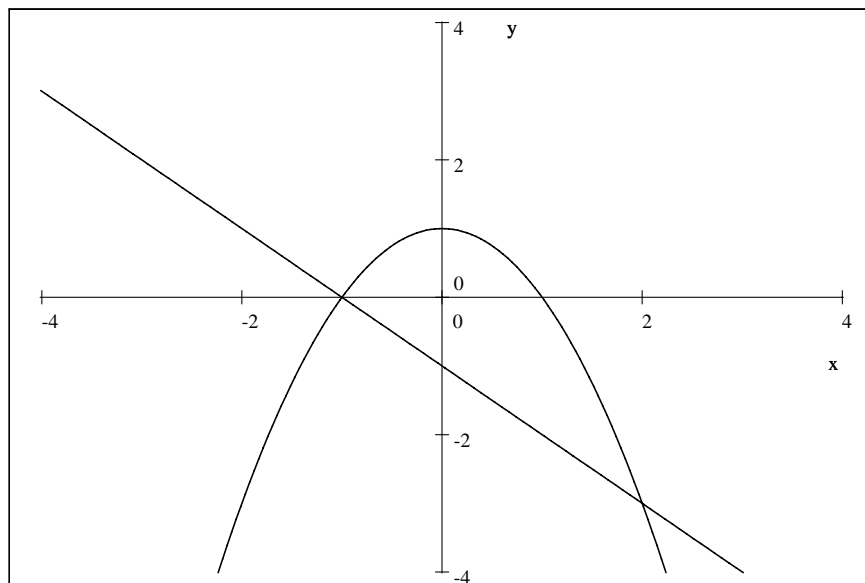
$$= 2\pi \left[1 \left(\frac{1}{20} \right) \right] = \frac{\pi}{10} \dots (1 \text{ point})$$

Q.2. (9 points). Find the volume of the solid obtained by rotating the region bounded by the graphs of

$$y = 1 - x^2 \text{ and } y = -(1 + x)$$

about the line $x = 3$.

Solution. $y = 1 - x^2$



I. Points of intersection

$$1 - x^2 = -(1 + x)$$

$$\implies x^2 - x - 2 = 0$$

$$\implies (x + 1)(x - 2) = 0$$

$$\implies x = -1, x = 2 \dots \dots \dots (2 \text{ points})$$

II. *Vol me of Shell* = $2\pi (3 - x_i) [(1 - x_i^2) + (1 + x_i)] \Delta x$.

III. Volume of Solid = $2\pi \int_{-1}^2 (3 - x) [(1 - x^2) + (1 + x)] dx \dots \dots (4 \text{ points})$

IV. $F(x) = (3 - x)(2 + x - x^2) = 6 + x - 4x^2 + x^3$

V. Evaluate Integral.

$$\begin{aligned} \int_{-1}^2 F(x) dx &= \left[6x + \frac{x^2}{2} - \frac{4x^3}{3} + \frac{x^4}{4} \right]_{-1}^2 \\ &= \left(12 + 2 - \frac{32}{3} + 4 \right) - \left(-6 + \frac{1}{2} + \frac{4}{3} + \frac{1}{4} \right) \\ &= 24 - \frac{32}{3} - \frac{4}{3} - \frac{3}{4} \\ &= 24 - 12 - \frac{4}{4} = \frac{45}{4}. \end{aligned}$$

VI. Volume of Solid = $2\pi \left(\frac{45}{4} \right) = \frac{45\pi}{2} \dots \dots (3 \text{ points})$

Q.3. (4 points). Find the average value of the function $f(t) = t \sin(t^2)$ on the interval $[0, \sqrt{\pi}]$.

SOLUTION. $f_{aver} = \frac{1}{\sqrt{\pi} - 0} \int_0^{\sqrt{\pi}} t \sin(t^2) dt \dots (2 \text{ points})$

$$= \frac{1}{\sqrt{\pi}} \int_0^{\pi} \frac{1}{2} \sin u du$$

$$\left[\begin{array}{l} u = t^2, \\ du = 2t dt, \\ \frac{1}{2} du = t dt \end{array} \right]$$

$$\left[\begin{array}{l} t = 0, u = 0; \\ t = \sqrt{\pi}, u = \pi \end{array} \right]$$

$$f_{aver} = \left[\frac{-1}{\sqrt{\pi}} \cdot \frac{1}{2} (\cos u) \right]_0^{\pi} \dots \dots \dots (1 \text{ point})$$

$$= \frac{1}{2\sqrt{\pi}} (-\cos \pi + \cos 0)$$

$$= \frac{1}{2\sqrt{\pi}} (1 + 1)$$

$$= \frac{2}{2\sqrt{\pi}}$$

$$= \frac{1}{\sqrt{\pi}} \dots \dots \dots (1 \text{ point})$$

Q.4. Evaluate the integral or show that it is divergent.

(a) (5 points). $\int_0^1 \ln x \, dx$

Solution. $\int_0^1 \ln x \, dx$

Using integration by Parts:

$$\int \ln x \, dx$$

$$= \int (\ln x \cdot 1) \, dx$$

$$= \ln x \int 1 \, dx - \int \left[\frac{d}{dx} (\ln x) \cdot \int 1 \, dx \right] dx$$

$$= (\ln x) x - \int \left(\frac{1}{x} \right) \cdot x \, dx$$

$$= x \ln x - \int dx$$

$$= x \ln x - x + C \dots \dots (2 \text{ points})$$

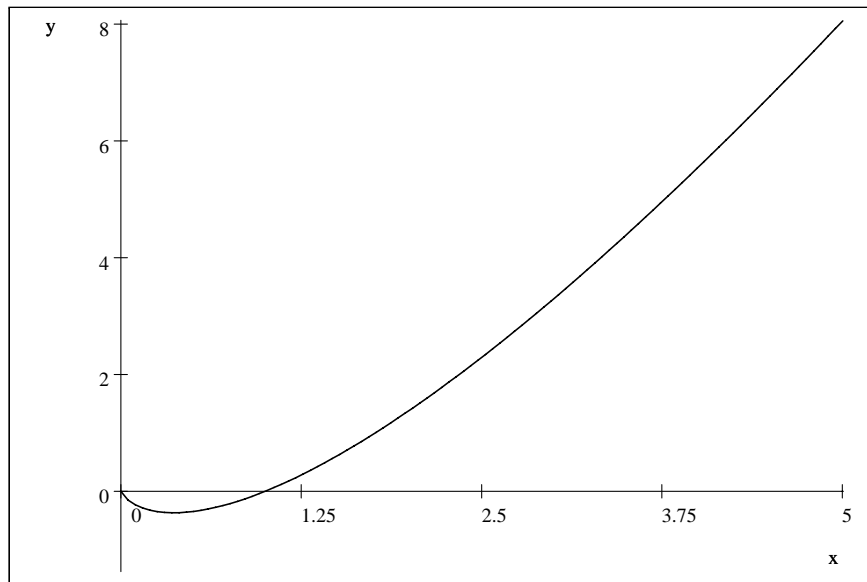
Now $\int_0^1 \ln x \, dx$

$$= [x \ln x - x]_{x=1} - \lim_{x \rightarrow 0^+} [x \ln x - x]$$

$$= 1 \cdot \ln(1) - 1 - 0 = -1 \dots \dots (1 \text{ point})$$

$$\lim_{x \rightarrow 0^+} x \ln x = 0. (\text{L'Hopital Rule}) \dots \dots (2 \text{ points})$$

$y = x \ln x$. Note: Graph is not required.



Q.4. (b). (4 points). $\int_2^{+\infty} \frac{1}{x \ln x} dx$

Consider $I = \int \frac{1}{x \ln x} dx$

Let $u = \ln x$. Then $du = \frac{1}{x} dx$

Thus $I = \int \frac{1}{u} du$

$= \ln |u| + C$

$= \ln |\ln x| + C \dots \dots (2 \text{ points})$

Thus $\int_2^{+\infty} \frac{1}{x \ln x} dx$

$= \lim_{x \rightarrow +\infty} [\ln |\ln x|] - [\ln |\ln x|]_{x=2} \dots \dots (1 \text{ point})$

$= + \infty - \ln |\ln 2| \dots \dots (1 \text{ point})$

$= + \infty.$

The integral is Divergent.

Q.5. Evaluate the following integrals:

(a) (5 points) . $\int x \tan^{-1} x \, dx$

Solution.

Let $u = \tan^{-1} x$,

then $du = \frac{dx}{1+x^2}$

$dv = x \, dx$, $v = \frac{x^2}{2}$

.....(2 points)

Hence $\int x \tan^{-1} x \, dx$

$= \int u \, dv = uv - \int v \, du$

$= \frac{x^2}{2} \tan^{-1} x - \int \frac{x^2}{2} \cdot \frac{1}{1+x^2} dx \dots (1 \text{ point})$

$= \frac{1}{2} x^2 \tan^{-1} x - \frac{1}{2} \int \frac{x^2}{1+x^2} dx$

$= \frac{1}{2} x^2 \tan^{-1} x - \frac{1}{2} \left[\int \left(1 - \frac{1}{1+x^2} \right) dx \right]$

$= \frac{1}{2} x^2 \tan^{-1} x - \frac{1}{2} x + \frac{1}{2} \tan^{-1} x + C \dots (2 \text{ points})$

Q.5.(b) (5 points) . $\int \tan^2 x \sec^4 x dx$.

SOLUTION.

Let $I = \int \tan^2 x \sec^4 x dx$.

Then $I = \int \tan^2 x \sec^2 x \sec^2 x dx \dots (1 \text{ point})$

$= \int \tan^2 x (1 + \tan^2 x) \sec^2 x dx \dots (1 \text{ point})$

Let $u = \tan x$. Then $du = \sec^2 x dx \dots (1 \text{ point})$

$\implies I = \int u^2 (1 + u^2) du$

$= \int (u^2 + u^4) du$

$= \frac{1}{3}u^3 + \frac{1}{5}u^5 + C \dots (1 \text{ point})$

Thus $I = \frac{1}{3} \tan^3 x + \frac{1}{5} \tan^5 x + C \dots (1 \text{ point})$

Q.5.(c). (8 points). $\int \frac{(x-3) dx}{\sqrt{8x-x^2}}$.

SOLUTION. *. *Complete square:*

$$8x - x^2 = -(x^2 - 8x)$$

$$= -(x^2 - 8x + 16) + 16$$

$$= 16 - (x - 4)^2 \dots (1 \text{ point})$$

$$**. I = \int \frac{(x-3) dx}{\sqrt{8x-x^2}}$$

$$= \int \frac{(x-3) dx}{\sqrt{16 - (x-4)^2}}$$

$$= \int \frac{(x-4) dx}{\sqrt{16 - (x-4)^2}} + \int \frac{dx}{\sqrt{16 - (x-4)^2}}$$

Put $x - 4 = 4 \sin \theta \implies dx = 4 \cos \theta d\theta \dots (2 \text{ points})$

$$\text{Then } I = \int \frac{4 \sin \theta}{4 \cos \theta} \cdot 4 \cos \theta d\theta + \int \frac{4 \cos \theta}{4 \cos \theta} d\theta$$

$$= 4 \int \sin \theta d\theta + \int d\theta = -4 \cos \theta + \theta + C \dots (2 \text{ points})$$

Since $\cos^2 \theta = 1 - \sin^2 \theta$

$$\text{So } \cos^2 \theta = 1 - \left(\frac{x-4}{4}\right)^2 = 1 - \frac{(x-4)^2}{16}$$

$$= 1 - \frac{x^2 - 8x + 16}{16} = \frac{8x - x^2}{16}.$$

$$\cos \theta = \frac{\sqrt{8x-x^2}}{4} \dots (2 \text{ points})$$

$$\text{Thus } I = -4 \cdot \cos \theta + \sin^{-1} \left(\frac{x-4}{4}\right) + C \dots (1 \text{ point})$$

$$= -4 \cdot \frac{\sqrt{8x-x^2}}{4} + \sin^{-1} \left(\frac{x-4}{4}\right) + C$$

$$= -\sqrt{8x-x^2} + \sin^{-1} \left(\frac{x-4}{4}\right) + C.$$

Q.5.(d) . (8 points) . $\int \frac{dx}{3 - 5 \sin x}$

Let $t = \tan \frac{x}{2}$. Then $dx = \frac{2dt}{1+t^2}$, $\sin x = \frac{2t}{1+t^2}$(2 points)

So $\int \frac{dx}{3 - 5 \sin x} = 2 \int \frac{dt}{(1+t^2) \cdot \left(3 - 5 \cdot \frac{2t}{1+t^2}\right)}$
 $= 2 \int \frac{dt}{3 + 3t^2 - 10t}$. Let $I = \int \frac{dt}{3 + 3t^2 - 10t}$(1 point)

Then $I = \int \frac{dt}{(3t-1)(t-3)}$ (1 point)

$= \int \frac{-3/8}{(3t-1)} dt + \int \frac{dt}{t-3}$(2 points)

$= -\frac{1}{8} \int \frac{3}{3t-1} dt + \frac{1}{8} \int \frac{1}{t-3} dt$

$= -\frac{1}{8} \ln |3t-1| + \frac{1}{8} \ln |t-3| + C$(1 point)

$= -\frac{1}{8} \ln \left| 3 \tan \frac{x}{2} - 1 \right| + \frac{1}{8} \ln \left| \tan \frac{x}{2} - 3 \right| + C$(1 point)

$= \frac{1}{8} \ln \left| \frac{t-3}{3t-1} \right|$.

.....OR.....

$\int \frac{dx}{3 - 5 \sin x}$
 $= \frac{1}{4} \ln \left| \frac{\tan \left(\frac{x}{2}\right) - 3}{3 \tan \left(\frac{x}{2}\right) - 1} \right| + C$(1 point)

NOTE: Partial Fraction:

$$\frac{1}{(3t-1)(t-3)} = \frac{A}{3t-1} + \frac{B}{t-3}$$

$$= \frac{At - 3A + 3Bt - B}{(3t-1)(t-3)} = \frac{(A+3B)t + (-3A-B)}{(3t-1)(t-3)}$$

So $A + 3B = 0$, $-3A - B = 1$

Solving: $A = -3/8$, $B = 1/8$.

Q.5.(e) (9 points). $\int \frac{x^2 + 7x + 11}{(x^2 + 6x + 13)(x - 2)} dx.$

Let $\frac{x^2 + 7x + 11}{(x^2 + 6x + 13)(x - 2)}$

$$\frac{A}{x - 2} + \frac{Bx + C}{x^2 + 6x + 13} \dots (1 \text{ point})$$

$$\implies x^2 + 7x + 11 =$$

$$A(x^2 + 6x + 13) + (Bx + C)(x - 2) \dots (1 \text{ point})$$

$$x = 2 \implies 29 = 29A \implies A = 1 \dots (1 \text{ point})$$

$$x = 0 \implies 11 = 13A - 2C \implies C = 1$$

$$x = 1 \implies 19 = 20A + (B + C)(-1)$$

$$\implies -1 = (B + 1)(-1) \implies B = 0. \text{ (up to here)} \dots (2 \text{ points})$$

So $\int \frac{x^2 + 7x + 11}{(x^2 + 6x + 13)(x - 2)} dx$

$$= \int \frac{1}{x - 2} dx + \int \frac{1}{x^2 + 6x + 13} dx$$

$$= \ln|x - 2| + \int \frac{1}{(x + 3)^2 + 4} dx ; \dots (1 \text{ point})$$

$$u = x + 3.$$

$$= \ln|x - 2| + \int \frac{1}{u^2 + 4} du$$

$$= \ln|x - 2| + \frac{1}{4} \int \frac{1}{\left(\frac{u}{2}\right)^2 + 1} du$$

$$= \ln|x - 2| + \dots (1 \text{ point})$$

$$\frac{1}{2} \tan^{-1} \left(\frac{x + 3}{2} \right) + C \dots (2 \text{ points})$$

Q.5. (f) (6 points) . $\int \frac{1}{x + \sqrt[3]{x}} dx$.

SOLUTION. Let $u = \sqrt[3]{x}$

$$\implies u^3 = x, 3u^2 du = dx \dots (2 \text{ points})$$

So $\int \frac{1}{x + \sqrt[3]{x}} dx$

$$= \int \frac{3u^2 du}{u^3 + u} \dots (1 \text{ point})$$

$$= 3 \int \frac{u^2}{u(u^2 + 1)} du$$

$$= 3 \int \frac{u}{u^2 + 1} du$$

$$= \frac{3}{2} \int \frac{2u}{u^2 + 1} du$$

$$\left[\text{Since } \frac{d}{du} (u^2 + 1) = 2u \right]$$

$$= \frac{3}{2} \ln |u^2 + 1| + C \dots (2 \text{ points})$$

$$= \frac{3}{2} \ln \left| \sqrt[3]{x^2} + 1 \right| + C \dots (1 \text{ point}) .$$

Q.6. Determine whether the sequence converges or diverges. If it converges, find its limit.

(a). (4 points). $a_n = \frac{1 + \sin 2n}{1 + \sqrt{n}}$.

Solution. By the squeeze Theorem, and since $0 \leq 1 + \sin 2n \leq 2$.

Then, $0 \leq \frac{1 + \sin 2n}{1 + \sqrt{n}} \leq \frac{2}{1 + \sqrt{n}}$ (3 points)

So, $\lim_{n \rightarrow \infty} 0 \leq \lim_{n \rightarrow \infty} \frac{1 + \sin 2n}{1 + \sqrt{n}} \leq \lim_{n \rightarrow \infty} \frac{2}{1 + \sqrt{n}}$.

Thus, $0 \leq \lim_{n \rightarrow \infty} \frac{1 + \sin 2n}{1 + \sqrt{n}} \leq 0$.

$\implies \lim_{n \rightarrow \infty} \frac{1 + \sin 2n}{1 + \sqrt{n}} = 0$ (1 point)

CONVERGES.

=====

Q.6. (b). (4 points). $a_n = \ln \sqrt{n+1} - \frac{1}{2} \ln n$.

Solution. $\lim_{n \rightarrow \infty} \left(\ln \sqrt{n+1} - \frac{1}{2} \ln n \right)$

$= \lim_{n \rightarrow \infty} \left(\frac{1}{2} [\ln(n+1) - \ln n] \right)$

$= \lim_{n \rightarrow \infty} \frac{1}{2} \ln \frac{(n+1)}{n}$ (2 points)

$= \frac{1}{2} \ln \left[\lim_{n \rightarrow \infty} \left(\frac{n+1}{n} \right) \right]$

$= \frac{1}{2} \ln 1$

$= 0$ (2 points)

CONVERGES.

Q.7. (8 points). For the series $\sum_{n=1}^{\infty} \frac{1}{n(n+1)}$.

(a) Verify that the integral test is applicable.

(b) Use the integral test to determine whether the series converges or diverges.

Answer to the question.

Q.7. (4 points). (a) Verify that the integral test is applicable.

Solution. (a) Let $f(x) = \frac{1}{x(1+\ln x)}$;

$D_f = (0, +\infty)$ (1 point)

On the interval $[1, +\infty]$, $f(x) > 0$

and so f is positive and continuous. (1 point)

$$\ln f(x) = -\ln[x(1+\ln x)]$$

$$= -[\ln x + \ln(1+\ln x)].$$

$$\text{So, } \frac{f'(x)}{f(x)} = -\left(\frac{1}{x} + \frac{1}{x(1+\ln x)}\right)$$

$$= -\left(\frac{1}{x} + f(x)\right).$$

$$\text{Then } f'(x) = -\underbrace{\left(\frac{1}{x} + f(x)\right)}_{< 0} \underbrace{(f(x))}_{> 0} < 0.$$

Hence on $[1, +\infty)$, f is decreasing..... (2 points)

So, the integral test is applicable.

Q.7. (4 points) .(b) Use the integral test to determine whether the series converges or

diverges.

$$\text{Solution. } \int_1^{+\infty} f(x) dx = \lim_{t \rightarrow +\infty} \int_1^t \frac{dx}{x(1 + \ln x)}.$$

$$\text{Set } u = \ln x, \text{ then } du = \frac{dx}{x}.$$

$$\text{Notice: } x = 1 \implies u = \ln 1 = 0$$

$$\text{So } \int_1^{+\infty} f(x) dx = \int_0^{+\infty} \frac{du}{1 + u} dx$$

$$= [\ln(u + 1)]_0^{+\infty}$$

$$= \lim_{n \rightarrow +\infty} \ln(u + 1) - \ln 1$$

$$= +\infty - 0$$

$$= \infty \dots \dots \dots (2 \text{ points})$$

So the integral $\int_1^{+\infty} f(x) dx$ diverges, (1 point)

Hence the series $\sum_{n=1}^{\infty} \frac{1}{n(1 + \ln n)}$ diverges..... (1 point)

Q.8. Which (if any) of the following series converges?

If a series converges, find its sum.

If a series diverges, explain why.

(a) (5 points). $\sum_{n=1}^{\infty} \frac{4}{n(n+2)}$.

Solution. $S_N = \sum_{n=1}^N \frac{4}{n(n+2)}$
 $= \sum_{n=1}^N \left(\frac{2}{n} - \frac{2}{n+2} \right)$ (2 points)
 $= \left(\frac{2}{1} - \frac{2}{3} \right) + \left(\frac{2}{2} - \frac{2}{4} \right) + \left(\frac{2}{3} - \frac{2}{5} \right) + \dots +$
 $\left(\frac{2}{N-2} - \frac{2}{N} \right) + \left(\frac{2}{N-1} - \frac{2}{N+1} \right) + \left(\frac{2}{N} - \frac{2}{N+2} \right)$.
 $= 2 + 1 - \frac{2}{N+1} - \frac{2}{N+2}$

$\Rightarrow \lim_{N \rightarrow \infty} S_N = 3$ (2 points)

The series converges and $\sum_{n=1}^{\infty} \frac{4}{n(n+2)} = 3$ (1 point)

=====

(b) (4 points). $\sum_{n=1}^{\infty} \frac{2^{3n} \ln n}{5^n}$.

Solution. $a_n = \left(\frac{8}{5} \right)^n \ln n$ (2 points)

$\lim_{n \rightarrow \infty} a_n = \infty$ (1 point)

by Divergence Test, $\sum_{n=1}^{\infty} \frac{2^{3n} \ln n}{5^n}$ diverges..... (1 point)

=====

(c) (5 points). $\sum_{n=1}^{\infty} \frac{\sin(n\pi) + 2^{3n}}{3^{2n}}$.

Solution.

$\sin(n\pi) = 0$ for all $n, \dots \dots \dots$ (1 point)

$$2^{3n} = 8^n \text{ and } 3^{2n} = 9^n.$$

$$\begin{aligned} \text{So, } & \sum_{n=1}^{\infty} \frac{\sin(n\pi) + 2^{3n}}{3^{2n}} \\ &= \sum_{n=1}^{\infty} \left(\frac{8}{9}\right)^n \dots \dots \dots (2 \text{ points}) \\ &= \frac{8/9}{1 - 8/9} = 8 \dots \dots \dots (1 \text{ point}) \end{aligned}$$

Notice the Geometric series with $a = \frac{8}{9}$ and $r = \frac{8}{9} < 1 \dots \dots \dots$ (1 point)

So, the given series is convergent and its sum is equal to 8.

=====

Term: 082 (Saturday, February 28, – Monday, June 29, 2009).

Math 102 (Calculus-II).

Major Exam-II.

Monday, May 18, 2009.

Department of Mathematics & Statistics

KFUPM.