

King Fahd University of Petroleum and Minerals
Department of Mathematics and Statistics
Math 101- Calculus I
Exam I
2010-2011 (Term 102)

Saturday, March 26, 2011

Allowed Time: 2 hours

Name: _____

ID Number: _____

Section Number: _____ **Serial Number:** _____

Instructions:

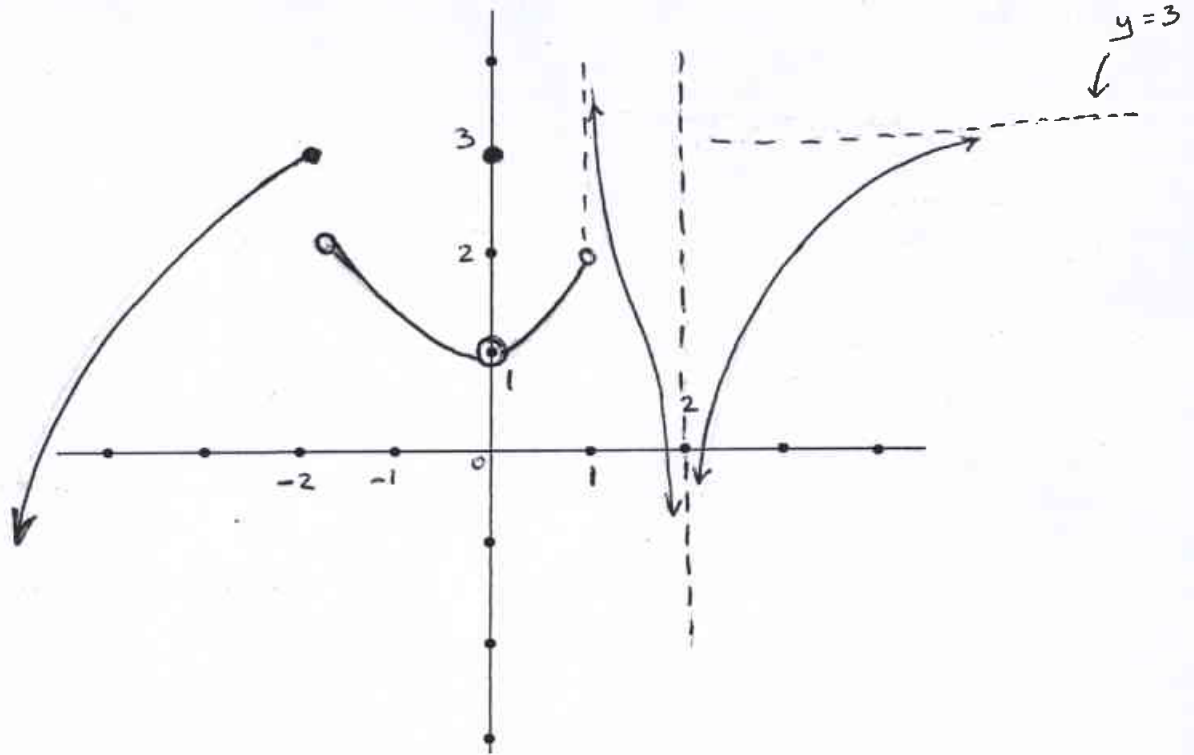
1. Write neatly and eligibly. You may lose points for messy work.
2. **Show all your work. No points for answers without justification.**
3. **Calculators and Mobiles are not allowed.**
4. Make sure that you have 10 different problems (6 pages + cover page)

Page No	Grade	Maximum Points
Page 1 (# 1, 2)		17
Page 2 (# 3)		27
Page 3 (# 4, 5)		18
Page 4 (# 6,7)		16
Page 5 (# 8, 9)		13
Page 6 (# 10)		9
Total		100

1. [10 points] Sketch the graph of a function f that satisfies all of the following conditions:

- (i) $f(0) = 3$ and $f(-2) = 3$.
 (ii) $\lim_{x \rightarrow 0} f(x) = 1$.
 (iii) $\lim_{x \rightarrow 1^-} f(x) = 2$.
 (iv) $\lim_{x \rightarrow 1^+} f(x)$ does not exist.
 (v) f has a vertical asymptote at $x = 2$.
 (vi) f has a jump discontinuity at $x = -2$.
 (vii) $\lim_{x \rightarrow -\infty} f(x) = -\infty$.
 (viii) $\lim_{x \rightarrow \infty} f(x) = 3$.

One possible graph



2. [7 points] Use the Intermediate Value Theorem to show that the equation

$$x^{10} - 100x + 5 = 0$$

has a root in the interval $(1, 2)$.

Let $f(x) = x^{10} - 100x + 5$, $[a, b] = [1, 2]$ (1)

Since i. f is continuous on $[1, 2]$, (a polynomial) (1)

ii. $f(1) = -94 < 0$

$f(2) = 829 > 0$ (3)

then, by the IVT, there is a number c in $(1, 2)$

such that $f(c) = 0$; i.e.,

$$c^{10} - 100c + 5 = 0$$

Thus the given equation has a root c in $(1, 2)$. (2)

3. Find each of the following limits. Show your work.

$$\begin{aligned}
 \text{(a) [7 points]} \quad & \lim_{x \rightarrow 7} \frac{x-7}{\sqrt{7x}-7} \\
 &= \lim_{x \rightarrow 7} \frac{x-7}{\sqrt{7x}-7} \cdot \frac{\sqrt{7x}+7}{\sqrt{7x}+7} \quad (2) \\
 &= \lim_{x \rightarrow 7} \frac{(x-7)(\sqrt{7x}+7)}{7x-49} \quad (2) \\
 &= \lim_{x \rightarrow 7} \frac{\sqrt{7x}+7}{7} \quad (2) \\
 &= \frac{7+7}{7} = 2 \quad (1)
 \end{aligned}$$

$$\begin{aligned}
 \text{(b) [7 points]} \quad & \lim_{x \rightarrow 0} \frac{(3+2x)^{-1} - 3^{-1}}{2x} \\
 &= \lim_{x \rightarrow 0} \frac{\frac{1}{3+2x} - \frac{1}{3}}{2x} \quad (1) \\
 &= \lim_{x \rightarrow 0} \frac{\frac{3-3-2x}{3(3+2x)}}{2x} \quad (2) \\
 &= \lim_{x \rightarrow 0} \frac{-2x}{3(3+2x)} \cdot \frac{1}{2x} \quad (1) \\
 &= \lim_{x \rightarrow 0} \frac{-1}{3(3+2x)} \quad (2) = \frac{-1}{9} \quad (1)
 \end{aligned}$$

$$\begin{aligned}
 \text{(c) [5 points]} \quad & \lim_{x \rightarrow \infty} (10 + x^4 - 3x^7) \\
 &= \lim_{x \rightarrow \infty} x^7 \left(\frac{10}{x^7} + \frac{1}{x^3} - 3 \right) \quad (2) \\
 &= \infty (0 + 0 - 3) \quad (2) \\
 &= -\infty \quad (1)
 \end{aligned}$$

$$\text{(d) [8 points]} \quad \lim_{x \rightarrow -\infty} \frac{\sqrt{4x^2 - 2x + 1}}{|1-x|}$$

$$\lim_{x \rightarrow -\infty} \frac{\sqrt{4x^2 - 2x + 1}}{|1-x|}$$

$$= \lim_{x \rightarrow -\infty} \frac{\sqrt{4x^2 - 2x + 1}}{1-x} \quad (2) \quad (x \rightarrow -\infty \Rightarrow x < 0 \Rightarrow |1-x| = 1-x)$$

$$= \lim_{x \rightarrow -\infty} \frac{\sqrt{x^2(4 - \frac{2}{x} + \frac{1}{x^2})}}{x(\frac{1}{x} - 1)} \quad (2)$$

$$= \lim_{x \rightarrow -\infty} \frac{|x| \sqrt{4 - \frac{2}{x} + \frac{1}{x^2}}}{x(\frac{1}{x} - 1)} \quad (1)$$

$$= \lim_{x \rightarrow -\infty} \frac{-x \sqrt{4 - \frac{2}{x} + \frac{1}{x^2}}}{x(\frac{1}{x} - 1)} \quad (1) \quad (x \rightarrow -\infty \Rightarrow x < 0 \Rightarrow |x| = -x)$$

$$= \lim_{x \rightarrow -\infty} \frac{-\sqrt{4 - \frac{2}{x} + \frac{1}{x^2}}}{\frac{1}{x} - 1} \quad (1)$$

$$= \frac{-\sqrt{4 - 0 + 0}}{0 - 1} = 2 \quad (1)$$

OR

$$\lim_{x \rightarrow -\infty} \frac{\sqrt{4x^2 - 2x + 1}}{|1-x|}$$

$$= \lim_{x \rightarrow -\infty} \frac{\sqrt{4x^2 - 2x + 1}}{1-x} \quad (2) \quad (x \rightarrow -\infty \Rightarrow x < 0 \Rightarrow |1-x| = 1-x)$$

$$= \lim_{x \rightarrow -\infty} \frac{\frac{1}{x} \sqrt{4x^2 - 2x + 1}}{\frac{1}{x} (1-x)} \quad (2)$$

$$= \lim_{x \rightarrow -\infty} \frac{-\frac{1}{\sqrt{x^2}} \sqrt{4x^2 - 2x + 1}}{\frac{1}{x} (1-x)} \quad (2) \quad (\text{when } x < 0, \sqrt{x^2} = -x)$$

$$= \lim_{x \rightarrow -\infty} \frac{-\sqrt{4 - \frac{2}{x} + \frac{1}{x^2}}}{\frac{1}{x} - 1} \quad (1)$$

$$= \frac{-\sqrt{4 - 0 + 0}}{0 - 1} = 2 \quad (1)$$

4. [9 points] Is $f(x) = \lfloor x \rfloor + \lfloor -x \rfloor$ continuous at $x = 0$. Use limits to justify your answer.

① We need to check whether $\lim_{x \rightarrow 0} f(x) = f(0)$

① • $f(0) = \lfloor 0 \rfloor + \lfloor -0 \rfloor = 0 + 0 = 0$

② • $\lim_{x \rightarrow 0^+} f(x) = \lim_{x \rightarrow 0^+} \lfloor x \rfloor + \lfloor -x \rfloor = 0 + (-1) = -1$

② • $\lim_{x \rightarrow 0^-} f(x) = \lim_{x \rightarrow 0^-} \lfloor x \rfloor + \lfloor -x \rfloor = -1 + 0 = -1$

① • Since $\lim_{x \rightarrow 0^+} f(x) = \lim_{x \rightarrow 0^-} f(x) = -1$, then $\lim_{x \rightarrow 0} f(x) = -1$

① • Since $\lim_{x \rightarrow 0} f(x) \neq f(0)$, $[-1 \neq 0]$

① then f is not continuous at $x = 0$

5. [9 points] Let

$$f(x) = \begin{cases} a + bx & \text{if } x > 2 \\ 3 & \text{if } x = 2 \\ b - ax^2 & \text{if } x < 2 \end{cases}$$

Find the values of a and b that make f continuous at $x = 2$.

We need to find a & b so that

① $\left. \begin{array}{l} \lim_{x \rightarrow 2} f(x) = f(2) \\ \text{i.e., } \lim_{x \rightarrow 2^+} f(x) = f(2) \quad \& \quad \lim_{x \rightarrow 2^-} f(x) = f(2) \end{array} \right\}$

③ • $\lim_{x \rightarrow 2^+} f(x) = f(2) \Rightarrow \lim_{x \rightarrow 2^+} (a + bx) = 3 \Rightarrow a + 2b = 3$

③ • $\lim_{x \rightarrow 2^-} f(x) = f(2) \Rightarrow \lim_{x \rightarrow 2^-} (b - ax^2) = 3 \Rightarrow b - 4a = 3$

• Solving the system $\begin{cases} a + 2b = 3 \\ -4a + b = 3 \end{cases}$

① We get $a = -\frac{1}{3}$

① $b = \frac{5}{3}$

6. [8 points] Use the graph of $f(x) = \sqrt{x}$ to find a number $\delta > 0$ such that

$$\text{if } |x - 9| < \delta, \text{ then } |\sqrt{x} - 3| < 0.2.$$

$$\varepsilon = 0.2$$

"not to a scale"

$$f(a) = 2.8 \Rightarrow \sqrt{a} = \frac{28}{10} \Rightarrow a = \frac{784}{100} = 7.84 \quad (2)$$

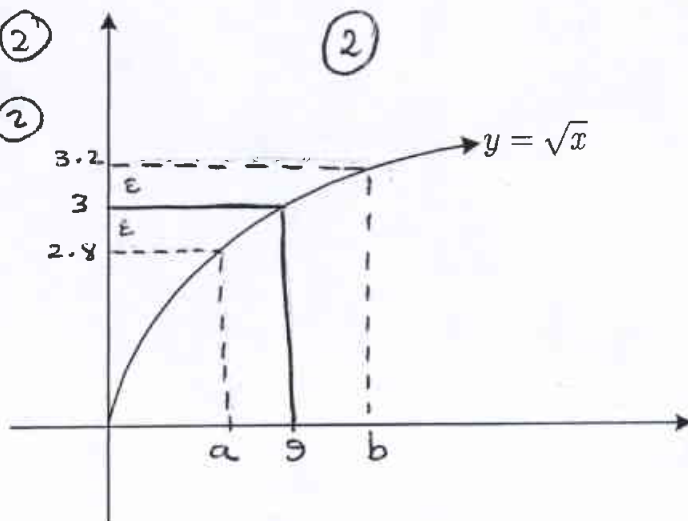
$$f(b) = 3.2 \Rightarrow \sqrt{b} = \frac{32}{10} \Rightarrow b = \frac{1024}{100} = 10.24 \quad (2)$$

We may choose

$$\delta = \text{minimum} \{9 - a, b - 9\} \quad (1)$$

$$= \text{minimum} \{1.16, 1.24\}$$

$$= 1.16 \quad (1)$$



7. Let $y = f(x) = x^2 - 8x + \pi$.

(a) [2 points] Find the average rate of change of y with respect to x over the interval $[3, 4]$.

$$\begin{aligned} \text{Average rate of change} &= \frac{f(4) - f(3)}{4 - 3} \quad (1) \\ &= \frac{(-16 + \pi) - (-15 + \pi)}{1} = -1 \quad (1) \end{aligned}$$

(b) [6 points] Use limits to find the instantaneous rate of change of y with respect to x at $x = 3$.

Instantaneous rate of change at $x = 3$

$$\begin{aligned} &= f'(3) \quad (1) \\ &= \lim_{x \rightarrow 3} \frac{f(x) - f(3)}{x - 3} \quad (1) \\ &= \lim_{x \rightarrow 3} \frac{(x^2 - 8x + \pi) - (-15 + \pi)}{x - 3} = \lim_{x \rightarrow 3} \frac{x^2 - 8x + 15}{x - 3} \quad (1) \\ &= \lim_{x \rightarrow 3} \frac{(x - 3)(x - 5)}{x - 3} \quad (2) \\ &= \lim_{x \rightarrow 3} (x - 5) = 3 - 5 = -2 \quad (1) \end{aligned}$$

8. [6 points] The following limit

$$\lim_{x \rightarrow \frac{\pi}{2}} \frac{2 \cos(2x) + 2}{2x - \pi}$$

represents the derivative of some function f at some number a . Find f and a .

a $\lim_{x \rightarrow \frac{\pi}{2}} \frac{2 \cos(2x) + 2}{2x - \pi} = \lim_{x \rightarrow \frac{\pi}{2}} \frac{2 \cos(2x) + 2}{2(x - \frac{\pi}{2})}$ (1)

$$= \lim_{x \rightarrow \frac{\pi}{2}} \frac{\cos(2x) + 1}{x - \frac{\pi}{2}}$$
 (1)

$$= \lim_{x \rightarrow \frac{\pi}{2}} \frac{\cos(2x) - \cos(2 \cdot \frac{\pi}{2})}{x - \frac{\pi}{2}}$$
 (1)

$$= f'(\frac{\pi}{2})$$
 (1)

So ~~there~~ $f(x) = \cos(2x)$ & $a = \frac{\pi}{2}$ (1) + (1)

9. [7 points] Is the line $x = 1$ a vertical asymptote for the graph of $f(x) = \frac{-2x^2 + 3x - 1}{3x^2 - 2x - 1}$. Justify your answer.

$$\lim_{x \rightarrow 1} f(x) = \lim_{x \rightarrow 1} \frac{-2x^2 + 3x - 1}{3x^2 - 2x - 1}$$

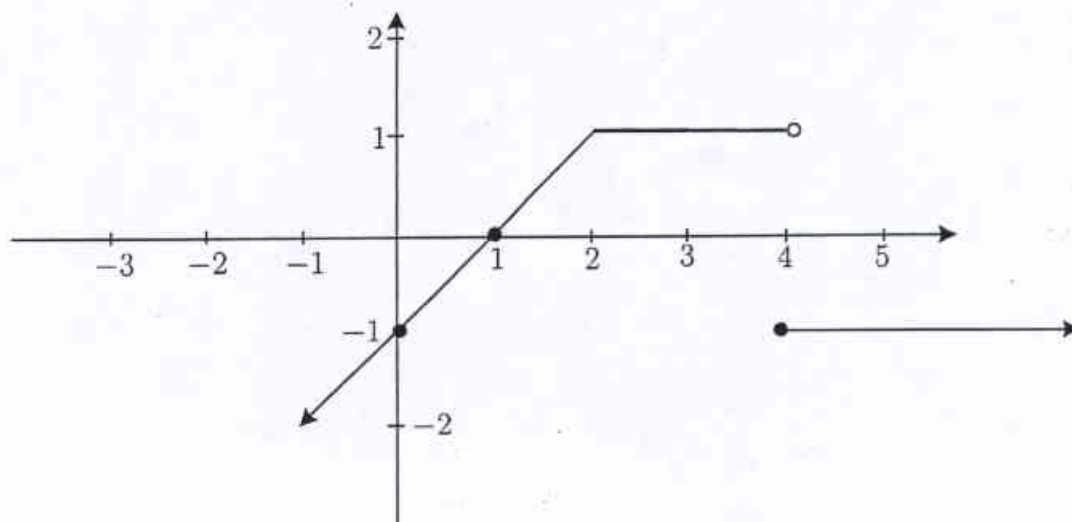
$$= \lim_{x \rightarrow 1} \frac{(2x-1)(1-x)}{(3x+1)(x-1)}$$
 (2)

$$= \lim_{x \rightarrow 1} -\frac{2x-1}{3x+1} = -\frac{1}{4}$$
 (2)

(2) { Since $\lim_{x \rightarrow 1} f(x) = \lim_{x \rightarrow 1^+} f(x) = \lim_{x \rightarrow 1^-} f(x) = -\frac{1}{4}$

(1) { $\neq \infty$ or $-\infty$
then the line $x = 1$ is not a vertical asymptote

10. [9 points] For the function f whose graph is given below, find the derivative if it exists. Justify your answer.



(a) $f'(0)$ = the slope of the tangent line to the curve $y = f(x)$
 at the point $(0, f(0)) = (0, -1)$
 ①
 = the slope of the line segment joining $(0, -1)$ & $(1, 0)$
 $= \frac{0 - (-1)}{1 - 0}$ ①
 $= 1$ ①

(b) $f'(2)$
 $f'(2)$ does not exist ①
 since f has a corner at $x=2$ ①

(c) $f'(4)$ does not exist ①
 since f is not continuous at $x=4$ ①

(d) $f'(5)$ = the slope of the tangent line to the curve $y = f(x)$
 at the point $(5, f(5)) = (5, -1)$
 ①
 = the slope of the horizontal line $y = -1$, for $x > 4$
 ①
 $= 0$