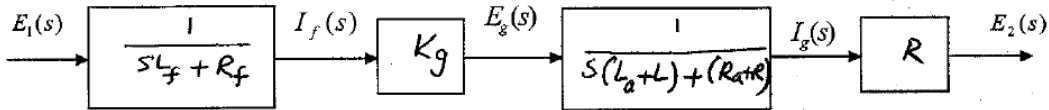


KING FAHD UNIVERSITY OF PETROLEUM & MINERALS
ELECTRICAL ENGINEERING DEPARTMENT

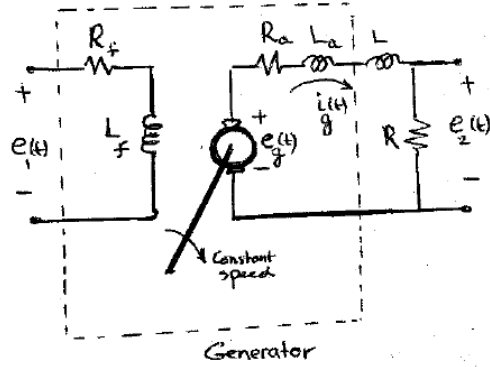
EE380 [081]	SEC# _____	Quiz # 2
Name: _____	ID: _____	Grade: _____

Fill in the boxes the appropriate values, and then find the transfer function $\frac{E_2(s)}{E_1(s)}$ for the system shown. Evaluate your results for the following values.

$L_f = 50 H, L_a = L = 1 H, K_g = 200 \text{ volts / field ampere}, R_f = 50 \Omega, R_a = R = 2 \Omega$



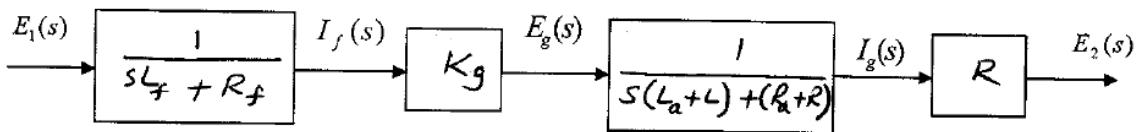
$$\begin{aligned}
 T.F. &= \frac{R K_g}{(sL_f + R_f)[(L_a + L)s + (R_a + R)]} \\
 &= \frac{400}{(50s + 50)[4s + 4]} \\
 &= \frac{400}{200(s+1)^2} = \frac{2}{(s+1)^2}
 \end{aligned}$$



EE380 [081]	SEC# <u>3</u>	Quiz # 2
Name: <u>Key</u>	ID: _____	Grade: _____

Fill in the boxes the appropriate values, and then find the transfer function $\frac{E_2(s)}{E_1(s)}$ for the system shown. Evaluate your results for the following values.

$L_f = 50 H, L_a = L = 1 H, K_g = 200 \text{ volts / field ampere}, R_f = 500 \Omega, R_a = R = 1 \Omega$



$$\begin{aligned}
 \frac{E_2(s)}{E_1(s)} &= \frac{R K_g}{(sL_f + R_f)[s(L_a + L) + (R_a + R)]} \\
 &= \frac{200}{(50s + 500)(2s + 2)} \\
 &= \frac{2}{(s+10)(s+1)}
 \end{aligned}$$

