

CE 203 STRUCTURAL MECHANICS I

First Semester 2012 / 2013 (121)

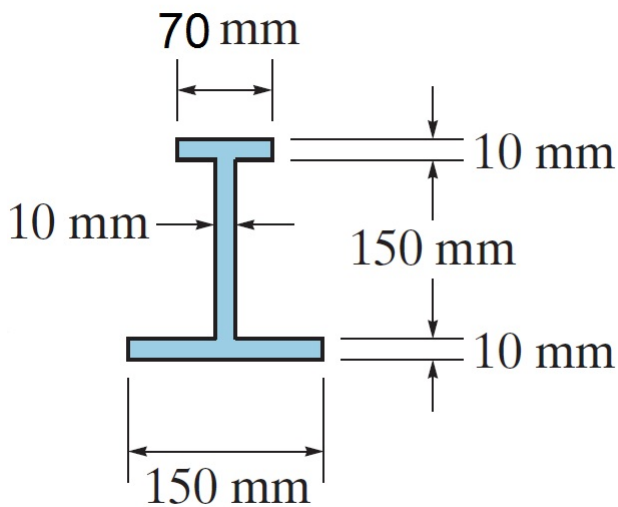
HOMEWORK NO. 11 (Key Solution)

- **Textbook Sections Covered:** 6.4 (Beam Bending) & 7.1-7.2 (Shear Stress in Beams)
- **DUE DATE:** Monday, 3 December 2012

Problem # 1:-

Given Data:

- The given cross section.
- $M = +4 \text{ kN.m}$.



Required:

- ❖ The resultant force (due to bending) that act on each of the following parts :
 - a) on the top flange,
 - b) on the bottom flange , and
 - c) on the web.

Solution:

From the data of the given cross section:-

$$\bar{y} = \frac{\sum A\bar{y}}{\sum A} = \frac{0.15 * 0.01 * 0.005 + 0.15 * 0.01 * 0.085 + 0.07 * 0.01 * 0.165}{0.15 * 0.01 + 0.15 * 0.01 + 0.07 * 0.01} = 0.0677 \text{ m}$$

$$I = \sum (I + Ad^2)$$

$$= \frac{0.15 * 0.01^3}{12} + 0.15 * .01 * (0.0677 - 0.005)^2 + \frac{0.01 * 0.15^3}{12} + 0.15 * .01 * (0.0677 - 0.085)^2 + \frac{0.07 * 0.01^3}{12} + 0.07 * .01 * (0.0677 - 0.165)^2$$

$$I = 1.58 * 10^{-5} \text{ m}^4$$

$$\sigma = \frac{M * c}{I} \Rightarrow$$

$$\sigma_{top} = \frac{M * (0.17 - .0677)}{I} = \frac{4 * (0.17 - 0.0677)}{1.58 * 10^{-5}} = 25.90 \text{ MPa.}$$

$$\sigma_{bottom} = \frac{M * .0677}{I} = \frac{4 * 0.0677}{1.58 * 10^{-5}} = 17.14 \text{ MPa.}$$

Resultant force at the top flange (compression) is

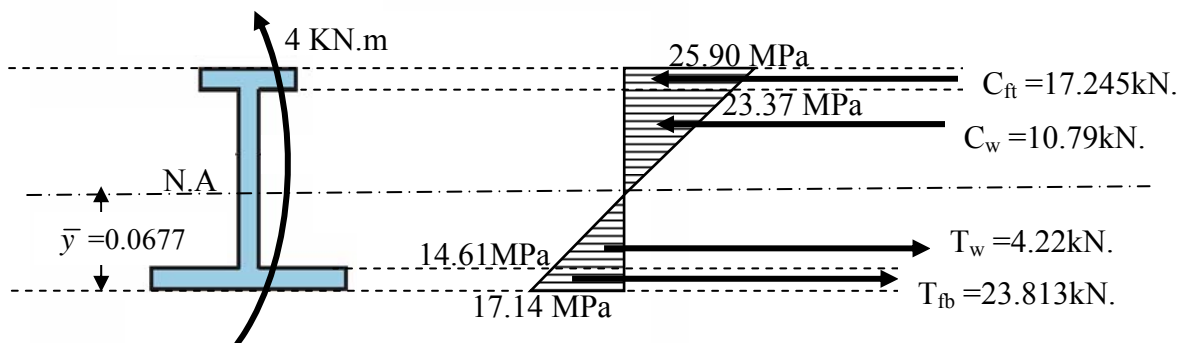
$$\frac{(25.9+23.37)}{2} * 70 * 10 = 17244.5 \text{ N} = 17.245 \text{ KN. (compression)} \quad \text{Ans}$$

Resultant force at the bottom flange (tension) is

$$\frac{(17.14+14.61)}{2} * 150 * 10 = 23813 \text{ N} = 23.813 \text{ KN. (tension)} \quad \text{Ans}$$

Resultant force on the web is

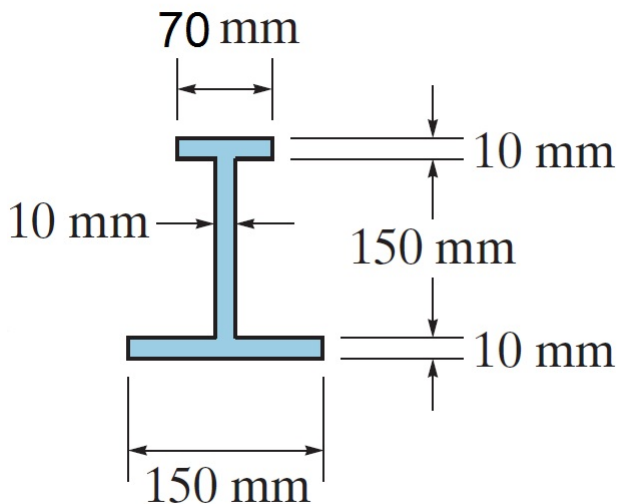
$$\frac{(23.37)}{2} * (150 - 57.7) * 10 - \frac{(14.61)}{2} * (57.7) * 10 = 6570 \text{ N} = 6.57 \text{ KN. (compression)} \quad \text{Ans}$$



Problem # 2:-

Given Data:

- The given cross section.
- A downward vertical shear force $V = 10 \text{ kN}$.



Required:

- The value of the shear stress at the following locations:
 - a) top of cross section ,
 - b) bottom of cross section ,
 - c) at the Neutral Axis,
 - d) at just above and just below the junction of web and top flange (2 values are needed here),
 - e) At just above and just below the junction of web and bottom flange (2 values are needed here) .
- The distribution of shear stress along the vertical axis using the calculated shear stresses.

Solution:

From the problem # 1: $\bar{y} = 0.0677 \text{ m}$; and $I = 1.58 * 10^{-8} \text{ m}^4$

$$\tau = \frac{VQ}{It} ; Q = \bar{y}' A'$$

$$\tau_1 = 0$$

$$\tau_2 = \frac{10 * 10^3 [0.070 * 0.010 * (0.165 - 0.0677)]}{1.58 * 10^{-8} * 0.07} = 0.616 \text{ MPa.}$$

$$\tau_3 = \frac{10 * 10^3 [0.070 * 0.010 * (0.165 - 0.0677)]}{1.58 * 10^{-8} * 0.01} = 4.311 \text{ MPa.}$$


$$\tau_4 = \frac{10 * 10^3 [0.070 * 0.010 * (0.165 - 0.0677) + \frac{0.01 * (0.15 - 0.0577)^2}{2}]}{1.58 * 10^{-8} * 0.01} = 7.007 \text{ MPa}$$

$$\tau_3 = \frac{10 \times 10^3 [0.150 \times 0.010 \times (0.0677 - 0.005)]}{1.58 \times 10^{-8} \times 0.01} = 5.953 \text{ MPa}$$

$$\tau_6 = \frac{10 \times 10^3 [0.150 \times 0.010 \times (0.0677 - 0.005)]}{1.58 \times 10^{-8} \times 0.15} = 0.397 \text{ MPa}$$

$$\tau_7 = 0$$

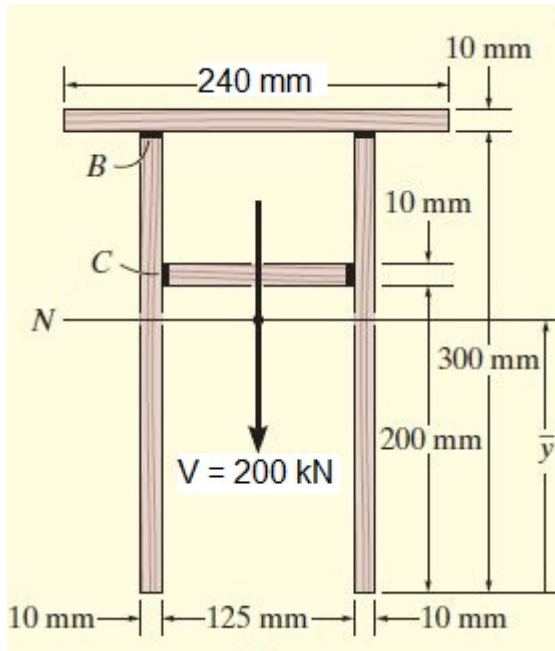
Shear stress $\tau_{(y)}$ distribution along c/s depth:



Problem # 3:-

Given Data:

- The given shear force and cross section.



Required:

- ❖ The value of the maximum shear stress due to the given shear force.

Solution:

From the data of the given cross section:-

$$\bar{y} = \frac{\sum A\bar{y}}{\sum A} = \frac{0.01 * 0.3 * 0.15 * 2 + 0.01 * 0.125 * 0.205 + 0.24 * 0.01 * 0.305}{0.01 * 0.3 * 2 + 0.01 * 0.125 + 0.24 * 0.01} = 0.1957 \text{ m}$$

$$I = \sum (I + Ad^2) = \left[\frac{0.01 * 0.3^3}{12} + 0.01 * 0.3 * (0.15 - 0.1957)^2 \right] * 2 + \frac{0.125 * 0.01^3}{12} + 0.01 * 0.125 * (0.205 - 0.1957)^2 + \frac{0.24 * 0.01^3}{12} + 0.24 * 0.01 * (0.305 - 0.1957)^2$$

$$I = 86.34 * 10^{-6} \text{ m}^4$$

∴ Max shear stress is at the neutral axis, →

$$Q_{\text{at the neutral axis}} = yA = \left[0.1957 - \frac{0.1957}{2} \right] * 0.1957 * 0.01 * 2 = 0.383 * 10^{-3} \text{ m}^3$$

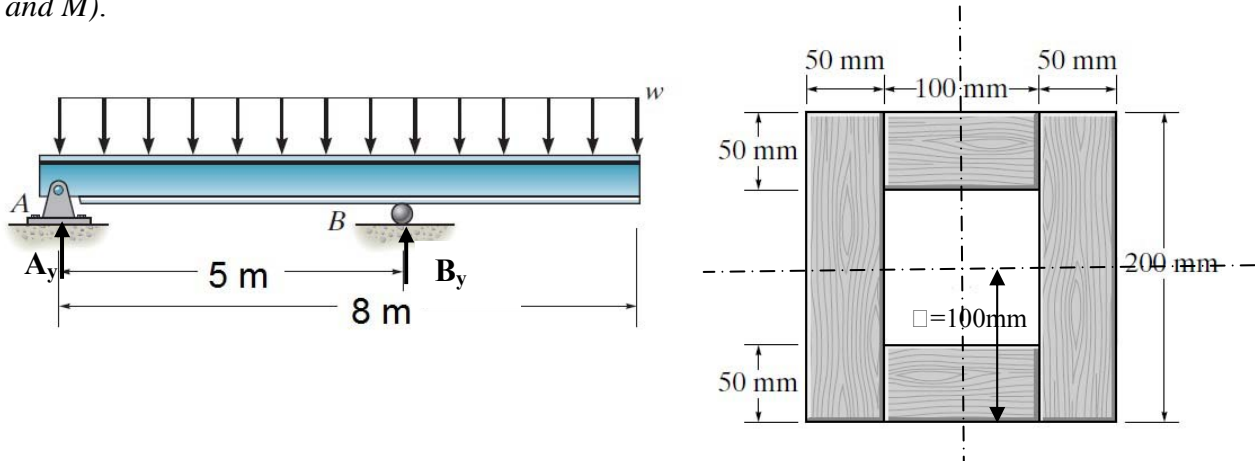
$$\tau = \frac{VQ}{It} = \frac{200 * 10^3 * 0.383 * 10^{-3}}{86.34 * 10^{-6} * 0.02} = 44.36 \text{ MPa. Ans}$$

Problem # 4:-

Given Data:

- The shown loaded beam and its cross section.
- Allowable normal stress is 30 MPa.
- Allowable shear stress = 10 MPa.

Hint : First, you need to draw the shear and moment diagrams to determine the maximum values of V and M).



Required:

- ❖ The largest value of the distributed load w that can be safely applied.

Solution:

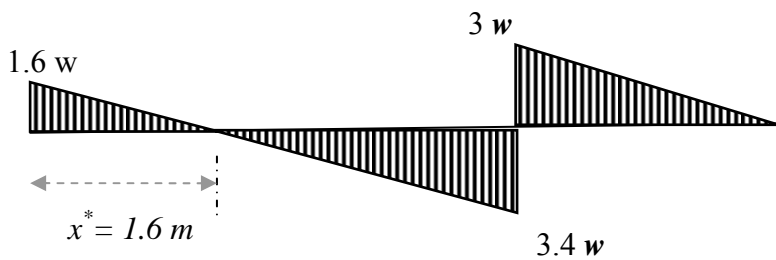
First we have to find the reactions and then draw the shear and bending moment diagrams as follows:-

$$\sum M_B = 0; \quad A_y * 5 - w * 5 * 2.5 + w * 3 * 1.5 = 0 \Rightarrow A_y = 1.6 w$$

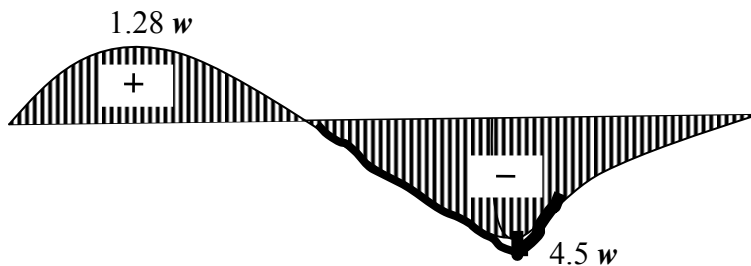
$$\sum M_A = 0; \quad B_y * 5 - w * 5 * 2.5 - w * 3 * 6.5 = 0 \Rightarrow B_y = 6.4 w$$

Now we can draw the shear and bending moment diagrams as follows:-

SFD:



BMD:



From the shear diagram, the maximum shear force is $3.4 w$.

And from the bending moment diagram, the maximum bending moment is $-4.5w$.

For the given cross section, $b = 0.1 \text{ m}$ as shown by inspection

$$I = \frac{0.2 * 0.2^3}{12} - \frac{0.1 * 0.1^3}{12} = 1.25 * 10^{-4} \text{ m}^4$$

From the bending moment,

$$\sigma_{max} = \frac{M * c}{I} = 30 \frac{N}{\text{mm}^2} = 30 * 10^6 \frac{N}{\text{m}^2} = \frac{4.5W * 0.1}{1.25 * 10^{-4}}$$

$$w = 8330 \text{ N/m} = 8.33 \text{ kN/m}$$

From the Shear,

$$\tau_{max} = \frac{V * Q}{I * t} = 10 \frac{N}{\text{mm}^2} = 10 * 10^6 \frac{N}{\text{m}^2} = \frac{3.4W * [0.075 * 0.1 * 0.05 + 2 * 0.05 * 0.1 * 0.05]}{1.25 * 10^{-4} * 0.1}$$

$$w = 42017 \text{ N/m} = 42.02 \text{ kN/m}$$

Then, the largest value of the distributed load w that can be safely applied is the minimum value of $[8.33 \text{ kN/m and } 42.02 \text{ kN/m}] = 8.33 \text{ kN/m}$. Ans.