

(circle one letter only)

1) Using four rectangles and the midpoint rule, the area under the graph of  $f(x) = 1 + x^2$  from  $x = 0$  to  $x = 4$  is approximately equal to

(a) 27

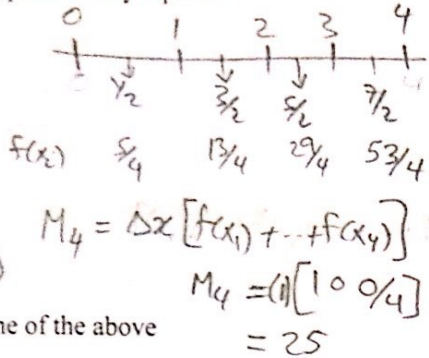
(b) 20

(c) 30

(d) 18

(e) 25

(f) None of the above



$$2) \int_0^1 \frac{e^{\tan^{-1}x}}{1+x^2} dx = \bar{I} \quad u = \tan^{-1}x \Rightarrow du = \frac{dx}{1+x^2}$$

$$I = \int_0^{\pi/4} e^u du = [e^u]_0^{\pi/4}$$

(a)  $1 - e^{\pi/2}$ (b)  $e^\pi - \pi$ (c)  $e^{\pi/2} - 1$ (d)  $e^{\pi/4} - 1$ (e)  $e^{-\pi/4} - 2$ 

(f) None of the above

$$= e^{\pi/4} - 1$$

$$3) \int_0^1 (1+x)\sqrt{4-4x} dx = 2 \int_0^1 (1+x)\sqrt{1-x} dx$$

$$\text{let } u = 1-x \Rightarrow du = -dx$$

$$x = 1-u$$

$$I = 2 \int_0^1 (2-u)u^{1/2} du$$

$$= 2 \int_0^1 (2u^{1/2} - u^{3/2}) du$$

$$= 2 \left[ \frac{4}{3} u^{3/2} - \frac{2}{5} u^{5/2} \right]_0^1$$

$$(f) \text{ None of the above } = 2 \left[ \frac{4}{3} - \frac{2}{5} \right] = 2 \left[ \frac{20-6}{15} \right] = 28/15$$

(a) 14/15

(b) 15/28

(c) 28/15

(d) 28/13

(e) 15/13

(f) None of the above

4) If  $g$  is a continuous function such that

$$\int_0^{2x} e^{t/2} g(t) dt = \frac{1}{2} x e^x, \text{ then } g(4) =$$

diff both sides, use FTC

$$e^x g(2x)(2) = \frac{1}{2} [e^x + x e^x]$$

$$g(2x) = \frac{1}{4} [1+x]$$

$$\text{let } x=2$$

$$g(4) = \frac{1}{4} [3] = 3/4$$

(a) 4/3

(b) 3/4

(c) 3/2

(d) 4/5

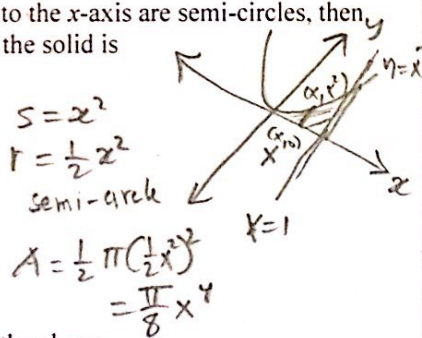
(e) 2/3

(f) None of the above

5) The base of a solid is bounded by the curves  $y = x^2$ ,  $y = 0$  and  $x = 1$ . If the cross-sections perpendicular to the  $x$ -axis are semi-circles, then the volume of the solid is

(a)  $4/\pi$ (b)  $40/\pi$ (c)  $\pi/4$ (d)  $\pi/40$ (e)  $2\pi$ 

(f) None of the above



$$V = \frac{\pi}{8} \int_0^1 x^4 dx = \frac{\pi}{8} \left( \frac{1}{5} \right) = \frac{\pi}{40}$$

6) The area of the region enclosed by the curves  $y^2 = -x$  and the line  $x + y + 2 = 0$  is equal to

(a) 9/2


(b) 7/2

(c) 1

(d) 0

(e) 5/2

(f) None of the above



Right to Left

write all curves  $x = \dots$ 

$$A = \int_{-1}^2 [(-y^2) - (-y-2)] dy$$

$$= \left[ -\frac{1}{3} y^3 + \frac{1}{2} y^2 + 2y \right]_{-1}^2 = \left( -\frac{8}{3} + 2 + 4 \right) - \left( \frac{1}{3} + \frac{1}{2} - 2 \right)$$

$$= 8 - \frac{8}{3} - \frac{1}{3} - \frac{1}{2} = 5 - \frac{1}{2} = \frac{9}{2}$$

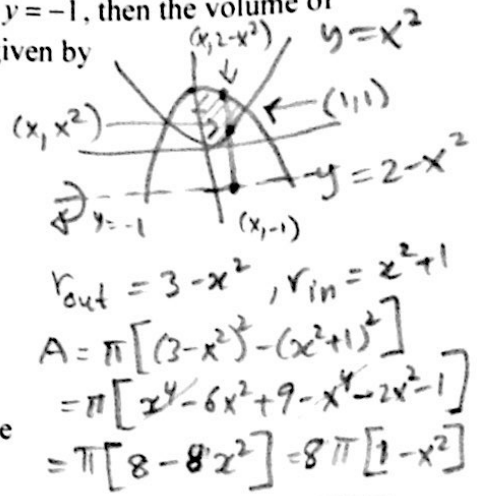
(circle one letter)

7)  $\int_{-2}^2 \left( \frac{x^2 \tan x}{x^2+1} + \sqrt{4-x^2} \right) dx =$

- (a) 0  $f(x) = \frac{x^2 \tan x}{x^2+1}$  is odd  
 (b)  $\pi/4$   $f(-x) = \frac{x^2 \tan(-x)}{x^2+1} = \frac{-x^2 \tan x}{x^2+1} = -f(x) \Rightarrow \int_{-2}^2 f(x) dx = 0$   
 (c)  $\pi/3$   
 (d)  $\pi$   
 (e)  $\pi/2$   
 (f) None of the above  $\int_{-2}^2 \sqrt{4-x^2} dx$  half circle with  $r=2$   
 $\int_{-2}^2 \sqrt{4-x^2} dx = 2\pi$

8) The region in the first quadrant enclosed by the parabolas  $y = x^2$ ,  $y = 2 - x^2$ , and the y-axis is rotating about the line  $y = -1$ , then the volume of the solid generated is given by

- (a)  $\int_0^1 \pi(1-x^4) dx$   
 (b)  $\int_0^1 8\pi(1+x^2) dx$   
 (c)  $\int_0^1 4\pi(1-x^2) dx$   
 (d)  $\int_0^1 8\pi(1-x^2) dx$   
 (e)  $\int_0^1 4\pi(1+x^2) dx$   
 (f) None of the above



9) If  $f$  is an even function such that  $\int_{-3}^3 f(t) dt = 10$  and  $\int_{-2}^2 f(t) dt = 16$ , then  $\int_{\sqrt{2}}^{\sqrt{3}} 2xf(x^2) dx = I$

- (a) 0  $f$  even  $\Rightarrow \int_0^2 = 8, \int_0^3 = 5$   
 (b) 3  $u = x^2 \Rightarrow du = 2x dx$   
 (c) -3  $I = \int_2^3 f(u) du = 5 - 8 = -3$   
 (d) 8  
 (e) -5  
 (f) None of the above

10) If  $F(x) = \int_{1/2}^{2x} f(t) dt$  and  $f(t) = \int_{1/2}^t \frac{\sqrt{1+u^2}}{u} dt$  then  $F''(1) =$

- (a)  $5\sqrt{17}$   
 (b)  $4\sqrt{17}$   
 (c)  $3\sqrt{17}$   
 (d)  $2\sqrt{17}$   
 (e)  $\sqrt{17}$   
 (f) None of the above
- $F'(x) = f(2x) (2)$   
 $F''(x) = f'(2x) (2)(2) = 4f'(2x)$   
 $f'(t) = \frac{1+t^4}{t^2} (2t) = \frac{2}{t} \sqrt{1+t^4}$   
 $f'(2x) = \frac{2}{2x} \sqrt{1+16x^4} = \frac{1}{x} \sqrt{1+16x^4}$   
 $F''(1) = 4f'(2) = 4\sqrt{17}$

11)  $\int_0^{\pi/4} (\sec x + \cos x)^2 dx = I$

- (a)  $(5\pi+10)/8$   
 (b)  $(4\pi+10)/8$   
 (c)  $(3\pi+10)/8$   
 (d)  $(5\pi+10)/8$   
 (e)  $(2\pi+10)/8$   
 (f) None of the above
- $(\sec x + \cos x)^2 = \sec^2 x + 2 + \cos^2 x$   
 $\sec^2 x + 2 + \frac{1}{2} + \frac{1}{2} \cos 2x$   
 $I = \left[ \tan x + \frac{5}{2}x + \frac{1}{4} \sin 2x \right]_0^{\pi/4}$   
 $= \left( 1 + \frac{5\pi}{8} + \frac{1}{4} \right) - (0+0+0)$   
 $= \frac{5}{4} + \frac{5\pi}{8} = \frac{10}{8} + \frac{5\pi}{8}$   
 $= (10+5\pi)/8$

12)  $\int \frac{\ln(\tan^{-1} x)}{(x^2+1)\tan^{-1} x} dx = I$

- (a)  $\frac{1}{2} [\ln(\tan^{-1} x)] + C$   
 (b)  $\frac{1}{2} [\ln(\tan^{-1} x)]^2 + C$   
 (c)  $[\ln(\tan^{-1} x)]^2 + C$   
 (d)  $\frac{1}{2} [\tan^{-1} x]^2 + C$   
 (e)  $\ln(\tan^{-1} x) + C$   
 (f) None of the above
- $u = \tan^{-1} x \Rightarrow du = \frac{dx}{1+x^2}$   
 $I = \int \frac{\ln u}{u} du$   
 $w = \ln u \Rightarrow dw = \frac{du}{u}$   
 $I = \int w dw = \frac{1}{2} w^2 + C$   
 $= \frac{1}{2} (\ln u)^2 + C$   
 $= \frac{1}{2} [\ln(\tan^{-1} x)]^2 + C$