

Second Major (T031)

- (1)Q0 Five moles of an ideal gas undergo a reversible isothermal  
21Q0 compression from volume  $V$  to volume  $V/2$  at temperature  
Q0 30 degrees C. What is the change in the entropy of the gas?  
Q0  
A1 -29 J/K.  
A2 29 J/K.  
A3 18 J/K.  
A4 -81 J/K.  
A5 -18 J/K.  
Q0
- (2)Q0 An automobile engine operates with an overall efficiency  
21Q0 of 20%. How many gallons of gasoline is wasted for each  
Q0 10 gallons burned?  
Q0  
A1 8.  
A2 12.  
A3 6.  
A4 10.  
A5 2.  
Q0
- (3)Q0 A heat engine operates between 600 K and 300 K. In each cycle  
21Q0 it takes 100 J from the hot reservoir, loses 25 J to the cold  
Q0 reservoir, and does 75 J of work. This heat engine violates:  
Q0  
A1 The second law but not the first law of thermodynamics.  
A2 Both, the first law and the second law of thermodynamics.  
A3 The first law but not the second law of the thermodynamics.  
A4 Neither the first law nor the second law.  
A5 Conservation of energy.  
Q0
- (4)Q0 As in figure (1), a charge  $Q$  is fixed at each of two opposite  
22Q0 corners of a square. A charge  $q$  is fixed at each of the other  
Q0 two corners. If the resultant electrical force on  $Q$  is zero,  
Q0 then  $Q$  and  $q$  are related as:  
Q0  
A1  $Q = - 2 \text{ Sqrt}(2) q$   
A2  $Q = - 4 q$   
A3  $Q = q$   
A4  $Q = q^{**2}$   
A5  $Q = - 2 \text{ Sqrt}(2) q^{**2}$   
Q0
- (5)Q0 Consider two identical conductor spheres, A and B.  
22 Q0 Initially, sphere A has a charge of  $-80 Q$  and Sphere B  
Q0 has a charge of  $+20 Q$ . If the spheres touched and then  
Q0 are separated by a distance of 0.3 m, what is the  
Q0 resultant force between them? [Take  $Q = 5.7 \cdot 10^{**(-8)} \text{ C}$ ]  
Q0  
A1 0.3 N.  
A2 0.2 N.  
A3 0.4 N.  
A4 0.6 N.  
A5 0.9 N.  
Q0
- (6)Q0 A particle, of mass  $m$  and charge  $q$ , is released from rest  
23 Q0 at point A in a uniform electric field, see figure (2).  
Q0 The kinetic energy, due to the electric field, it attains  
Q0 after moving a distance  $y$  is:  
Q0

- A1  $q \cdot E \cdot y$ .  
 A2  $m \cdot q \cdot E \cdot y$ .  
 A3  $q \cdot E \cdot y / 2$ .  
 A4  $q \cdot E \cdot y^2$ .  
 A5  $E \cdot y$ .  
 Q0
- 7 Q0 Which of the following statements are CORRECT:  
 Q0
- 23 Q0 1. Electric charge is quantized.  
 Q0 2. The potential at the center of a charged conductor is zero.  
 Q0 ->  
 Q0 3. If  $E = 0$  at a point P then V must be zero at P.  
 Q0 4. The electric field inside a charged conductor is zero.  
 Q0 ->  
 Q0 5. If  $V = 0$  at a point P then E must be zero at P.  
 Q0
- A1 1 and 4.  
 A2 2 and 4.  
 A3 1, 2 and 3.  
 A4 1, 2, and 5.  
 A5 3 and 5.  
 Q0
- (8) Q0 A long nonconducting cylinder (radius 12.0 cm) has a charge  
 23 Q0 of uniform density  $5.0 \text{ nano-C/m}^3$  distributed through  
 Q0 its column. Determine the magnitude of the electric field  
 Q0 5.0 cm from the axis of the cylinder. [See figure (3)].  
 Q0
- A1 14 N/C.  
 A2 22 N/C.  
 A3 31 N/C.  
 A4 34 N/C.  
 A5 4 N/C.  
 Q0
- (9) Q0 In figure (4), what is the magnitude of the electric field  
 23 Q0 at point P, center of the equilateral triangle?  
 Q0 [take  $d = 2 \text{ m}$ ,  $q = 10^{(-9)} \text{ C}$ ]  
 Q0
- A1 Zero.  
 A2 11 N/C.  
 A3 9 N/C.  
 A4 22 N/C.  
 A5 18 N/C.  
 Q0
- 10 Q0 For the two infinite dielectric sheets, see figure (5), find  
 24 Q0 the magnitude of the electric field at a point P. Consider  
 Q0 that each sheet has a positive surface charge density of  
 Q0  $10^{(2)} \text{ C/m}^2$ .  
 Q0
- A1  $1.1 \cdot 10^{(13)} \text{ N/C}$ .  
 A2  $2.2 \cdot 10^{(13)} \text{ N/C}$ .  
 A3  $0.5 \cdot 10^{(13)} \text{ N/C}$ .  
 A4  $1.7 \cdot 10^{(13)} \text{ N/C}$ .  
 A5 Zero.  
 Q0
- 11 Q0 A point charge of  $+4.0 \text{ micro-C}$  lies at the center of a hollow  
 24 Q0 spherical conducting shell that has a net charge of  $-13.0$   
 Q0  $\text{micro-C}$ . If the inner radius of the shell is 2.0 cm and the  
 Q0 outer radius is 3.0 cm, then the ratio between the charge  
 Q0 density on the inner surface to the charge density on the  
 Q0 outer surface is:  
 Q0

A1 1 : 1.  
 A2 -1 : 1.  
 A3 1 : 2.  
 A4 -1 : 2.  
 A5 4 : 1.  
 Q0  
 12 Q0 A cube, as in figure (6), has an edge length of 3.00 m in a  
 24 Q0 region of a uniform electric field given by the equation:  
 Q0  

$$\vec{E} = (-5.00 \hat{j} + 6.00 \hat{k}) \text{ N/C},$$
 Q0  
 Q0 where  $\hat{i}$ ,  $\hat{j}$ , and  $\hat{k}$  are the unit vectors in the directions of  
 Q0  $x$ ,  $y$ , and  $z$  respectively.  
 Q0 Find the electric flux through the top face (shaded).  
 Q0  
 A1 - 45 N\*m\*\*2/C.  
 A2 45 N\*m\*\*2/C.  
 A3 - 30 N\*m\*\*2/C.  
 A4 30 N\*m\*\*2/C.  
 A5 Zero.  
 Q0  
 13 Q0 The electric potential at points in the  $xy$ -plane is given by:  
 25 Q0  $V = (x^3 - 2xy)$  Volts,  
 Q0 where  $x$  and  $y$  are in meters. The magnitude of the electric  
 Q0 field at the point with the coordinates  $x = 1$  m and  $y = 2$  m is:  
 Q0  
 A1  $\sqrt{5}$  V/m.  
 A2  $\sqrt{8}$  V/m.  
 A3  $\sqrt{2}$  V/m.  
 A4  $\sqrt{3}$  V/m.  
 A5 Zero.  
 Q0  
 14 Q0 In figure (7), what is the net potential at point P due to the  
 25 Q0 four point charges if  $V = 0$  at infinity ? [take  $d = 2$  cm,  
 Q0  $q = 1.0$  micro-C].  
 Q0  
 A1  $9.0 \times 10^5$  V.  
 A2  $-9.0 \times 10^5$  V.  
 A3  $4.6 \times 10^7$  V.  
 A4  $-4.6 \times 10^7$  V.  
 A5 Zero.  
 Q0  
 15 Q0 Which one of the following statements is true?  
 25 Q0  
 Q0  
 A1 The electric field lines are perpendicular to the equipotential  
 A1 surfaces.  
 A2 We have to do work to move a charged particle along an  
 A2 equipotential surface.  
 A3 The electric field is a scalar quantity.  
 A4 The electric potential is a vector quantity.  
 A5 Any two equipotential surfaces are always parallel.  
 Q0  
 16 Q0 Two balls with charges 5.0 micro-C and 10 micro-C are at a  
 25 Q0 distance of 1.0 m from each other. In order to reduce the  
 Q0 distance between them to 0.5 m the amount of work to be  
 Q0 performed is:  
 Q0  
 A1 0.45 J.

- A2 45.0 J.  
A3  $1.2 \times 10^{(-4)}$  J.  
A4  $4.5 \times 10^{(-4)}$  J.  
A5 0.23 J.  
Q0
- 17 Q0 Find the equivalent capacitance of three capacitors  
Q0 connected in series. Assume the three capacitors are:  
26 Q0 C1 = 2.00 micro-F, C2 = 4.00 micro-F and  
Q0 C3 = 8.00 micro-F.  
Q0  
A1 1.14 micro-F.  
A2 0.88 micro-F.  
A3 3.01 micro-F.  
A4 26.1 micro-F.  
A5 15.4 micro-F.  
Q0
- 18 Q0 In figure (8), find the total charge stored by the three  
Q0 capacitors if the potential difference "V" is 10.0 volts.  
26 Q0 Assume C1 = 10.0 micro-F, C2 = 5.00 micro-F and  
Q0 C3 = 4.00 micro-F.  
Q0  
A1 31.6 micro-C.  
A2 22.1 micro-C.  
A3 61.3 micro-C.  
A4 26.1 micro-C.  
A5 63.4 micro-C.  
Q0
- 19 Q0 An air filled parallel-plate capacitor has a capacitance of  
26 Q0  $1.00 \times 10^{(-12)}$  F. The plate separation is then doubled and a  
Q0 wax dielectric is inserted, completely filling the space  
Q0 between the plates. As a result the, capacitance becomes  
Q0  $2.00 \times 10^{(-12)}$  F. The dielectric constant of the wax is:  
Q0  
A1 4.00.  
A2 0.25.  
A3 2.00.  
A4 0.50.  
A5 8.00.  
Q0
- 20 Q0 Two capacitors, C1 and C2, are connected in series and a  
26 Q0 potential difference is applied to the combination. If the  
Q0 capacitor that is equivalent to the combination has the same  
Q0 potential difference, then the charge on the equivalent  
Q0 capacitors is the same as:  
Q0  
A1 The charge on C1 or C2.  
A2 The sum of the charges on C1 and C2.  
A3 The difference of the charges on C1 and C2.  
A4 The product of the charges on C1 and C2.  
A5 The ratio of the charges on C1 and C2.

{ SHAPE \\* MERGEFORMAT }

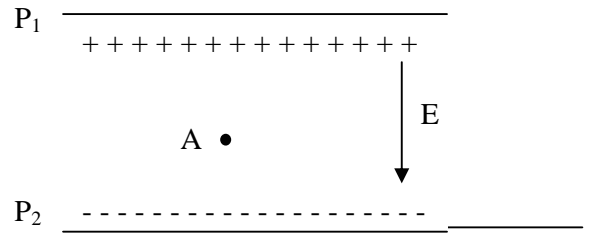


Figure (2)

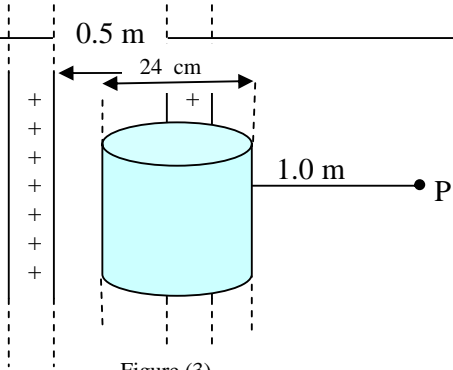


Figure (3)

Figure (5)

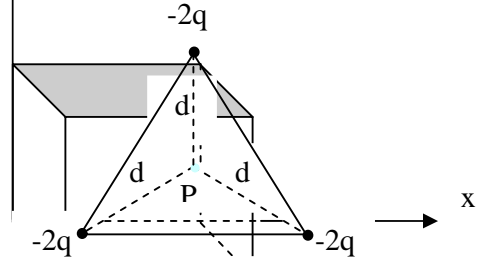


Figure (4)

Figure (6)

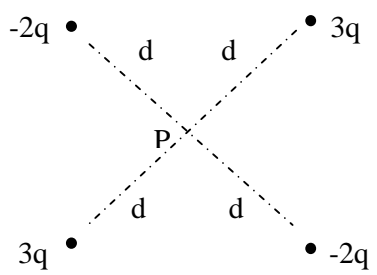


Figure (7)

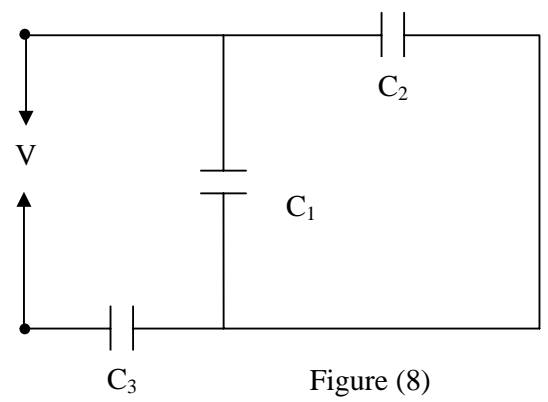


Figure (8)

