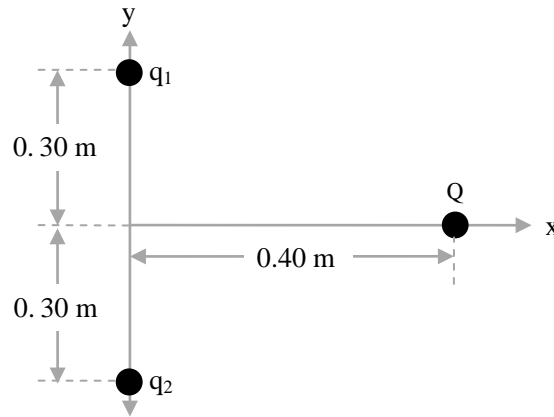
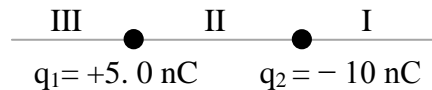


Q1. Three charges, $q_1 = q_2 = 2.0 \mu\text{C}$ and $Q = 4.0 \mu\text{C}$, are fixed in their places as shown in **Figure 1**. Find the net electrostatic force on Q due to q_1 and q_2 . [\hat{i} and \hat{j} are the unit vectors in the direction of x and y , respectively]



- A) $(0.46 \hat{i}) \text{ N}$
- B) $(0.17 \hat{i}) \text{ N}$
- C) $(0.46 \hat{i} + 0.17 \hat{j}) \text{ N}$
- D) $(0.17 \hat{i} - 0.46 \hat{j}) \text{ N}$
- E) $(0.17 \hat{i} + 0.32 \hat{j}) \text{ N}$

Q2. Two charges, $q_1 = +5.0 \text{ nC}$ and $q_2 = -10 \text{ nC}$, are shown in **Figure 2**. In which region (or regions) can the net electric field due to the two charges be zero?



- A) III
- B) II
- C) I
- D) I and II
- E) II and III

Q3. Two point charges, $q_1 = -4.5 \text{ nC}$ and $q_2 = +4.5 \text{ nC}$, are separated by 3.1 mm and forming an electric dipole. The charges are in a uniform electric field whose direction makes an angle of 37° with the line connecting the charges. Find the magnitude of this electric field, in N/C , if the torque exerted on the dipole has magnitude of $7.2 \times 10^{-9} \text{ N.m}$.

- A) 8.6×10^2
- B) 5.6×10^3
- C) 2.3×10^4
- D) 9.9×10^3
- E) 4.5×10^2

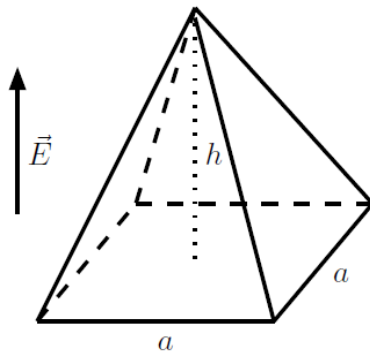
Q4. An electron is released from rest in a uniform electric field. The electron accelerates vertically upward, travelling 4.50 m in the first 3.00 micro second after it is released. What are the magnitude and direction of the electric field? [Note: Neglect the gravitational force]

- A) 5.69 N/C downward
- B) 5.69 N/C upward
- C) 8.24 N/C upward
- D) 8.24 N/C downward
- E) 4.30 N/C downward

Q5. A $2.6 \mu\text{C}$ charge is at the center of a cube 7.0 cm on each side. What is the electric flux, in $\text{kN}\cdot\text{m}^2/\text{C}$, through one face of the cube?

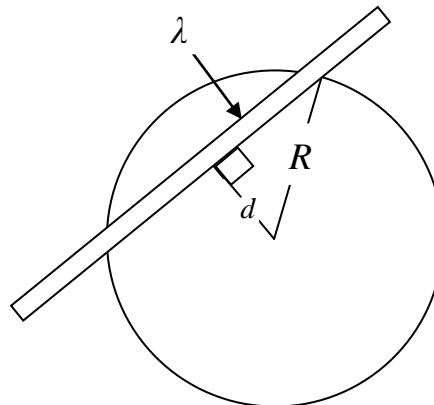
- A) 49
- B) 24
- C) 12
- D) 89
- E) Zero

Q6. **Figure 3** shows a pyramid with horizontal square base, $a = 6.00$ m on each side, and a height, $h = 4.00$ m. The pyramid is placed in an upward vertical electric field of magnitude $E = 52.0$ N/C. If the pyramid does not include any charge inside, calculate the electric flux, in $\text{N}\cdot\text{m}^2/\text{C}$, through its four slanted (inclined) surfaces.



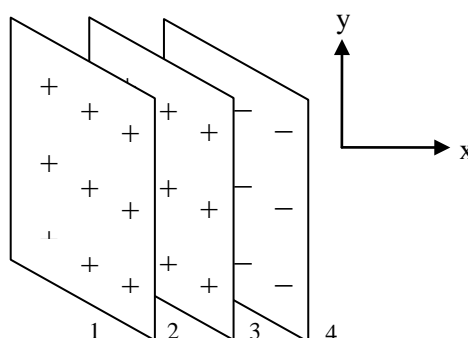
- A) $+1.87 \times 10^3$
- B) -1.87×10^3
- C) $+0.9 \times 10^3$
- D) -0.9×10^3
- E) -3.27×10^3

Q7. **Figure 4** show an infinitely long line of charge having a uniform charge per unit length λ . The line lies at a normal distance d from the center of a sphere of radius R ($d < R$). Determine the total electric flux through the surface of the sphere resulting from this line charge.



- A) $\frac{2\lambda\sqrt{R^2 - d^2}}{\epsilon_0}$
- B) $\frac{4\lambda\sqrt{R^2 - d^2}}{\epsilon_0}$
- C) $\frac{\lambda\sqrt{R^2 - d^2}}{2\epsilon_0}$
- D) $\frac{\lambda\sqrt{R^2 - d^2}}{\epsilon_0}$
- E) $\frac{2\lambda(R^2 - d^2)}{\epsilon_0}$

Q8. **Figure 5** shows sections of three infinitely flat thin insulating charge sheets, each carrying surface charge density of magnitude σ . Find the magnitude of the electric field in region 3.



- A) $3\sigma/2\epsilon_0$
- B) $\sigma/2\epsilon_0$
- C) $3\sigma/\epsilon_0$
- D) σ/ϵ_0
- E) $\sigma/3\epsilon_0$

Q9. An insulating spherical ball of radius 4.0 cm has $-40 \mu\text{C}$ charge uniformly distributed throughout the volume. Find the magnitude and direction of the electric field at a point 2.0 cm from its center.

- A) $1.13 \times 10^8 \text{ N/C}$ towards the center
- B) $1.13 \times 10^8 \text{ N/C}$ away from the center
- C) $0.45 \times 10^8 \text{ N/C}$ towards the center
- D) $0.45 \times 10^8 \text{ N/C}$ away from the center
- E) $3.23 \times 10^8 \text{ N/C}$ towards the center

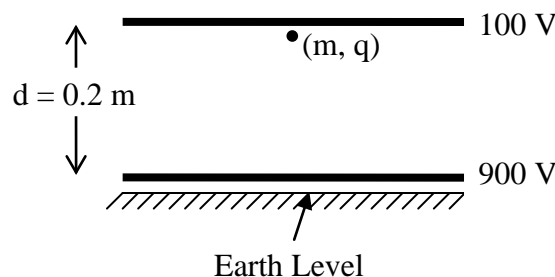
Q10. Two charged particles, q_1 and q_2 , are fixed on the x-axis. q_1 is fixed at the origin and q_2 is fixed on the positive x-axis and at a distance d from the origin. It is found that the electric field is zero at $x = d/3$. Choose the correct answer.

- A) The electric potential is never be zero except at infinity
- B) The electric potential would be zero at $x = -d/2$
- C) The electric potential would be zero at $x = 4d$
- D) The electric potential would be zero at $x = d/2$
- E) The electric potential would be zero at $x = -d/6$

Q11. Four identical charged particles, each of charge $q = 30 \mu\text{C}$, are fixed at the corner of a square of length 10.0 cm. How much work is required, **by an external agent**, to move one of them to infinity?

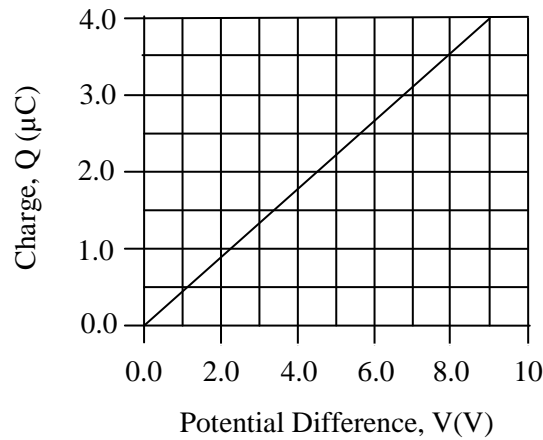
- A) -219 J
- B) $+219 \text{ J}$
- C) -510 J
- D) $+105 \text{ J}$
- E) -105 J

Q12. **Figure 6** shows two parallel plates separated by a vertical distance of $d = 0.2 \text{ m}$. The potentials at the upper and lower plates are 100 V and 900 V, respectively. A particle, of mass $m = 0.1 \text{ kg}$ and charge $q = -500 \mu\text{C}$, was released from rest, downwards, from the upper plate. What is the kinetic energy of the particle when it reaches the lower plate?



- A) 0.6 J
- B) 1.5 J
- C) 0.2 J
- D) 3.1 J
- E) 0.4 J

Q13. The graph (**Figure 7**) shows how the charge of a capacitor varies with the potential difference across it. Use the graph to find the energy stored in the capacitor when the potential difference across it is 12 V.

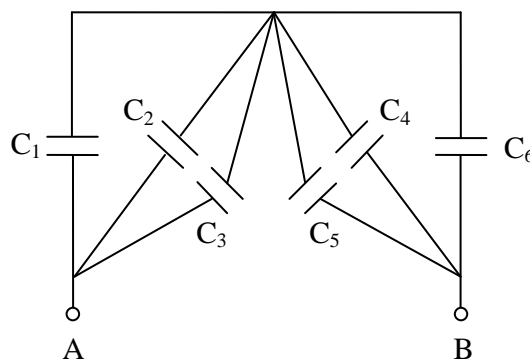


- A) 32 μJ
- B) 63 μJ
- C) 17 μJ
- D) 23 μJ
- E) 48 μJ

Q14. Two capacitors, C_1 and C_2 are connected in series to a 40 V power supply. If the capacitance of $C_1 = 35 \text{ nF}$, and of $C_2 = 85 \text{ nF}$, find the voltage across C_1 .

- A) 28 V
- B) 12 V
- C) 16 V
- D) 40 V
- E) 24 V

Q15. **Figure 8** shows 6 identical capacitors, each with a capacitance of $1.0 \mu\text{F}$. Find the equivalent capacitance C_{eq} between points A and B.



- A) 1.5 μF
- B) 4.0 μF
- C) 3.0 μF
- D) 2.5 μF
- E) 9.0 μF

Q16. An air-filled parallel plate capacitor has a capacitance of $5.0 \mu\text{F}$ and a plate area of 60 cm^2 . What is the energy density stored, in J/m^3 , between the plates if the potential difference across them is 8.0 V ?

- A) 2.5×10^9
- B) 5.0×10^5
- C) 1.2×10^6
- D) 1.6×10^6
- E) 8.9×10^5

Q17. An air-filled parallel plate capacitor with a plate area of 12 cm^2 and a separation of 1.5 mm is connected to a battery. What happens if the gap is filled completely with mica of a dielectric constant 4.0 while the battery is connected?

- A) The energy stored in the capacitor increases.
- B) The energy stored in the capacitor decreases.
- C) The energy stored in the capacitor remains the same.
- D) The voltage across the capacitor increases.
- E) The voltage across the capacitor decreases.

Q18. At what temperature will aluminum have a resistivity that is three times the resistivity that of copper has at $20 \text{ }^\circ\text{C}$? At $20 \text{ }^\circ\text{C}$, the resistivity of aluminum is $2.75 \times 10^{-8} \Omega \cdot \text{m}$ and the resistivity of copper is $1.69 \times 10^{-8} \Omega \cdot \text{m}$. The temperature coefficient of aluminum $\alpha_{\text{Al}} = 4.4 \times 10^{-3} \text{ K}^{-1}$.

- A) $212 \text{ }^\circ\text{C}$
- B) $250 \text{ }^\circ\text{C}$
- C) $130 \text{ }^\circ\text{C}$
- D) $600 \text{ }^\circ\text{C}$
- E) $420 \text{ }^\circ\text{C}$

Q19. A continuous beam of electrons, of current 125 mA , is incident on a target. How many electrons strike the target in a period of 23.0 s ?

- A) 1.80×10^{19}
- B) 1.37×10^{19}
- C) 7.21×10^{19}
- D) 2.16×10^{19}
- E) 1.56×10^{19}

Q20. A light bulb, has a resistance of 15Ω , is connected between the terminals of a 120 V source. **If the temperature is not ignored**, which one of the following answers can be the expected output power of the bulb?

- A) 840 W
- B) 950 W
- C) 1000 W
- D) 1800 W
- E) 5000 W

$$F = k \frac{q_1 q_2}{r^2}$$

$$\vec{F} = q\vec{E} = m\vec{a}$$

$$U = -\vec{p} \cdot \vec{E}$$

$$\vec{\tau} = \vec{p} \times \vec{E}$$

$$\Phi = \int_{\text{Surface}} \vec{E} \cdot d\vec{A}$$

$$\Phi_c = \oint \vec{E} \cdot d\vec{A} = \frac{q_{in}}{\epsilon_0}$$

$$E = \frac{\sigma}{2\epsilon_0}$$

$$E = \frac{\sigma}{\epsilon_0}$$

$$E = k \frac{q}{r^2}$$

$$E = k \frac{q}{R^3} r$$

$$E = \frac{2k\lambda}{r}$$

$$\Delta V = V_B - V_A = -\int_A^B \vec{E} \cdot d\vec{S} = \frac{\Delta U}{q_0}$$

$$V = k \frac{q}{r}, \quad V = \sum_{i=1}^N \frac{kq_i}{r_i}$$

$$E_x = -\frac{\partial V}{\partial x}, \quad E_y = -\frac{\partial V}{\partial y}, \quad E_z = -\frac{\partial V}{\partial z}$$

$$U = k \frac{q_1 q_2}{r_{12}}$$

$$\Delta U = -W$$

$$C = \frac{q}{V}$$

$$C = \kappa C_{air}$$

$$C = \frac{\epsilon_0 A}{d} \quad (\text{for parallel plate capacitor})$$

$$C = 2\pi\epsilon_0 \frac{L}{\ln\left(\frac{b}{a}\right)} \quad (\text{for cylindrical capacitor})$$

$$C = 4\pi\epsilon_0 \left(\frac{ab}{b-a}\right) \quad (\text{for spherical capacitor})$$

$$C = 4\pi\epsilon_0 R$$

$$U = \frac{1}{2} CV^2$$

$$u = \frac{1}{2} \epsilon_0 E^2$$

$$I = \frac{dQ}{dt} = JA$$

$$R = \frac{V}{I} = \rho \frac{L}{A}$$

$$J = nev_d$$

$$J = \sigma E$$

$$R = R_0 [1 + \alpha(T - T_0)]$$

$$\rho = \rho_0 [1 + \alpha(T - T_0)]$$

$$P = IV$$

$$v = v_0 + at$$

$$x - x_0 = v_0 t + \frac{1}{2} a t^2$$

$$v^2 = v_0^2 + 2 a (x - x_0)$$

Constants:

$$k = 9.00 \times 10^9 \text{ N}\cdot\text{m}^2/\text{C}^2$$

$$\epsilon_0 = 8.85 \times 10^{-12} \text{ C}^2/\text{N}\cdot\text{m}^2$$

$$e = 1.60 \times 10^{-19} \text{ C}$$

$$m_e = 9.11 \times 10^{-31} \text{ kg}$$

$$m_p = 1.67 \times 10^{-27} \text{ kg}$$

$$g = 9.80 \text{ m/s}^2$$

$$\mu = \text{micro} = 10^{-6}$$

$$n = \text{nano} = 10^{-9}$$

$$p = \text{pico} = 10^{-12}$$