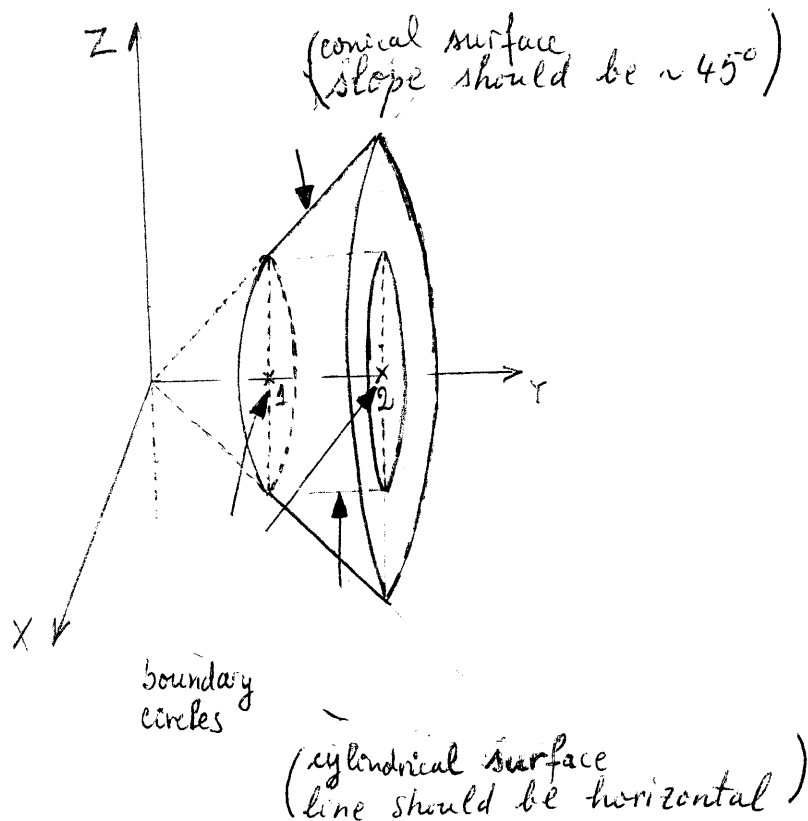


1. Sketch the region between the surface $y = \sqrt{x^2 + z^2}$ and $x^2 + z^2 = 1$ for $1 \leq y \leq 2$.



2. For the function $f(x, y) = \sin(x^2 + y)$, compute the linear approximation of $f(1.02, -1.01)$.

$$f(1, -1) = \sin(0) = 0$$

$$f_x(1, -1) = 2x \cos(x^2 + y) \Big|_{\substack{x=1 \\ y=-1}} = 2$$

$$f_y(1, -1) = \cos(x^2 + y) \Big|_{\substack{x=1 \\ y=-1}} = 1$$

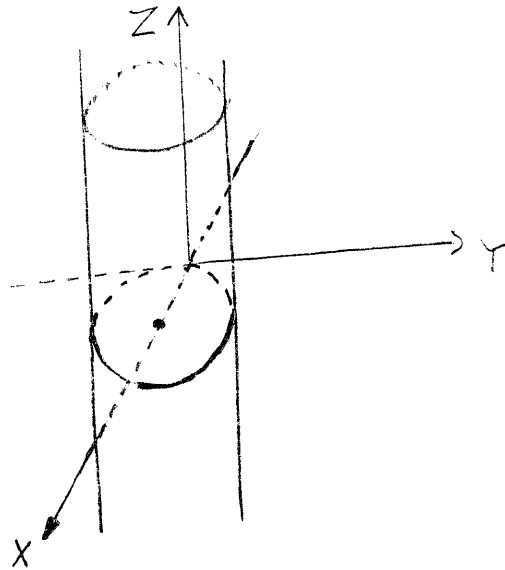
$$dx = 1.02 - 1 = 0.02 \quad dy = -1.01 - (-1) = -0.01$$

$$L(1.02, -1.01) = 0 + 2(0.02) + 1(-0.01) = 0.03$$

3. Transform the equation $\rho \sin \phi - \cos \theta = 0$ from spherical into cylindrical coordinates, and sketch the surface.

$$\begin{cases} \textcircled{1} \rho \sin \phi = r \\ \textcircled{1} \cos \theta = \cos \theta \end{cases} \implies r = \cos \theta$$

It is a cylinder

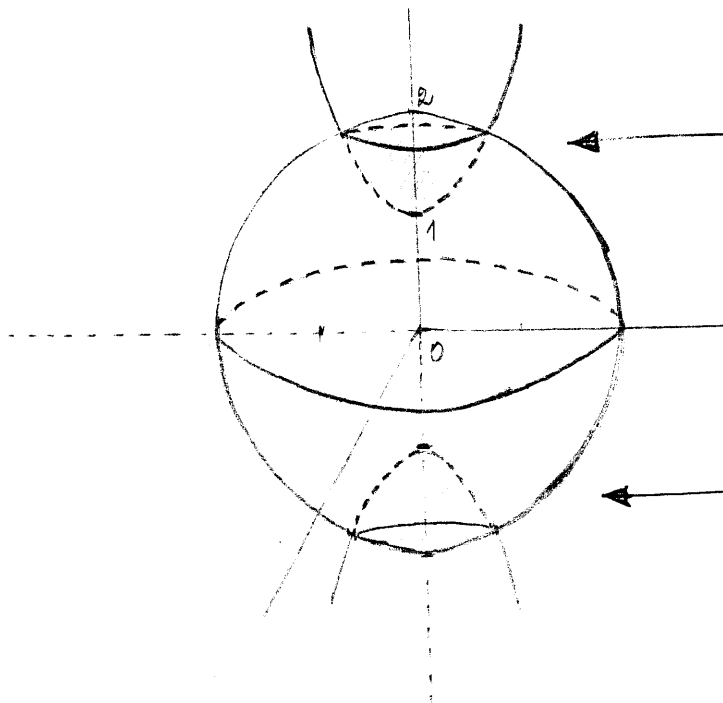


$$\begin{aligned} r^2 &= r \cos \theta \\ x^2 + y^2 &= r \\ x^2 - x + \frac{1}{4} + y^2 &= \frac{1}{4} \\ \left(x - \frac{1}{2}\right)^2 + y^2 &= \left(\frac{1}{2}\right)^2 \end{aligned}$$

4. Name the boundary surfaces, and sketch the solid given in cylindrical coordinates by the inequalities $1 + r^2 \leq z^2 \leq 4 - r^2$.

$$1 + r^2 = z^2 \longrightarrow x^2 + y^2 = z^2 - 1 \quad \text{It is a 2-sheeted hyperboloid}$$

$$4 - r^2 = z^2 \longrightarrow x^2 + y^2 + z^2 = 4 \quad \text{It is a sphere.}$$

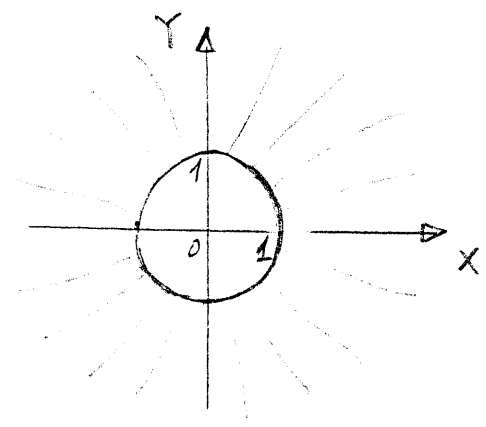


5. Consider the function $f(x, y) = \sqrt{x^2 + y^2} - 1$:

(a) Describe in words and sketch the domain of f .

$$\text{Domain}(f) = \{(x, y) \in \mathbb{R}^2 \mid x^2 + y^2 \geq 1\}$$

Are all the points outside and on the unit circle.

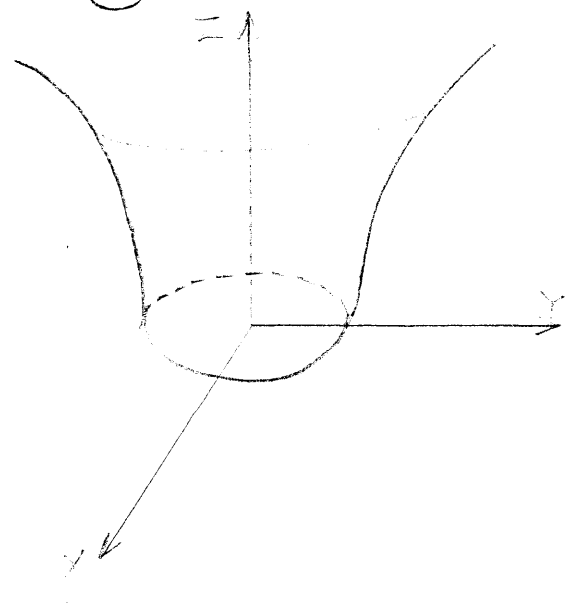


(b) Describe in words and sketch the graph of f .

$$\text{Graph}(f) = \{(x, y, z) \in \mathbb{R}^3 \mid z = \sqrt{x^2 + y^2} - 1\}$$

$$= \{(x, y, z) \in \mathbb{R}^3 \mid z \geq 0, x^2 + y^2 = z^2 + 1\}$$

It is the upper-half of a 1-sheeted hyperboloid.



rawing
all.

6. For the function $f(x, y) = \tan(xy)$, compute the expression $f_y + f_{xy}$.

$$f_y(x, y) = \frac{x}{\cos^2(xy)}$$

$$f_{xy}(x, y) = \frac{1}{\cos^2(xy)} + x \cdot \frac{2 \sin(xy) \cdot y}{\cos^3(xy)}$$

$$f_y + f_{xy} = \frac{x}{\cos^2(xy)} + \frac{1}{\cos^2(xy)} + \frac{2xy \cdot \sin(xy)}{\cos^3(xy)}$$

7. Find $\frac{\partial z}{\partial x}$ and $\frac{\partial z}{\partial y}$ for the function z which is defined implicitly by the equation

$$x - z - \tan^{-1}(yz) = 0.$$

$$f(x, y, z) = x - z - \tan^{-1}(yz)$$

$$\frac{\partial z}{\partial x} = - \frac{f_x(x, y, z)}{f_z(x, y, z)} = - \frac{1}{-1 - \frac{1}{1+y^2z^2} \cdot y} = \frac{1+y^2z^2}{1+y^2z^2+y}$$

$$\frac{\partial z}{\partial y} = - \frac{f_y(x, y, z)}{f_z(x, y, z)} = - \frac{-\frac{1}{1+y^2z^2} \cdot z}{-1 - \frac{1}{1+y^2z^2} \cdot y} = - \frac{z}{1+y^2z^2+y}$$

8. In the following problems: if the limit exists, compute it; if the limit does not exist, prove it.

$$(a) \lim_{(x,y,z) \rightarrow (0,0,0)} \frac{x^2 + y^2 + z^2}{\sqrt{4 + x^2 + y^2 + z^2} - 2}$$

$$\frac{x^2 + y^2 + z^2}{\sqrt{4 + x^2 + y^2 + z^2} - 2} = \sqrt{4 + x^2 + y^2 + z^2} + 2$$

$$\Rightarrow \lim_{(x,y,z) \rightarrow (0,0,0)} \dots = \lim_{(x,y,z) \rightarrow (0,0,0)} \left(\sqrt{4 + x^2 + y^2 + z^2} + 2 \right) = 2 + 2 = 4.$$

$$(b) \lim_{(x,y) \rightarrow (0,0)} \frac{xy^4}{x^2 + 8y^8}$$

Approach $(0,0)$ along $x=0$ (or $y=0$).

$$\lim_{(0,y) \rightarrow (0,0)} \frac{0 \cdot y^4}{0 + 8y^8} = 0$$

Approach $(0,0)$ along $x=y^4$ (or $x = \text{const} \cdot y^4$).

$$\lim_{(y^4, y) \rightarrow (0,0)} \frac{y^4 \cdot y^4}{y^8 + 8y^8} = \frac{1}{9}.$$

Then the limit does not exist.

9. Find the equation of the tangent plane and the normal line to the surface $z = e^{x-y^2}$ at the point $(1, -1, 1)$.

$$\nabla z = \left\langle e^{x-y^2}, -2y e^{x-y^2} \right\rangle$$

$$\nabla z(1, -1) = \langle 1, 2 \rangle$$

The equation of the tangent plane is

$$z - 1 = (x - 1) + 2(y + 1) \implies z = x + 2y + 2$$

The parametric equation of the normal line is:

$$\begin{cases} x = 1 + t \\ y = -1 + 2t \\ z = 1 - t \end{cases}$$

10. Given the surface defined implicitly by the equation $ye^{xz} + 2x + z = 3$, and the point $(1, 1, 0)$ on it, compute the directional derivative of z in the direction $\mathbf{u} = \langle 3, 4 \rangle$.

$$f(x, y, z) = ye^{xz} + 2x + z$$

$$\frac{\partial z}{\partial x} = -\frac{f_x(x, y, z)}{f_z(x, y, z)} = -\frac{yz e^{xz} + 2}{xy e^{xz} + 1} \implies \frac{\partial z}{\partial x}(1, 1) = -\frac{2}{2} = -1$$

$$\frac{\partial z}{\partial y} = -\frac{f_y(x, y, z)}{f_z(x, y, z)} = -\frac{e^{xz}}{xy e^{xz} + 1} \implies \frac{\partial z}{\partial y}(1, 1) = -\frac{1}{2}$$

normalize \mathbf{u} : $\implies \mathbf{v} = \frac{\mathbf{u}}{|\mathbf{u}|} = \left\langle \frac{3}{5}, \frac{4}{5} \right\rangle$

$$D_{\mathbf{v}} z(1, 1) = \frac{3}{5} \cdot \frac{\partial z}{\partial x}(1, 1) + \frac{4}{5} \cdot \frac{\partial z}{\partial y}(1, 1) = \frac{3}{5} \cdot (-1) + \frac{4}{5} \cdot \left(-\frac{1}{2}\right) = -1$$

11. Use the chain rule to find the partial derivative
 where $u = r + s$, $v = s + t$, and $w = t + r$.

$$\frac{\partial Y}{\partial t} \text{ for } Y = w \cdot \tan^{-1}(uv),$$

7

$$\frac{\partial Y}{\partial t}(s, t) = \frac{\partial Y}{\partial u} \cdot \frac{\partial u}{\partial t} + \frac{\partial Y}{\partial v} \cdot \frac{\partial v}{\partial t} + \frac{\partial Y}{\partial w} \cdot \frac{\partial w}{\partial t}$$

$$= \frac{wv}{1+u^2v^2} \cdot 0 + \frac{wu}{1+u^2v^2} \cdot 1 + \tan^{-1}(uv) \cdot 1$$

$$\left. \begin{array}{l} u = r+s \\ v = s+t \\ w = t+r \end{array} \right\}$$

$$= \frac{(t+r)(r+s)}{1+(r+s)^2 \cdot (s+t)^2} + \tan^{-1}((r+s)(s+t))$$

12. Find the direction in which the function $f(x, y) = x^2 + xy + y^2$ increases the most rapidly at $(-1, 1)$. Find the derivative of f in this direction.

$$\nabla f(x, y) = \langle 2x + y, 2y + x \rangle \quad \textcircled{1}$$

$$\nabla f(-1, 1) = \langle -1, 1 \rangle \quad \textcircled{1}$$

$$\text{normalize} \rightarrow u = \left\langle -\frac{1}{\sqrt{2}}, \frac{1}{\sqrt{2}} \right\rangle \quad \textcircled{1}$$

$$D_u f(-1, 1) = \frac{1}{\sqrt{2}} + \frac{1}{\sqrt{2}} = \sqrt{2} \quad \textcircled{1}$$