

Date: September 25, 2007

Term: 071

Quiz # 1

SR # \_\_\_\_\_

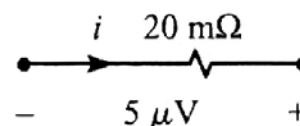
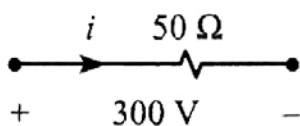
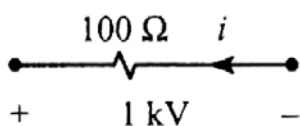
ID # \_\_\_\_\_

Name: \_\_\_\_\_

Sec # 1

1. Knowing that the rate is **5 Halalas** for each **1 Kw-H**, calculate how **long** can you use your **1800-W** A/C for 10 SR?

2. Find the **current** in each of the following cases.



3. Find the **power absorbed** in each of the following cases.

