

2.14

a) KCL $\Rightarrow i_c = i_a + i_b$ (1)

$$V_o = 75 i_b = 300 i_a$$

$$i_b = \frac{300}{75} i_a = 4 i_a \quad (2)$$

substitute (2) into (1) $\Rightarrow i_c = i_a + 4 i_a = 5 i_a$ (3)

KVL $\Rightarrow -200 + V_c + V_o = 0$

$$-200 + 40 i_c + 300 i_a = 0 \quad (4)$$

substitute (3) into (4) $\Rightarrow -200 + 40(5 i_a) + 300 i_a = 0$

$$500 i_a = 200 \Rightarrow \therefore i_a = \frac{200}{500} = 0.4 \text{ A}$$

b) $i_b = 4 i_a = 4(0.4) = 1.6 \text{ A}$

c) $V_o = 300 i_a = 300(0.4) = 120 \text{ V}$

d) $i_c = 5 i_a = 5(0.4) = 2 \text{ A}$

$$\therefore P_{40\Omega} = i_c^2 R = (2)^2 \times 40 = 160 \text{ W}$$

$$P_{300\Omega} = i_a^2 R = (0.4)^2 \times 300 = 48 \text{ W}$$

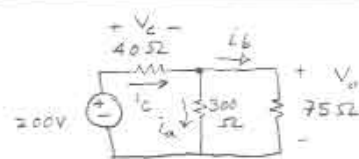
$$P_{75\Omega} = i_b^2 R = (1.6)^2 \times 75 = 192 \text{ W}$$

e) $P_{200\text{V}} = -i V = -i_c \times 200 = -2 \times 200 = -400 \text{ W}$

\therefore Power delivered by the 200V source is

400W:

$$\left[\text{Notice: } \sum P_{\text{disp}} = 160 + 48 + 192 = 400 \text{ W} \right. \\ \left. = \sum P_{\text{gen}} = 400 \text{ W} \right]$$



1/5

2/18

2/5

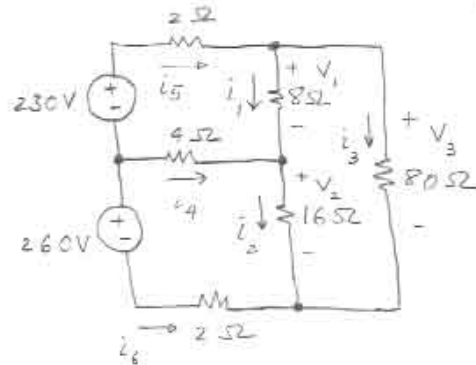
$$a) \text{KVL} \Rightarrow -V_1 + V_3 - V_2 = 0$$

$$\therefore -8i_1 + V_3 - 16i_2 = 0$$

$$-8(20) + V_3 - 16(15) = 0$$

$$\therefore V_3 = 400 \text{ V}$$

$$\therefore i_3 = \frac{400}{80} = 5 \text{ A}$$



$$\text{KCL} \Rightarrow i_5 = i_1 + i_3 = 20 + 5 = 25 \text{ A}$$

$$\text{KCL} \Rightarrow i_6 + i_2 + i_3 = 0 \Rightarrow i_6 + 15 + 5 = 0 \Rightarrow i_6 = -20 \text{ A}$$

$$\therefore P_{230\text{V}} = -iV = -(25)(230) = -5750 \text{ W}$$

$$\therefore P_{260\text{V}} = -iV = (-20)(260) = -5200 \text{ W}$$

$$b) \text{ Total power supplied} = 5750 + 5200 = 10950 \text{ W}$$

$$i_1 + i_4 = i_2 \Rightarrow i_4 + 20 = 15 \Rightarrow i_4 = -5 \text{ A}$$

$$\therefore P_{4\Omega} = (-5)^2(4) = 100 \text{ W}$$

$$P_{2\Omega} = (25)^2(2) = 1250 \text{ W (for upper } 2\Omega)$$

$$P_{2\Omega} = (-20)^2 \times 2 = 800 \text{ W (for the lower } 2\Omega)$$

$$P_{8\Omega} = (20)^2 \times 8 = 3200 \text{ W}$$

$$P_{16\Omega} = (15)^2 \times 16 = 3600 \text{ W}$$

$$P_{80\Omega} = (5)^2 \times 80 = 2000 \text{ W}$$

$$\sum P_{\text{dis}} = 100 + 1250 + 800 + 3200 + 3600 + 2000 = 10950 \text{ W}$$

\therefore Total power supplied = total power dissipated by the resistors.

2.25

a)

$$i_1 = \frac{60}{30} = 2 \text{ A}$$

KVL around outer circuit:

$$-500 + 60i_1 + 60 + 60i_2 + 36i_2 = 0$$

$$-500 + 60(2) + 60 + 96i_2 = 0$$

$$96i_2 = 320 \Rightarrow i_2 = \frac{10}{3} \text{ A}$$

$$\text{KCL} \Rightarrow i_1 = i_2 + i_3 \Rightarrow i_3 = i_1 - i_2 = 2 - \frac{10}{3} = -\frac{4}{3} \text{ A}$$

KVL around upper right circuit \Rightarrow

$$-V_5 + 60i_1 + 60 + 30i_3 = 0$$

$$-V_5 + 60(2) + 60 + 30\left(-\frac{4}{3}\right) = 0 \Rightarrow V_5 = 140 \text{ V}$$

KVL around left circuit $\Rightarrow -500 + V_5 + 180i_4 = 0$

$$\therefore -500 + 140 + 180i_4 = 0 \Rightarrow i_4 = 2 \text{ A}$$

$$\text{KCL} \Rightarrow i_5 + i_3 = i_4 \Rightarrow i_5 + \left(-\frac{4}{3}\right) = 2$$

$$\therefore i_5 = \frac{10}{3} \text{ A} \Rightarrow R = \frac{V_5}{i_5} = \frac{140}{10/3} = 42 \Omega$$

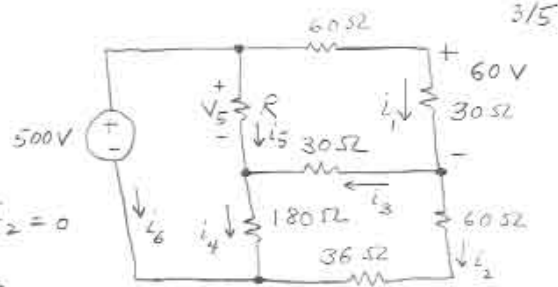
$$\text{b) KCL} \Rightarrow i_6 + i_4 + i_2 = 0 \Rightarrow i_6 + (2) + \frac{10}{3} = 0$$

$$\therefore i_6 = -\frac{16}{3} \text{ A}$$

$$P_{500V} = +LV = \left(-\frac{16}{3}\right)(500) = -2666.7 \text{ W}$$

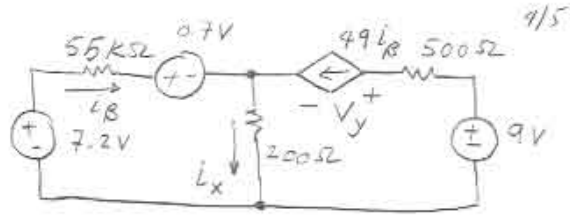
$$= -2.667 \text{ kW}$$

(Actually supplied)



2.29

a) KCL $\Rightarrow i_{\beta} + 49i_{\beta} = i_x$
 $\therefore i_x = 50i_{\beta}$



KVL around left circuit \Rightarrow

$$-7.2 + 55000 i_{\beta} + 0.7 + 200 i_x = 0$$

$$-7.2 + 55000 i_{\beta} + 0.7 + 200(50 i_{\beta}) = 0$$

$$65000 i_{\beta} = 6.5 \Rightarrow i_{\beta} = 0.1 \text{ mA}$$

KVL around right circuit \Rightarrow

$$-200 i_x - V_y - (49 i_{\beta})(500) + 9 = 0$$

$$-200(50 i_{\beta}) - V_y - 24500 i_{\beta} + 9 = 0$$

$$V_y = -10000 i_{\beta} - 24500 i_{\beta} + 9 = -34500 i_{\beta} + 9 = -34500 \times 10^{-4} + 9$$

$$= -3.45 + 9 = +5.55 \text{ V}$$

b) $P_{7.2V} = -iV = -i_{\beta}(7.2) = -10^{-4} \times 7.2 = -0.72 \text{ mW}$

$$P_{55k\Omega} = i^2 R = (10^{-4})^2 (55 \times 10^3) = 55 \times 10^{-5} = 0.55 \text{ mW}$$

$$P_{0.7V} = +iV = i_{\beta}(0.7) = 10^{-4}(0.7) = 0.07 \text{ mW}$$

$$P_{200\Omega} = i_x^2 (200) = (50 i_{\beta})^2 \times 200 = (50 \times 10^{-4})^2 \times 200 = 5 \text{ mW}$$

$$P_{49i_{\beta}} = +iV = (49 i_{\beta})(V_y) = (49 \times 10^{-4})(+5.55) = +27.195 \text{ mW}$$

$$P_{9V} = -iV = -(49 i_{\beta})(9) = -(49 \times 10^{-4})9 = -44.1 \text{ mW}$$

$$P_{500\Omega} = i^2 R = (49 \times 10^{-4})^2 \times 500 = 12.005 \text{ mW}$$

$$\sum P_{\text{diss}} = 0.55 + 0.07 + 5 + 27.195 + 12.005 = 44.82 \text{ mW}, \quad \sum P_{\text{gen}} = 0.72 + 44.1 = 44.82 \text{ mW}$$

2.30

a) KVL around left circuit:

$$-12 + 2i_{\sigma} + 5i_{\Delta} = 0 \quad (1)$$

KVL around middle circuit:

$$-5i_{\Delta} + 8i_{\sigma} + 2i_{\sigma} = 0 \Rightarrow 10i_{\sigma} = 5i_{\Delta} \Rightarrow i_{\Delta} = 2i_{\sigma} \quad (2)$$

$$\text{substitute (2) into (1)} \Rightarrow -12 + 2i_{\sigma} + 10i_{\sigma} = 0$$

$$12i_{\sigma} = 12 \Rightarrow i_{\sigma} = 1 \text{ A}$$

$$\therefore i_{\Delta} = 2i_{\sigma} = 2 \text{ A}$$

$$V_0 = 2i_{\sigma} = 2(1) = 2 \text{ V}$$

b) KCL $\Rightarrow i_x = i_{\sigma} + 8i_{\Delta} = 1 + 8(2) = 17 \text{ A}$

$$\text{KCL} \Rightarrow i_y = i_{\Delta} + i_x = 2 + 17 = 19 \text{ A}$$

$$P_{12V} = -(12)(19) = -228 \text{ W}, \quad P_{8i_{\sigma}} = i_x(8i_{\sigma}) = 17(8 \times 1) = 136 \text{ W}$$

$$P_{2i_{\sigma}} = +(19)(2) = 38 \text{ W}$$

$$P_{5\Omega} = (2)^2(5) = 20 \text{ W}$$

$$P_{2\Omega} = (1)^2(2) = 2 \text{ W}$$

$$P_{8V} = -(8i_{\Delta})(8) = -(8 \times 2)(8) = -128 \text{ W}$$

$$\text{KVL around right circuit} \Rightarrow -V_0 + V - 8 = 0$$

$$\therefore -2 + V - 8 = 0 \Rightarrow V = 10 \text{ V}$$

$$\therefore P_{8i_{\Delta}} = iV = (8i_{\Delta})(10) = (8 \times 2)(10) = 160 \text{ W}$$

$$\sum P_{\text{gen}} = 228 + 128 = 356 \text{ W}$$

$$\sum P_{\text{dis}} = 38 + 20 + 2 + 160 + 136 = 356 \text{ W}$$

$$\therefore \sum P_{\text{gen}} = \sum P_{\text{dis}} = 356 \text{ W}$$

