

Analysis of Clocked Sequential Circuits

COE 202

Digital Logic Design

Dr. Muhamed Mudawar

King Fahd University of Petroleum and Minerals

Presentation Outline

- ❖ Analysis of Clocked Sequential circuits
 - ✧ State and Output Equations
 - ✧ State Table
 - ✧ State Diagram
- ❖ Mealy versus Moore Sequential Circuits
 - ✧ State and Timing Diagrams

Analysis of Clocked Sequential Circuits

Analysis is describing what a given circuit will do

The output of a clocked sequential circuit is determined by

1. Inputs
2. State of the Flip-Flops

Analysis Procedure:

1. Obtain the equations at the inputs of the Flip-Flops
2. Obtain the output equations
3. Fill the state table for all possible input and state values
4. Draw the state diagram

Analysis Example

❖ Is this a clocked sequential circuit?

YES!

❖ What type of Memory?

D Flip-Flops

❖ How many state variables?

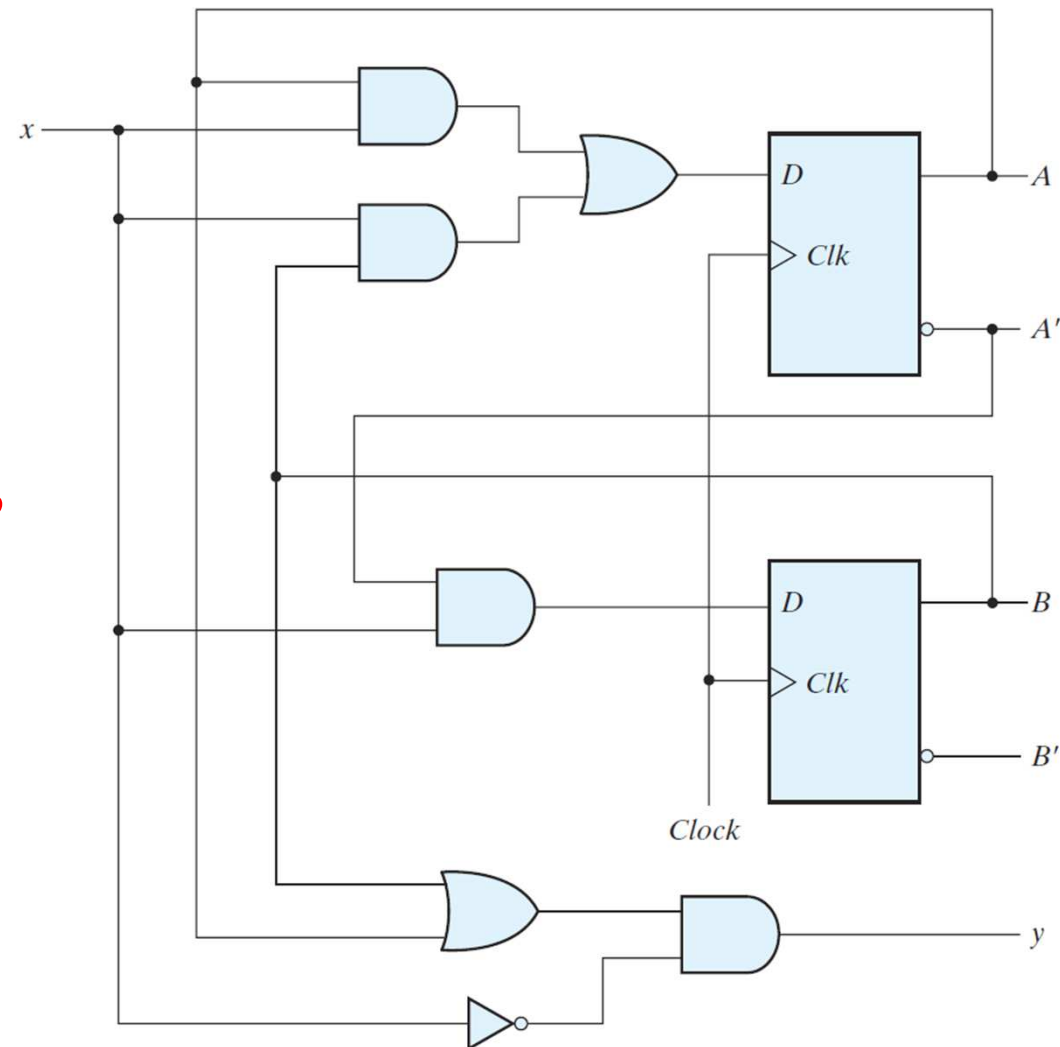
Two state variables: A and B

❖ What are the Inputs?

One Input: x

❖ What are the Outputs?

One Output: y



Flip-Flop Input Equations

- ❖ What are the equations on the D inputs of the flip-flops?

$$D_A = A x + B x$$

$$D_B = A' x$$

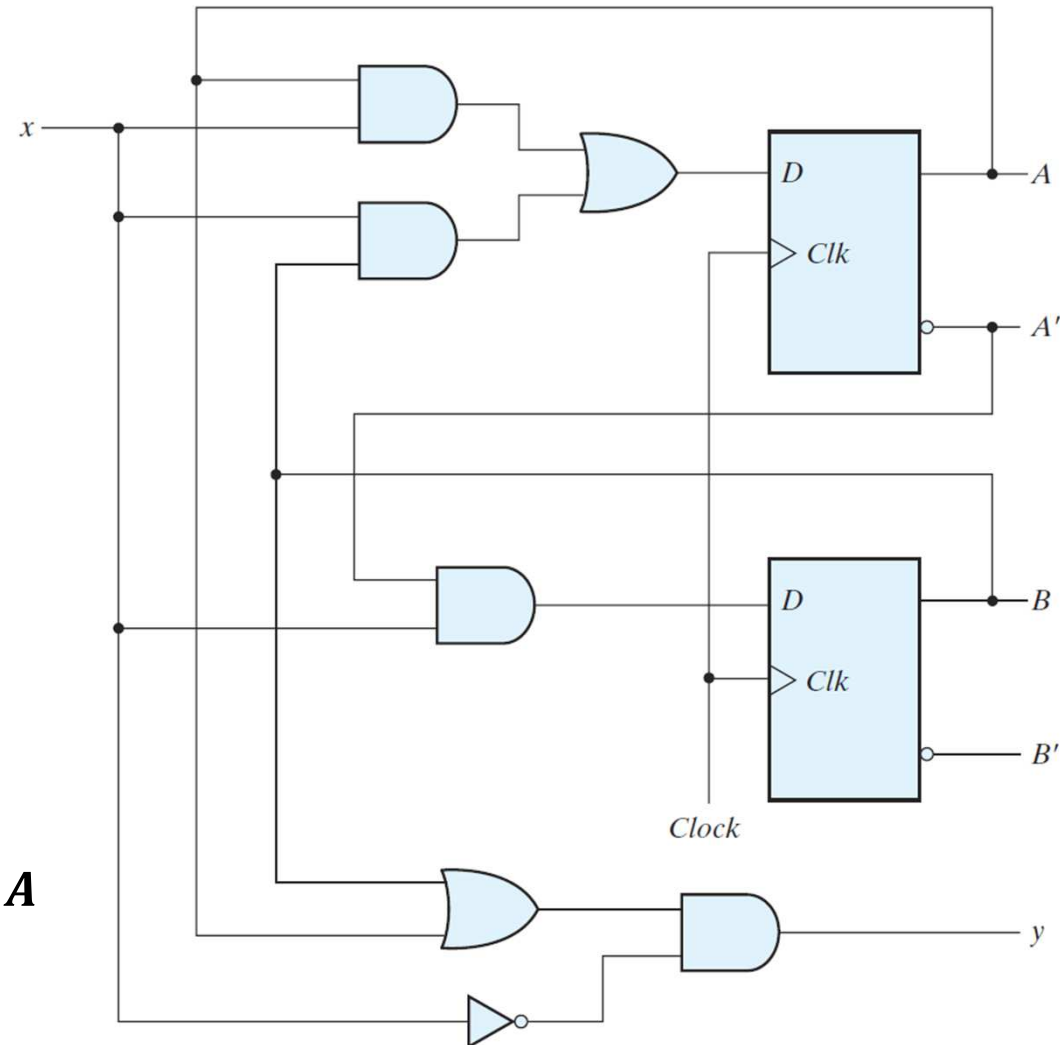
- ❖ A and B are the **current state**

$$A(t) = A, \quad B(t) = B$$

- ❖ D_A and D_B are the **next state**

$$A(t + 1) = D_A, \quad B(t + 1) = D_B$$

- ❖ The values of A and B will be D_A and D_B at the next clock edge



Next State and Output Equations

- ❖ The next state equations define the **next state**

At the **inputs** of the Flip-Flops

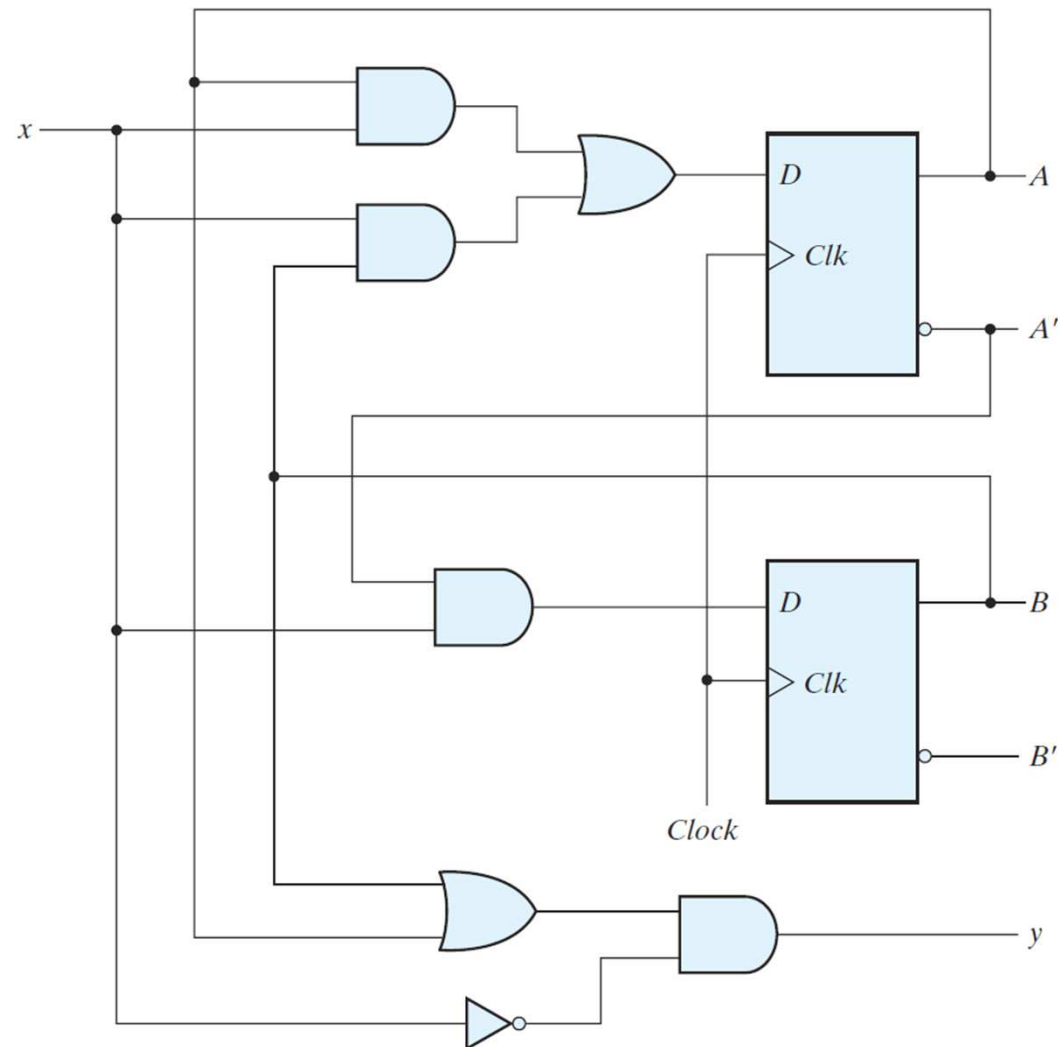
- ❖ Next state equations?

$$A(t + 1) = D_A = A x + B x$$

$$B(t + 1) = D_B = A' x$$

- ❖ There is only one output y
- ❖ What is the output equation?

$$y = (A + B) x'$$



State Table

- ❖ State table shows the Next State and Output in a tabular form
- ❖ Next State Equations: $A(t + 1) = A x + B x$ and $B(t + 1) = A' x$
- ❖ Output Equation: $y = (A + B) x'$

Present State		Input x	Next State		Output y
A	B		A	B	
0	0	0	0	0	0
0	0	1	0	1	0
0	1	0	0	0	1
0	1	1	1	1	0
1	0	0	0	0	1
1	0	1	1	0	0
1	1	0	0	0	1
1	1	1	1	0	0

Another form of the state table

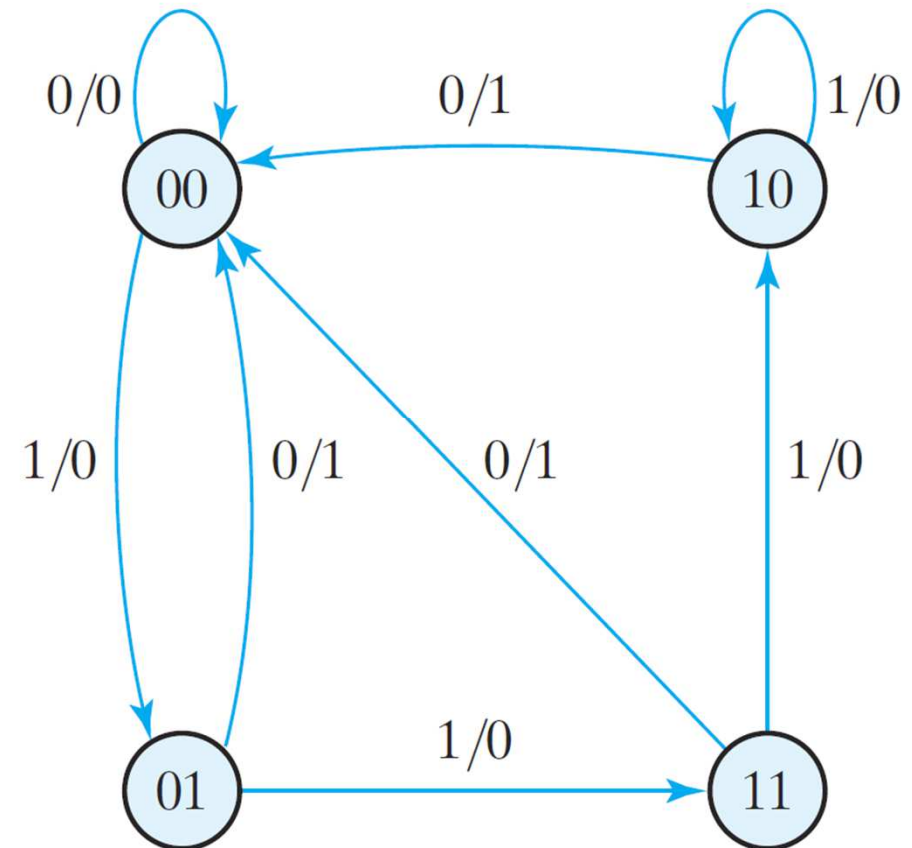
Present State		Next State				Output	
		$x = 0$		$x = 1$		$x = 0$	$x = 1$
A	B	A	B	A	B	y	y
0	0	0	0	0	1	0	0
0	1	0	0	1	1	1	0
1	0	0	0	1	0	1	0
1	1	0	0	1	0	1	0

State Diagram

- ❖ State diagram is a graphical representation of a state table
- ❖ The circles are the states
- ❖ Two state variable \rightarrow Four states (ALL values of A and B)
- ❖ Arcs are the state transitions

Labeled with: Input x / Output y

Present State		Next State				Output	
		$x = 0$		$x = 1$		$x = 0$	$x = 1$
A	B	A	B	A	B	y	y
0	0	0	0	0	1	0	0
0	1	0	0	1	1	1	0
1	0	0	0	1	0	1	0
1	1	0	0	1	0	1	0



Combinational versus Sequential Analysis

Analysis of Combinational Circuits

- ❖ Obtain the Boolean Equations
- ❖ Fill the Truth Table

Output is a function of input only

Analysis of Sequential Circuits

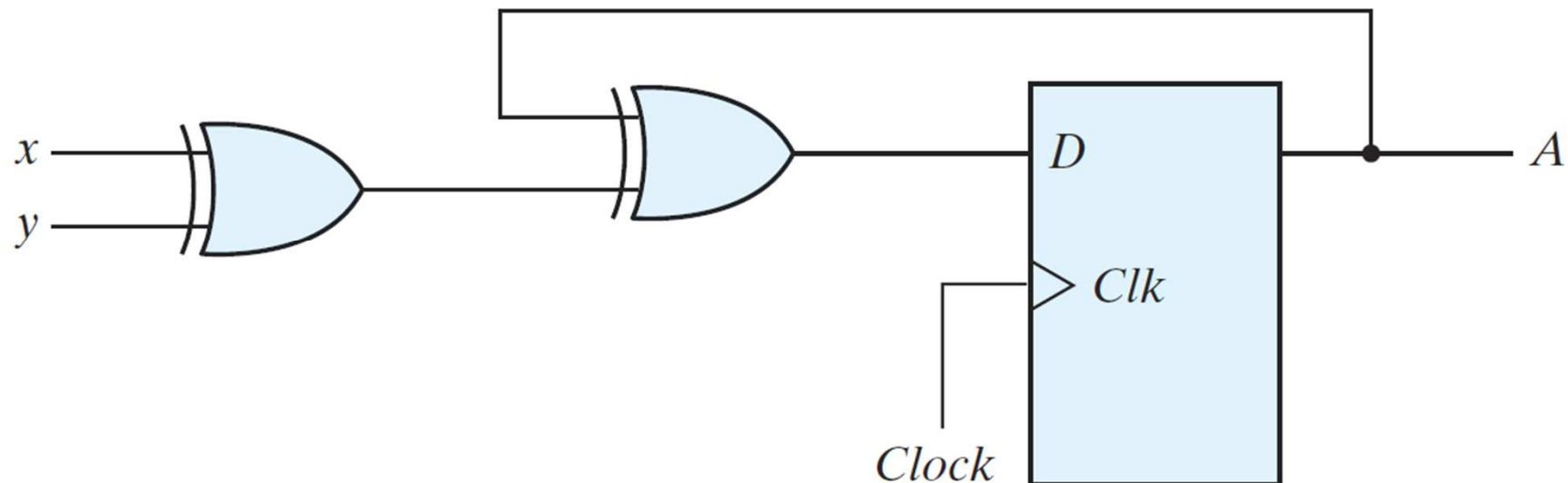
- ❖ Obtain the Next State Equations
- ❖ Obtain the Output Equations
- ❖ Fill the State Table
- ❖ Draw the State Diagram

Next state is a function of input and current state

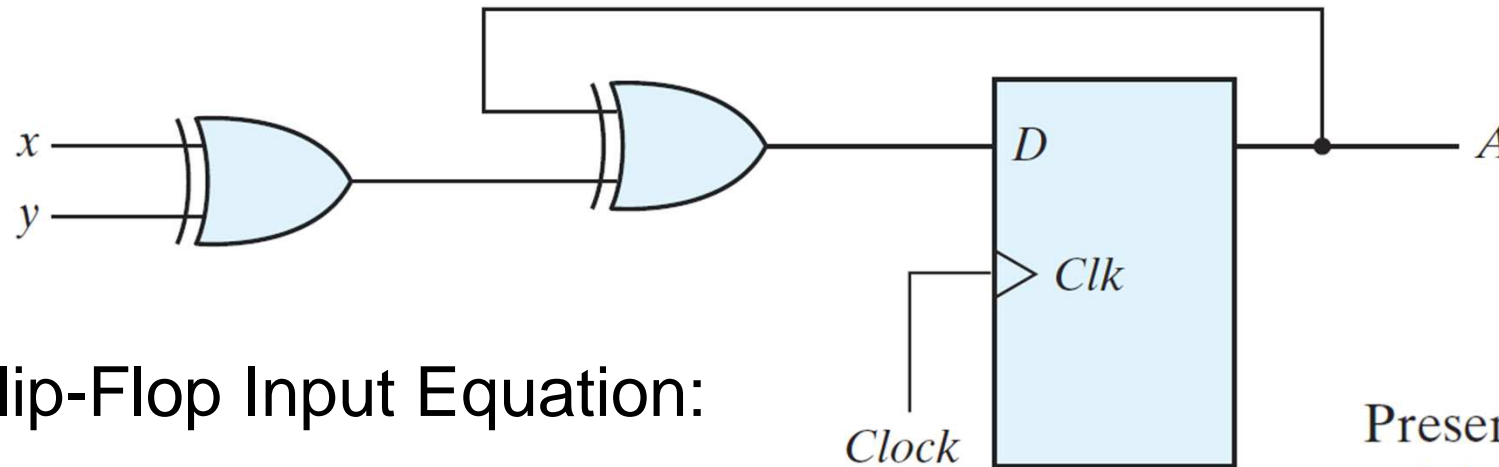
Output is a function of input and current state

Example with Output = Current State

- ❖ Analyze the sequential circuit shown below
- ❖ Two inputs: x and y
- ❖ One state variable A
- ❖ No separate output \rightarrow Output = current state A
- ❖ Obtain the next state equation, state table, and state diagram



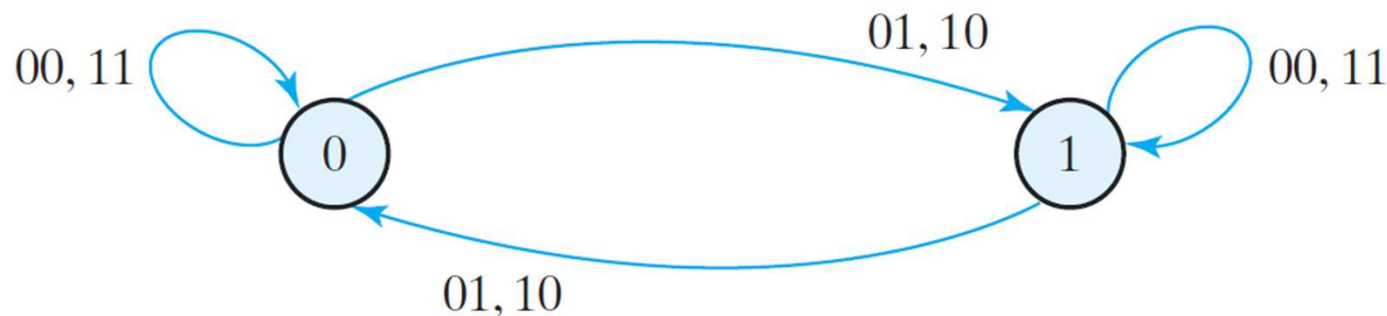
Example with Output = Current State



❖ Flip-Flop Input Equation:

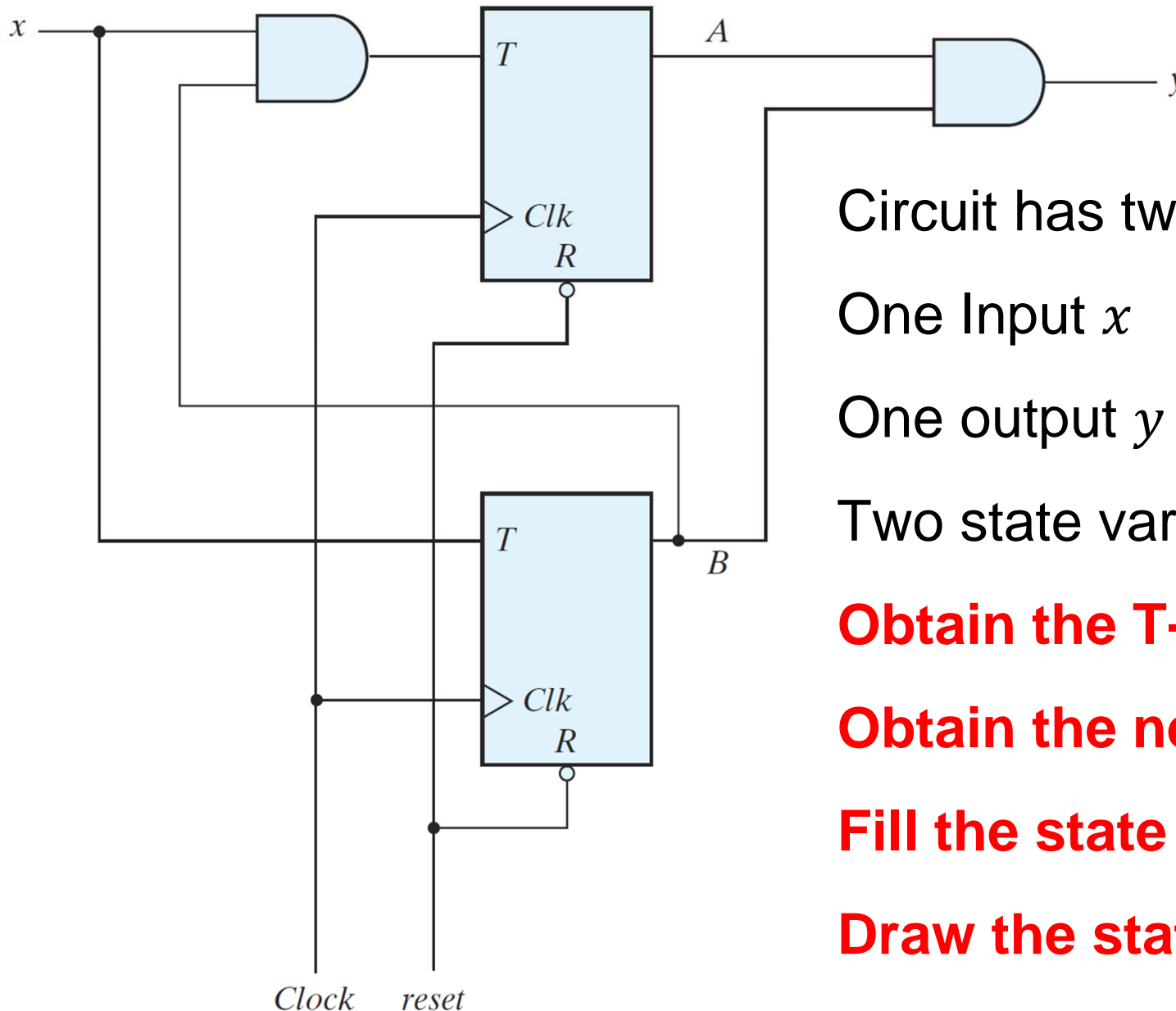
$$D_A = A \oplus x \oplus y$$

❖ Next State Equation: $A(t + 1) = A \oplus x \oplus y$



Present state	Inputs		Next state
A	x	y	A
0	0	0	0
0	0	1	1
0	1	0	1
0	1	1	0
1	0	0	1
1	0	1	0
1	1	0	0
1	1	1	1

Sequential Circuit with T Flip-Flops



Circuit has two T Flip-Flops

One Input x

One output y

Two state variables: A and B

Obtain the T-FF input equations

Obtain the next state equations

Fill the state table

Draw the state diagram

Recall: Flip-Flop Characteristic Equation

❖ For D Flip-Flop: $Q(t + 1) = D$

❖ For T Flip-Flop: $Q(t + 1) = T \oplus Q(t)$

❖ For JK Flip-Flop: $Q(t + 1) = J Q'(t) + K' Q(t)$

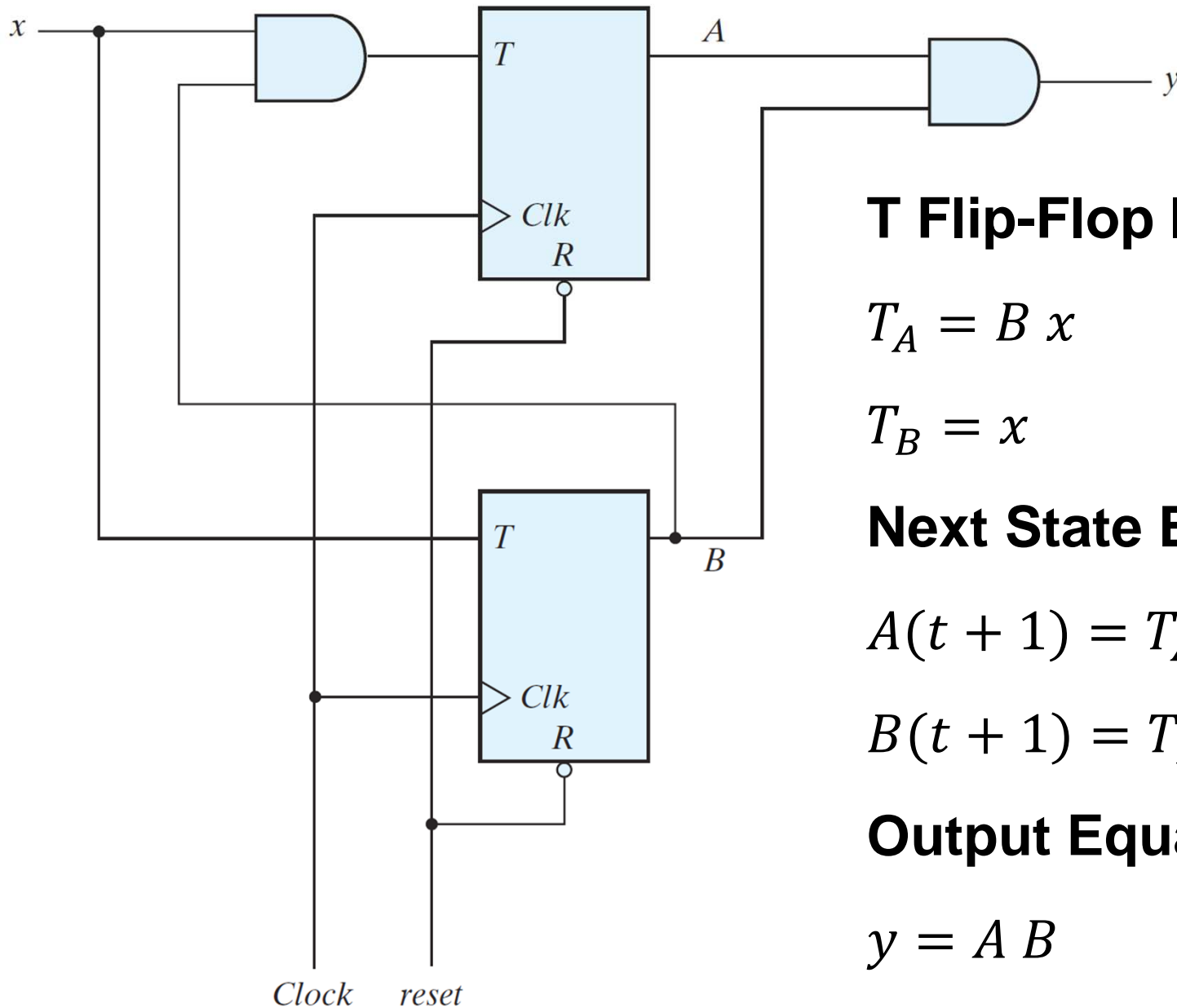
These equations
define the Next State

D Flip-Flop		
D	$Q(t+1)$	
0	0	Reset
1	1	Set

T Flip-Flop		
T	$Q(t+1)$	
0	$Q(t)$	No change
1	$Q'(t)$	Complement

JK Flip-Flop			
J	K	$Q(t+1)$	
0	0	$Q(t)$	No change
0	1	0	Reset
1	0	1	Set
1	1	$Q'(t)$	Complement

Sequential Circuit with T Flip-Flops



T Flip-Flop Input Equations:

$$T_A = B x$$

$$T_B = x$$

Next State Equations:

$$A(t + 1) = T_A \oplus A = (B x) \oplus A$$

$$B(t + 1) = T_B \oplus B = x \oplus B$$

Output Equation:

$$y = A B$$

From Next State Equations to State Table

T Flip-Flop Input Equations:

$$T_A = B x$$

$$T_B = x$$

Next State Equations:

$$A(t + 1) = (B x) \oplus A$$

$$B(t + 1) = x \oplus B$$

Output Equation:

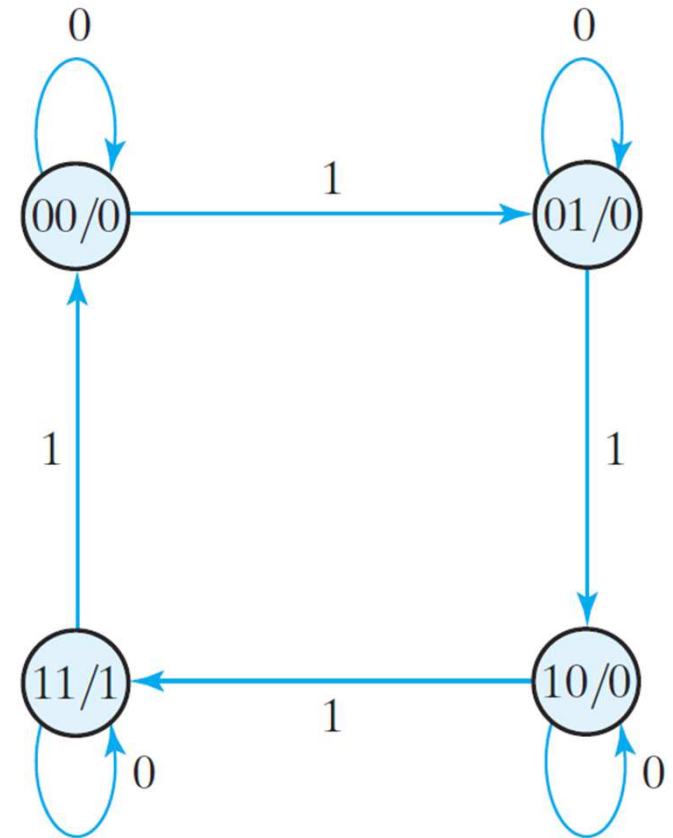
$$y = A B$$

Present State		Input	Next State		Output
A	B		A	B	y
0	0	0	0	0	0
0	0	1	0	1	0
0	1	0	0	1	0
0	1	1	1	0	0
1	0	0	1	0	0
1	0	1	1	1	0
1	1	0	1	1	1
1	1	1	0	0	1

Notice that the output is a function of the present state only.
It does **NOT** depend on the input x

From State Table to State Diagram

Present State		Input x	Next State		Output y
A	B		A	B	
0	0	0	0	0	0
0	0	1	0	1	0
0	1	0	0	1	0
0	1	1	1	0	0
1	0	0	1	0	0
1	0	1	1	1	0
1	1	0	1	1	1
1	1	1	0	0	1



- ❖ Four States: $AB = 00, 01, 10, 11$ (drawn as circles)
- ❖ Output Equation: $y = AB$ (does not depend on input x)
- ❖ Output y is shown inside the state circle (AB/y)

Sequential Circuit with a JK Flip-Flops

One Input x and two state variables: A and B (outputs of Flip-Flops)

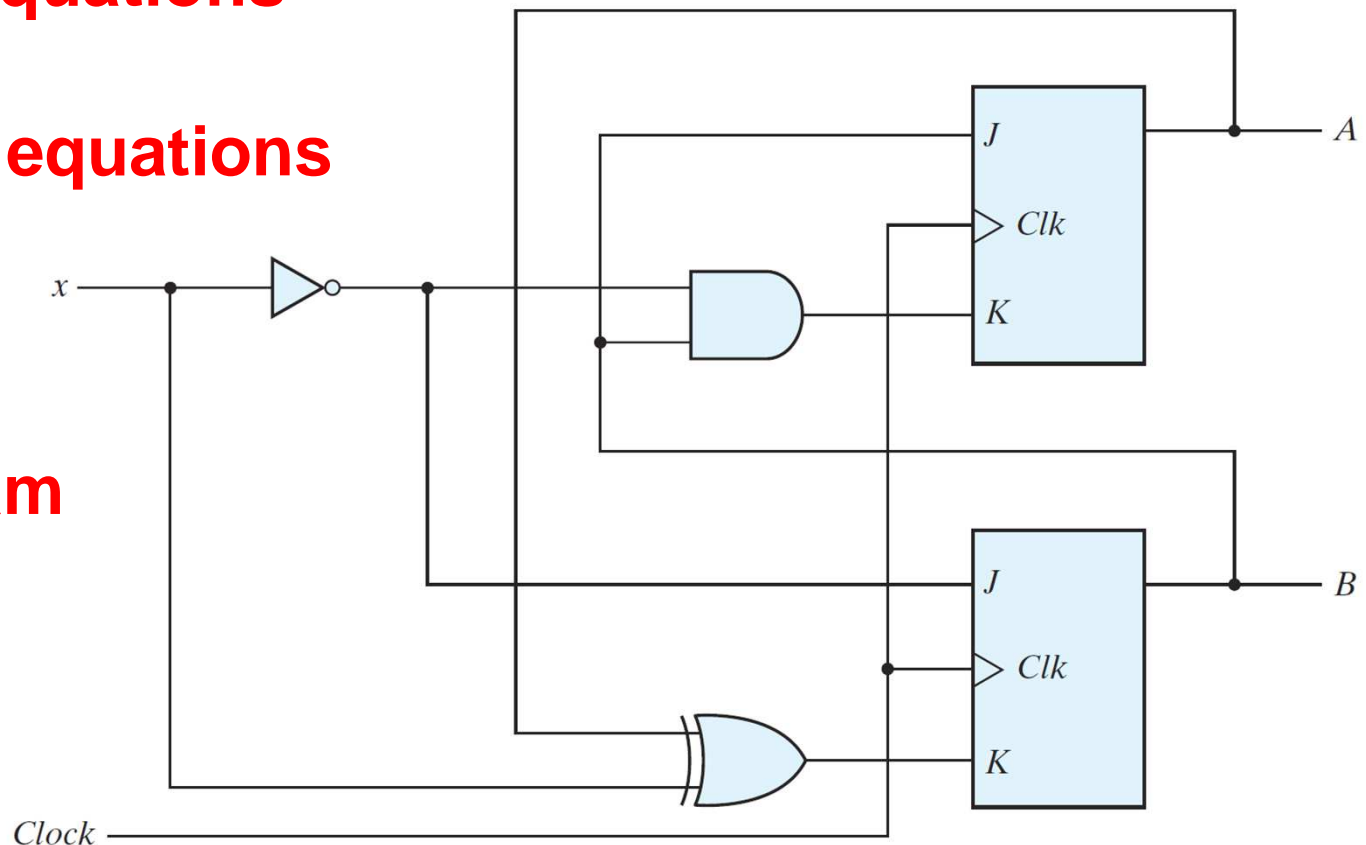
No separate output \rightarrow Output = Current state $A B$

Obtain the JK input equations

Obtain the next state equations

Fill the state table

Draw the state diagram



JK Input and Next State Equations

JK Flip-Flop Input Equations:

$$J_A = B \text{ and } K_A = B x'$$

$$J_B = x' \text{ and } K_B = A \oplus x$$

Next State Equations:

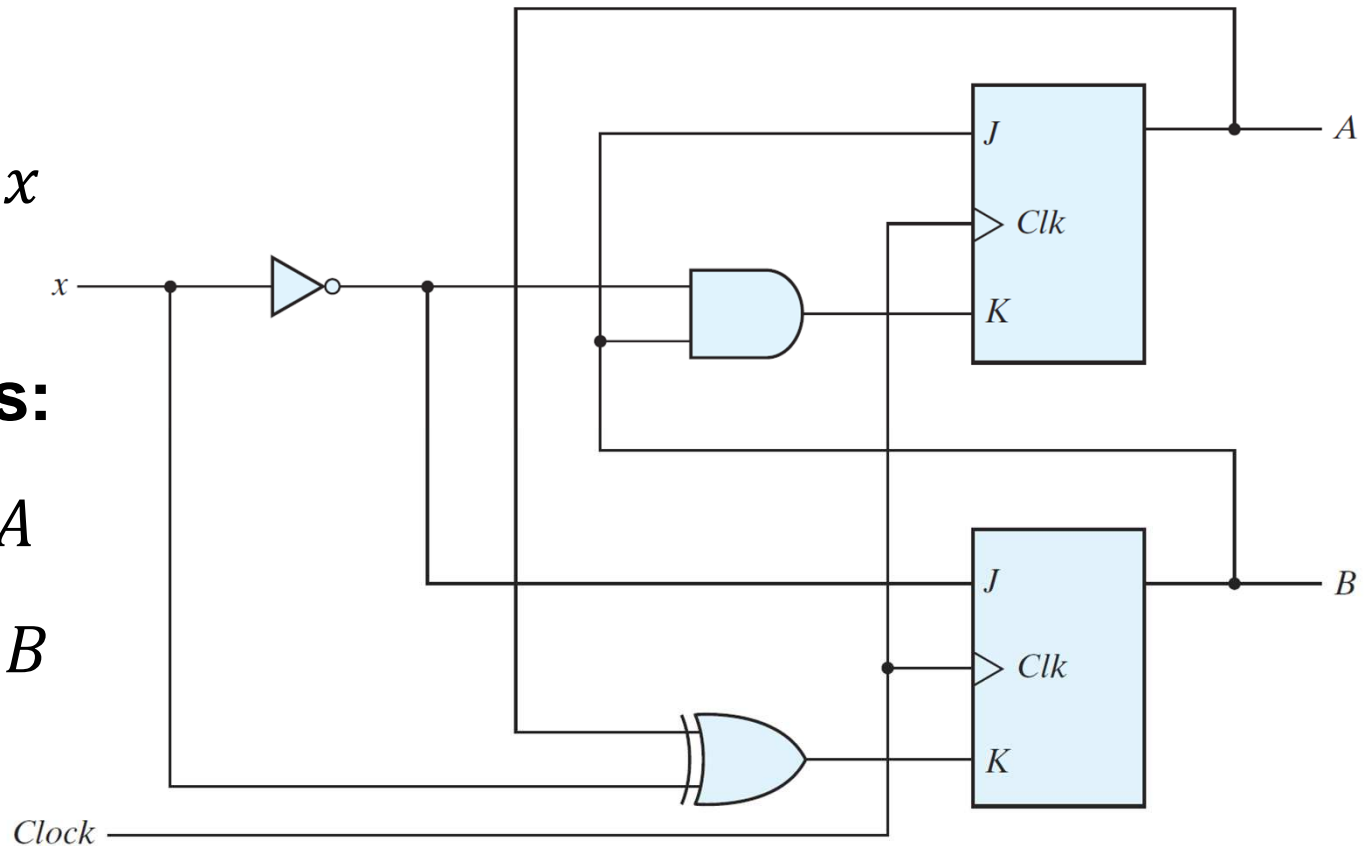
$$A(t + 1) = J_A A' + K_A' A$$

$$B(t + 1) = J_B B' + K_B' B$$

Substituting:

$$A(t + 1) = B A' + (B x')' A = A' B + A B' + A x$$

$$B(t + 1) = x' B' + (A \oplus x)' B = B' x' + A B x + A' B x'$$



From JK Input Equations to State Table

JK Input Equations: $J_A = B$, $K_A = B x'$, $J_B = x'$ and $K_B = A \oplus x$

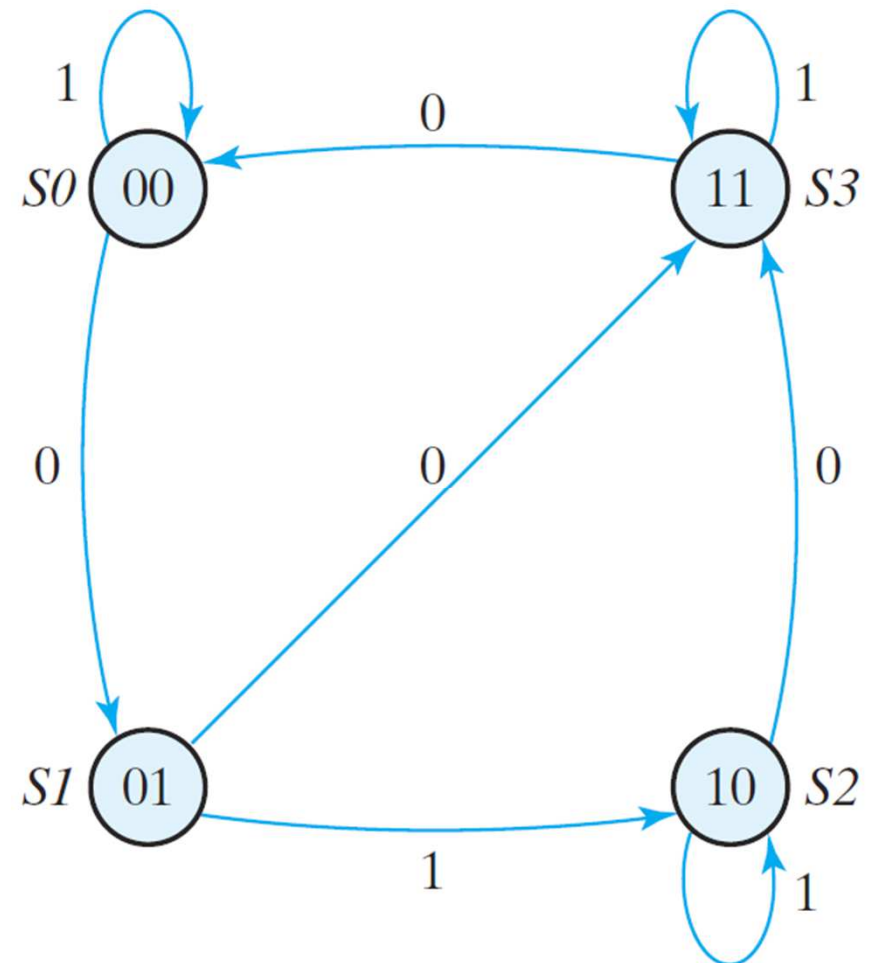
Present State		Input	Next State		Flip-Flop Inputs			
A	B		A	B	J_A	K_A	J_B	K_B
0	0	0	0	1	0	0	1	0
0	0	1	0	0	0	0	0	1
0	1	0	1	1	1	1	1	0
0	1	1	1	0	1	0	0	1
1	0	0	1	1	0	0	1	1
1	0	1	1	0	0	0	0	0
1	1	0	0	0	1	1	1	1
1	1	1	1	1	1	0	0	0

From State Table to State Diagram

Four states: $A B = 00, 01, 10, \text{ and } 11$ (drawn as circles)

Arcs show the input value x on the state transition

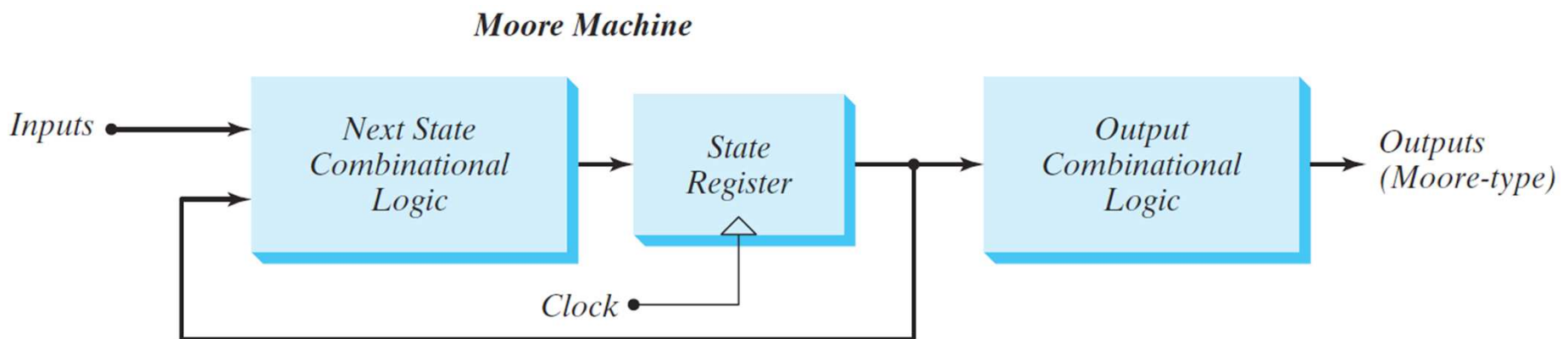
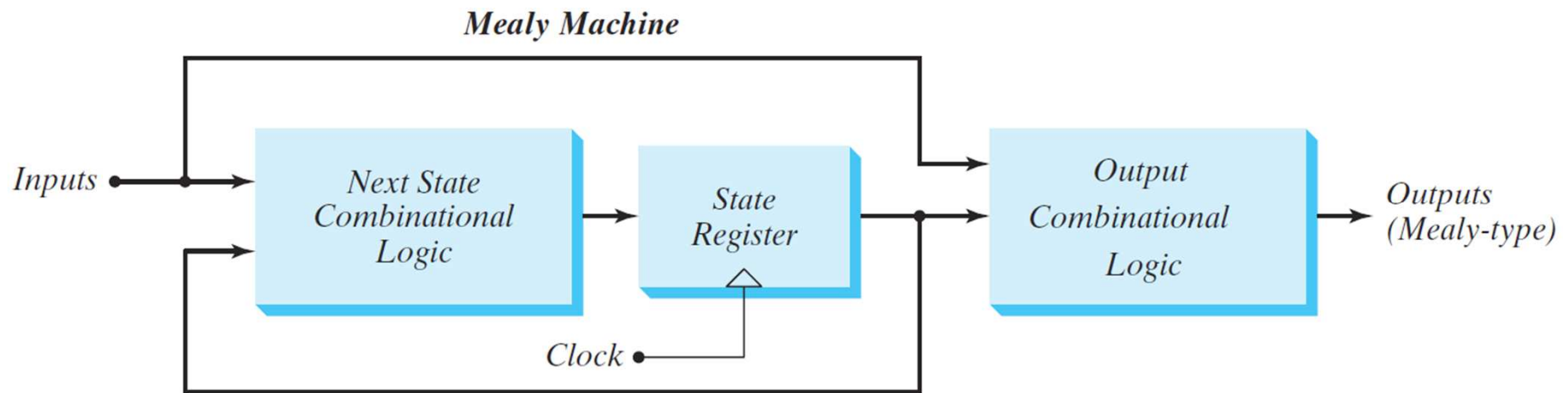
Present State		Input x	Next State	
A	B		A	B
0	0	0	0	1
0	0	1	0	0
0	1	0	1	1
0	1	1	1	0
1	0	0	1	1
1	0	1	1	0
1	1	0	0	0
1	1	1	1	1



Mealy versus Moore Sequential Circuits

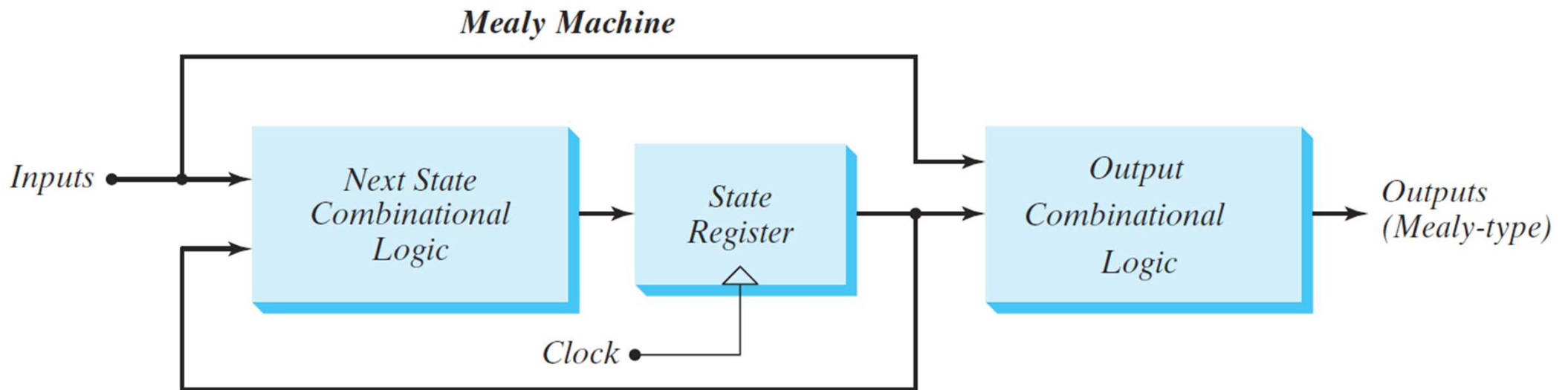
There are two ways to design a clocked sequential circuit:

- 1. Mealy Machine:** Outputs depend on present state and inputs
- 2. Moore Machine:** Outputs depend on present state only



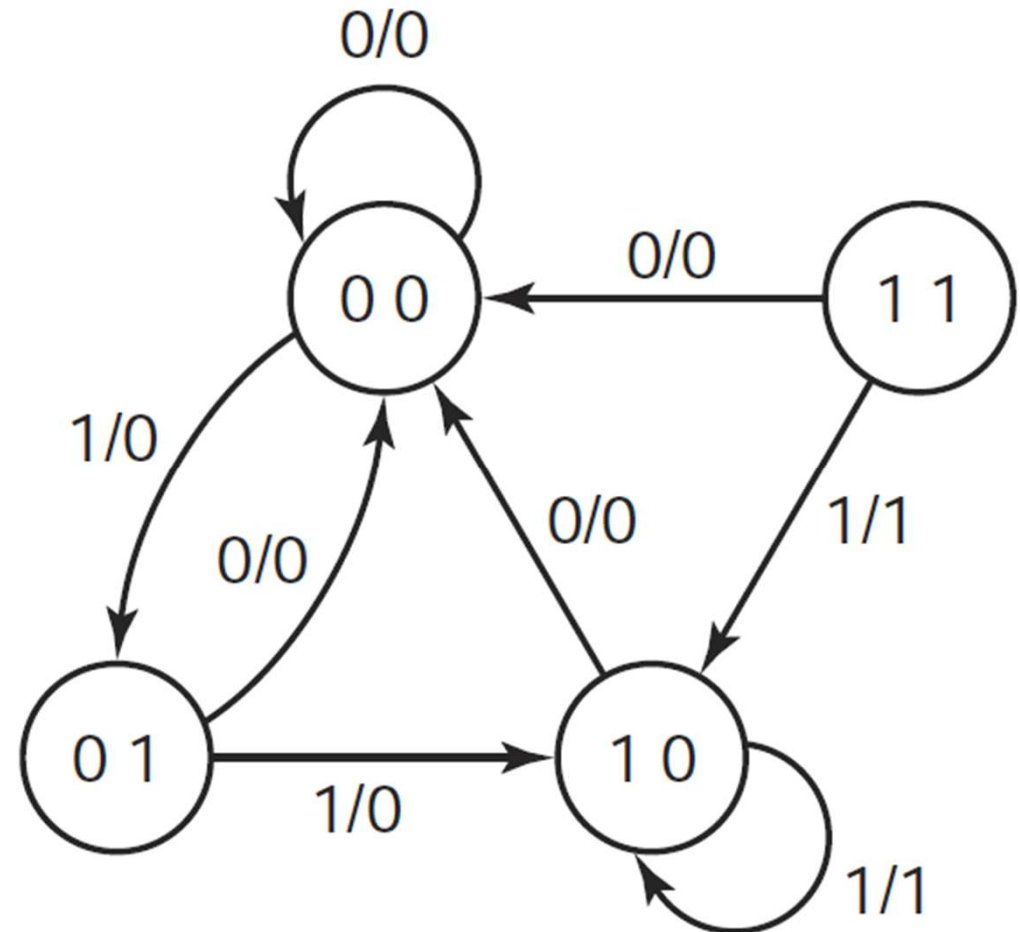
Mealy Machine

- ❖ The outputs are a function of the present state and Inputs
- ❖ The outputs are **NOT** synchronized with the clock
- ❖ The outputs may change if inputs change during the clock cycle
- ❖ The outputs may have momentary false values (called glitches)
- ❖ The correct outputs are present just before the edge of the clock



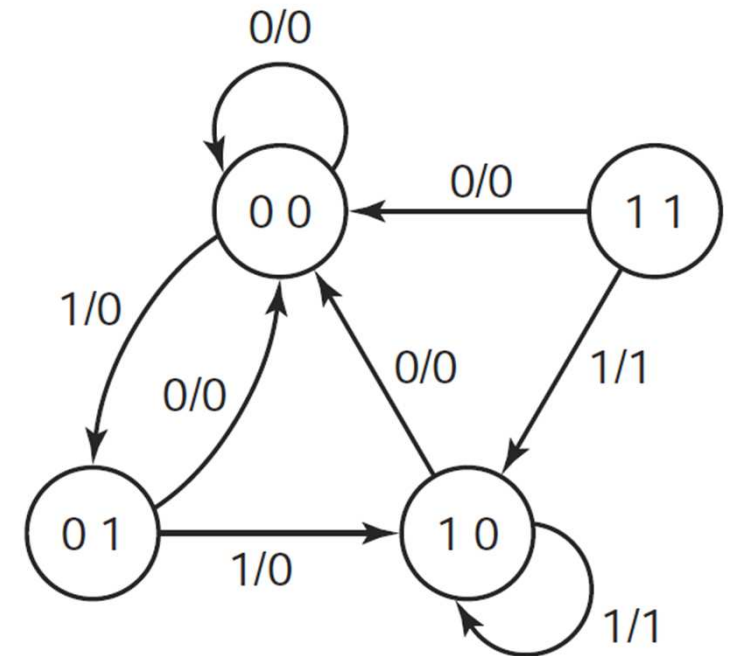
Mealy State Diagram

- ❖ An example of a Mealy state diagram is shown on the right
- ❖ Each arc is labeled with:
Input / Output
- ❖ The output is shown on the arcs of the state diagram
- ❖ The output depends on the current state and input
- ❖ Notice that State 11 cannot be reached from the other states



Tracing a Mealy State Diagram

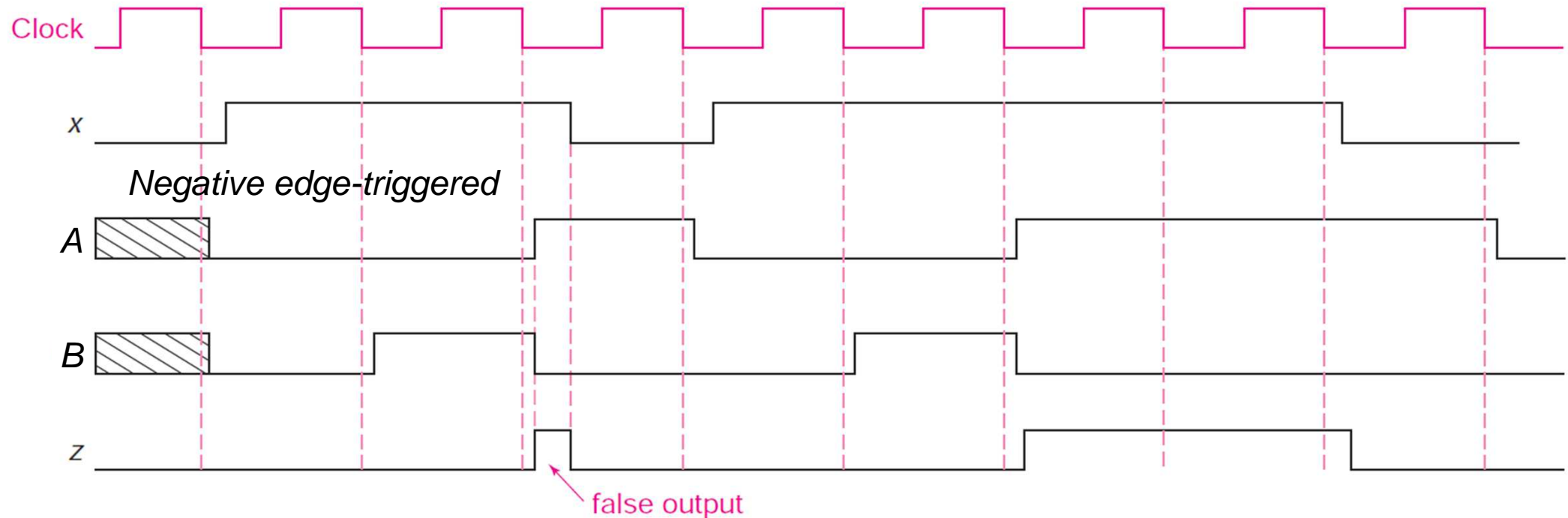
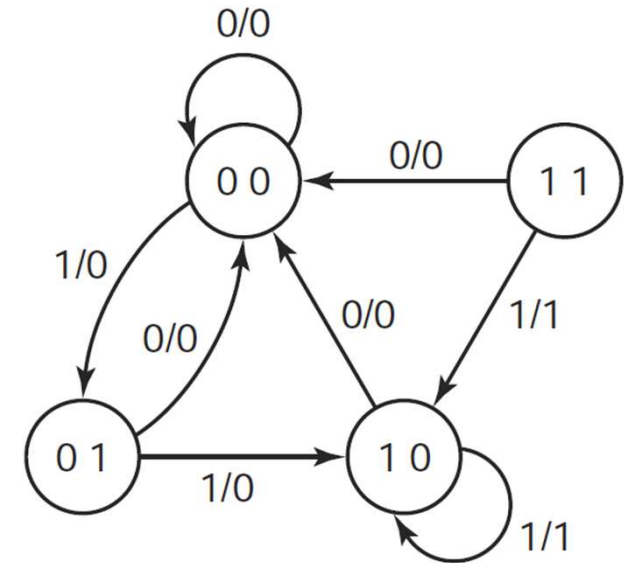
Cycle	0	1	2	3	4	5	6	7	8
Input x	0	1	1	0	1	1	1	1	0
Present State AB	?	0	0	1	0	0	1	1	1
Output z	0	0	0	0	0	0	1	1	0



- ❖ When the circuit is powered, the initial state (AB) is unknown
- ❖ Even though the initial state is unknown, the input $x = 0$ forces a transition to state $AB = 00$, regardless of the present state
- ❖ Sometimes, a reset input is used to initialize the state to 00

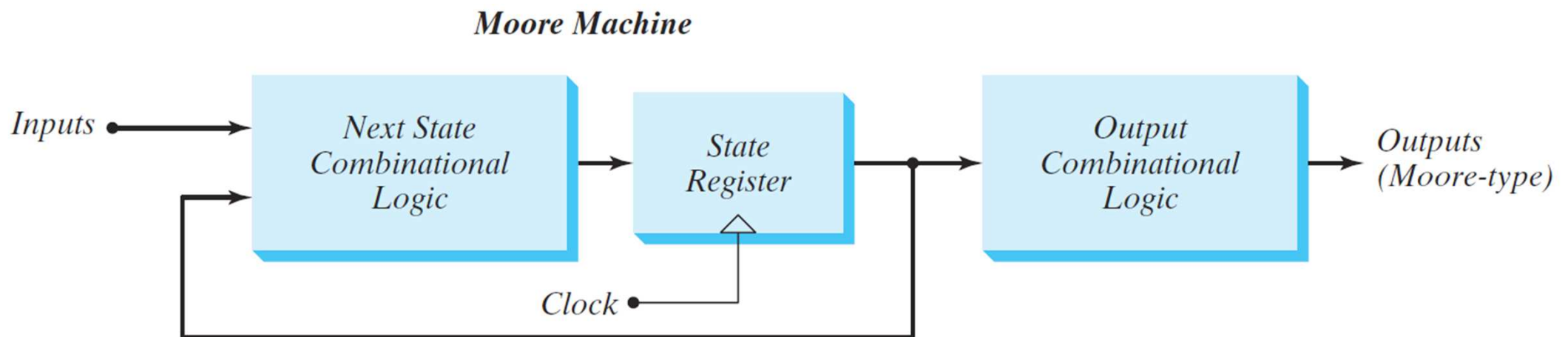
False Output in the Timing Diagram

Cycle	0	1	2	3	4	5	6	7	8
Input x	0	1	1	0	1	1	1	1	0
Present State A B	?	0 0	0 1	1 0	0 0	0 1	1 0	1 0	1 0
Output z	0	0	0	0	0	0	1	1	0



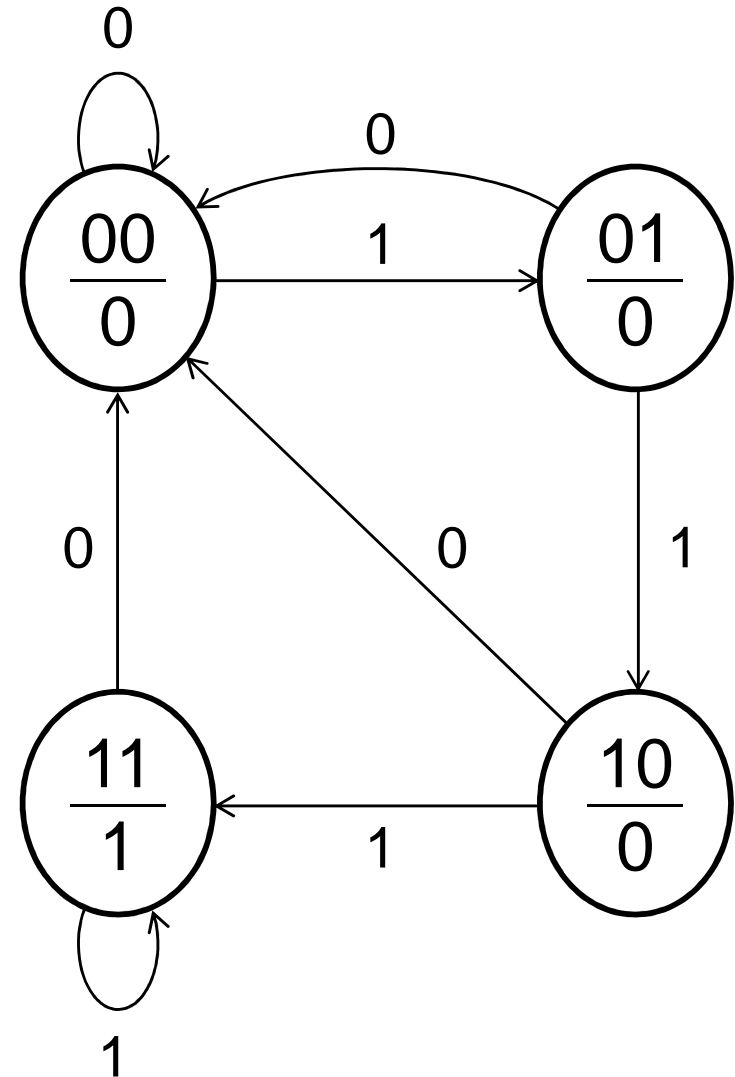
Moore Machine

- ❖ The outputs are a function of the Flip-Flop outputs only
- ❖ The outputs depend on the current state only
- ❖ The outputs are synchronized with the clock
- ❖ Glitches cannot appear in the outputs (even if inputs change)
- ❖ A given design might mix between Mealy and Moore



Moore State Diagram

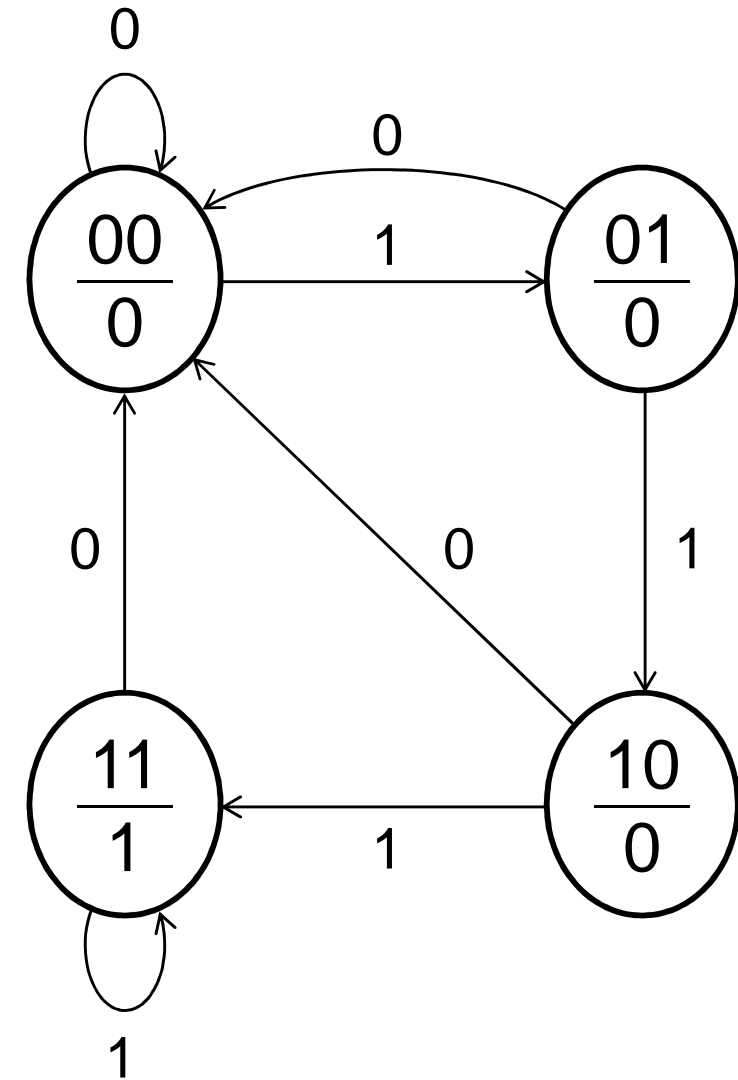
- ❖ An example of a Moore state diagram is shown on the right
- ❖ Arcs are labeled with input only
- ❖ The output is shown inside the state: (State / Output)
- ❖ The output depends on the current state only



Tracing a Moore State Diagram

- ❖ When the circuit is powered, the initial state (AB) and output are unknown
- ❖ Input $x = 0$ resets the state AB to 00.
Can also be done with a reset signal.

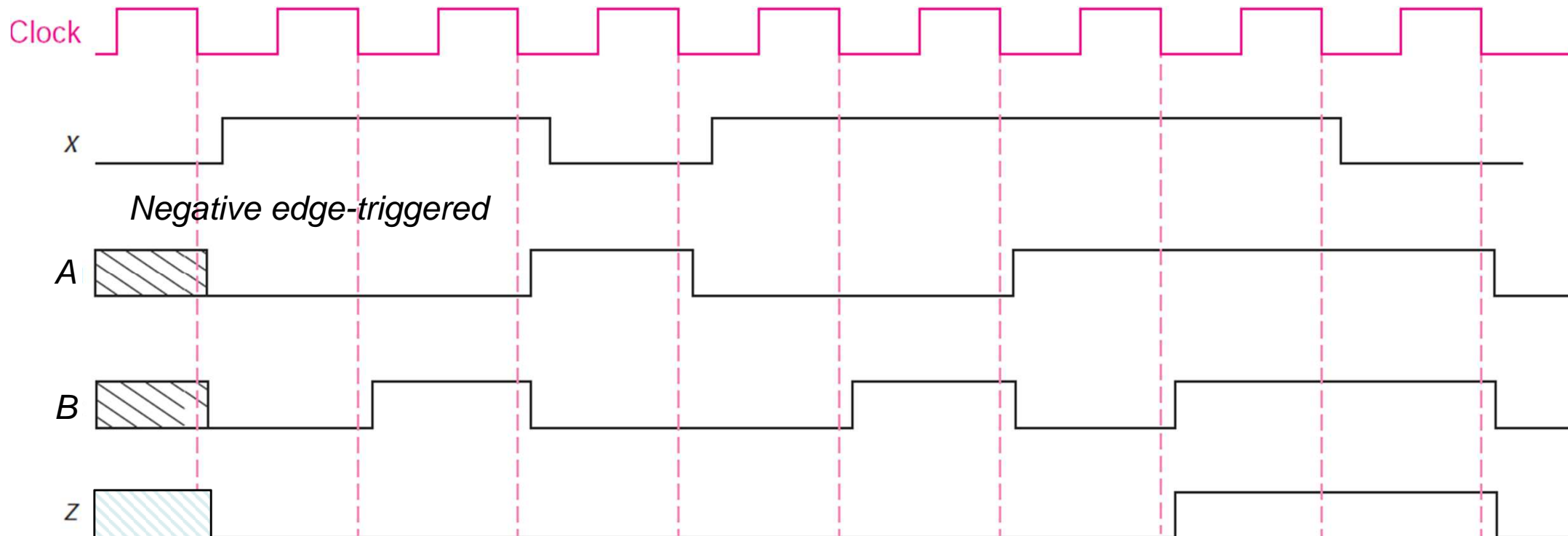
Cycle	0	1	2	3	4	5	6	7	8
Input x	0	1	1	0	1	1	1	1	0
Present State AB	?	0	0	1	0	0	1	1	1
Output z	?	0	0	0	0	0	0	1	1



Timing Diagram of a Moore Machine

Cycle	0	1	2	3	4	5	6	7	8
Input x	0	1	1	0	1	1	1	1	0
Present State A B	?	0	0	1	0	0	1	1	1
Output z	?	0	0	0	0	0	0	1	1

The output is synchronized with the clock. No false output (or glitch) can appear.



Summary

- ❖ To analyze a clocked sequential circuit:
 1. Obtain the equations at the **Inputs** of the flip-flops
 2. Obtain the **Next State** equations
 - ✧ For a D Flip-Flop, the Next State = D input equation
 - ✧ For T and JK, use the characteristic equation of the Flip-Flop
 3. Obtain the **Output** equations
 4. Fill the **State Table**
 - ✧ Put all the combinations of current state and input
 - ✧ Fill the next state and output columns
 5. Draw the **State Diagram**
- ❖ Two types of clocked sequential circuits: **Mealy** versus **Moore**