



King Fahd University of Petroleum and Minerals
Department of Computer Engineering

DIGITAL LOGIC DESIGN COE 202
Homework 2, November 16, 2008

Problems	Grading
1	
2	
3	
4	
5	
TOTAL	

Student Name:.....

Student ID:.....

1. Question-1: Solve each of the following three problems:

1. Using Algebraic manipulation prove the following algebraic identities:

- a. $X'Y'+X'Y+XY = X'+Y$
- b. $A'B+B'C'+AB+B'C = 1$
- c. $Y+X'Z+XY'=X+Y+Z$
- d. $X'Y'+Y'Z+XZ+XY+YZ=X'Y'+XZ+YZ'$

2. Convert the following expressions into (1) Sum-of-Product, and (2) Product-of-Sum forms:

- a. $(AB+C)(B+C'D)$
- b. $X'+X(X+Y')(Y+Z')$
- c. $(A+BC'+CD)(B'+EF)$

3. Draw the logic diagram for the following logical expressions:

- a. $WX'Y'+W'Z+YZ$
- b. $A(BD'+B'D)+D(BC+B'C')$
- c. $WY'(X+Z)+X'Z(W+Y)+WX'(Y+Z)$

2. Question-2: Write the *sum-of-minterms* and *product-of-maxterms* expressions for both the *true* and the *complement* form of the following Boolean expressions:

- a. $\overline{XZ} + Y\overline{Z} + XYZ$
- b. $\overline{A}B + A\overline{C}D + \overline{B}C + \overline{A}B\overline{C}D$

3. Question-3: For the given truth table and using a K-map:

- a. Find all *prime implicants* and *essential prime implicants* of F .
- b. Write an optimized SOP **and** POS expressions for the function F .

A	B	C	D	F
0	0	0	0	1
0	0	0	1	1
0	0	1	0	0
0	0	1	1	0
0	1	0	0	1
0	1	0	1	1
0	1	1	0	0
0	1	1	1	0
1	0	0	0	1
1	0	0	1	0
1	0	1	0	1
1	0	1	1	0
1	1	0	0	1
1	1	0	1	1
1	1	1	0	1
1	1	1	1	0

4. For the Boolean function E and F, as given in the following truth table:

X	Y	Z	E	F
0	0	0	1	0
0	0	1	1	0
0	1	0	1	1
0	1	1	0	0
1	0	0	1	0
1	0	1	0	0
1	1	0	0	1
1	1	1	0	1

- List the minterms and the maxterms of each function.
- List the minterms of E' and F'.
- List the minterms of E + F and E . F.
- Express E and F in sum-of-minterms and product-of-maxterms algebraic form.

Solution:

Question-1, Problem I:

- $$\begin{aligned} \bar{X}\bar{Y} + \bar{X}Y + XY &= \bar{X}(\bar{Y} + Y) + XY \\ &= \bar{X} + XY \\ &= (\bar{X} + X)(\bar{X} + Y) \\ &= \bar{X} + Y \end{aligned}$$
- $$\begin{aligned} \bar{A}B + \bar{B}\bar{C} + AB + \bar{B}C &= (\bar{A} + A)B + \bar{B}(\bar{C} + C) \\ &= B + \bar{B} \\ &= 1 \end{aligned}$$
- $$\begin{aligned} Y + \bar{X}Z + X\bar{Y} &= \bar{X}Z + Y + X\bar{Y} \\ &= \bar{X}Z + (Y + X)(Y + \bar{Y}) \\ &= \bar{X}Z + Y + X \\ &= \bar{X}Z + X + Y \\ &= (\bar{X} + X)(Z + X) + Y \\ &= X + Y + Z \end{aligned}$$
-

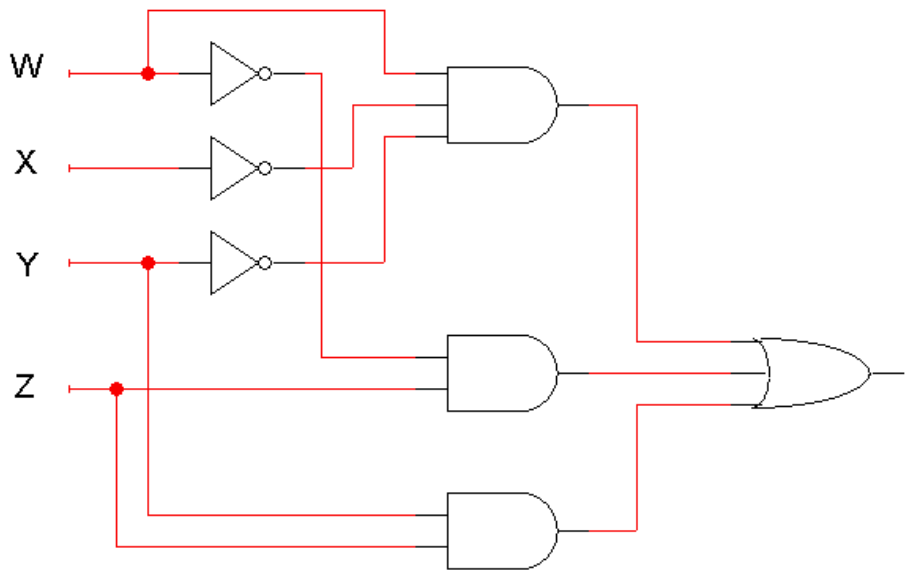
$$\begin{aligned}
\bar{X}\bar{Y} + \bar{Y}Z + XZ + XY + Y\bar{Z} &= \bar{X}\bar{Y} + \bar{Y}Z(X + \bar{X}) + XZ + XY + Y\bar{Z} \\
&= \bar{X}\bar{Y} + X\bar{Y}Z + \bar{X}\bar{Y}Z + XZ + XY + Y\bar{Z} \\
&= \bar{X}\bar{Y}(1 + Z) + X\bar{Y}Z + XZ + XY + Y\bar{Z} \\
&= \bar{X}\bar{Y} + XZ(\bar{Y} + 1) + XY + Y\bar{Z} \\
&= \bar{X}\bar{Y} + XZ + XY(Z + \bar{Z}) + Y\bar{Z} \\
&= \bar{X}\bar{Y} + XZ + XYZ + XY\bar{Z} + Y\bar{Z} \\
&= \bar{X}\bar{Y} + XZ(1 + Y) + Y\bar{Z}(X + 1) \\
&= \bar{X}\bar{Y} + XZ + Y\bar{Z}
\end{aligned}$$

Question-1, Problem II:

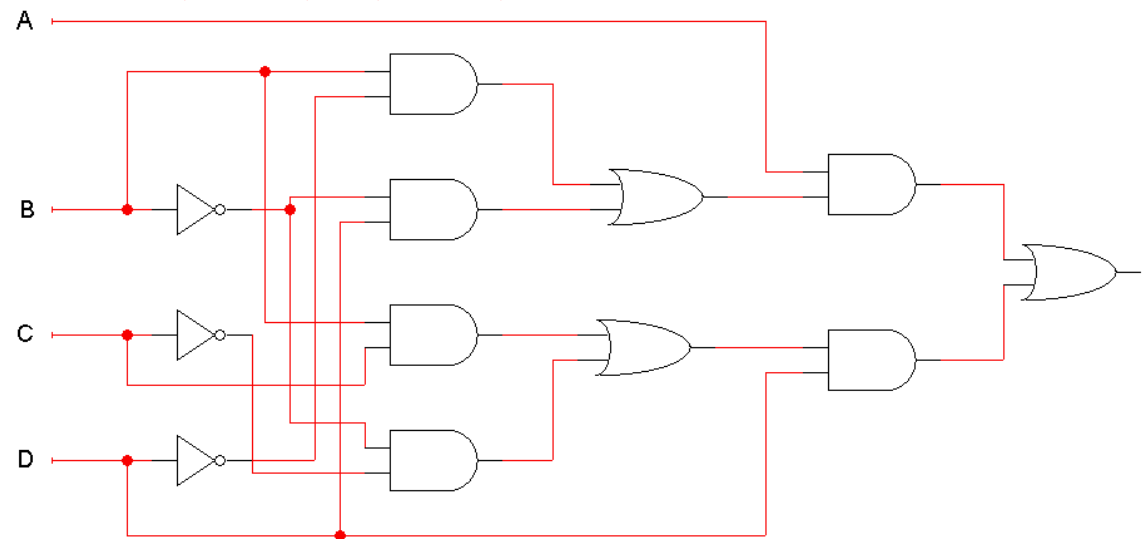
- (a) $(AB + C)(B + \bar{C}D) = ABB + AB\bar{C}D + BC + C\bar{C}D$
 $= AB + AB\bar{C}D + BC$ (SOP)
 $(AB + C)(B + \bar{C}D) = (A + C)(B + C)(B + \bar{C})(B + D)$ (POS)
- (b) $\bar{X} + X(X + \bar{Y})(Y + \bar{Z}) = \bar{X} + (XX + X\bar{Y})(Y + \bar{Z})$
 $= \bar{X} + (X + X\bar{Y})(Y + \bar{Z})$
 $= \bar{X} + XY + X\bar{Y}Y + X\bar{Z} + XY\bar{Z}$
 $= \bar{X} + XY + X\bar{Z} + XY\bar{Z}$ (SOP)
 $= \bar{X} + Y + \bar{Z}$ (simplified SOP)
 $\bar{X} + X(X + \bar{Y})(Y + \bar{Z}) = (\bar{X} + X)(\bar{X} + X + \bar{Y})(\bar{X} + Y + \bar{Z})$
 $= (\bar{X} + Y + \bar{Z})$ (POS)
- (c) $(A + B\bar{C} + CD)(\bar{B} + EF) = A\bar{B} + B\bar{C}\bar{B} + CDB + AEF + B\bar{C}EF + CDEF$
 $= A\bar{B} + \bar{B}CD + AEF + B\bar{C}EF + CDEF$ (SOP)
 $(A + B\bar{C} + CD)(\bar{B} + EF) = (A + B)(A + \bar{C})(A + C)(A + D)(\bar{B} + E)(\bar{B} + F)$ (POS)

Question-1, Problem III:

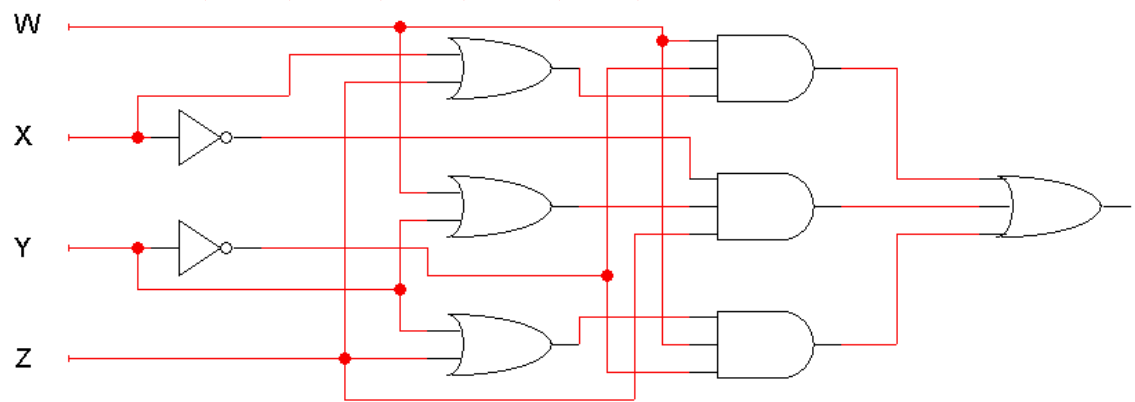
- (a) $W\bar{X}\bar{Y} + \bar{W}Z + YZ$



(b) $A(B\bar{D} + \bar{B}D) + D(BC + \bar{B}\bar{C})$



(c) $W\bar{Y}(X + Z) + \bar{X}Z(W + Y) + W\bar{X}(Y + Z)$



Question-2

Write the *sum-of-minterms* **and** *product-of-maxterms* expressions **for both** the *true* and the *complement* form of the following Boolean expressions:

- $\bar{X}\bar{Z} + Y\bar{Z} + XYZ$

X	Y	Z	F
0	0	0	1
0	0	1	0
0	1	0	1
0	1	1	0
1	0	0	0
1	0	1	0
1	1	0	1
1	1	1	1

$$F(X, Y, Z) = \sum(0, 2, 6, 7) = \prod(1, 3, 4, 5)$$

$$\bar{F}(X, Y, Z) = \sum(1, 3, 4, 5) = \prod(0, 2, 6, 7)$$

- $\bar{A}\bar{B} + A\bar{C}D + \bar{B}C + \bar{A}B\bar{C}D$

A	B	C	D	F
0	0	0	0	1
0	0	0	1	1
0	0	1	0	1
0	0	1	1	1
0	1	0	0	1
0	1	0	1	0
0	1	1	0	0
0	1	1	1	0
1	0	0	0	0
1	0	0	1	1
1	0	1	0	1
1	0	1	1	1
1	1	0	0	0
1	1	0	1	1
1	1	1	0	0
1	1	1	1	0

$$F(A, B, C, D) = \sum(0, 1, 2, 3, 4, 9, 10, 11, 13) = \prod(5, 6, 7, 8, 12, 14, 15)$$

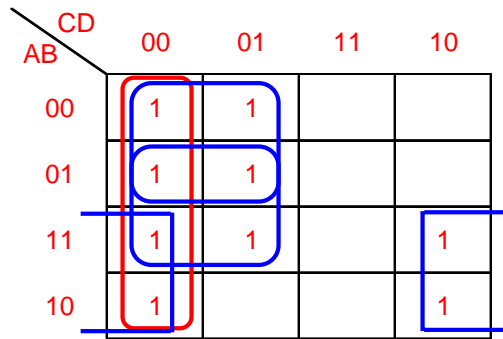
$$\bar{F}(A, B, C, D) = \sum(5, 6, 7, 8, 12, 14, 15) = \prod(0, 1, 2, 3, 4, 9, 10, 11, 13)$$

Question-3

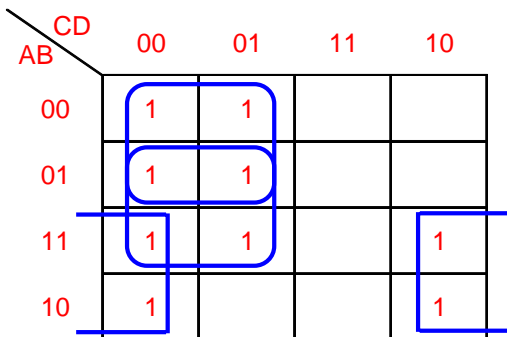
For the given truth table and using a K-map:

- (5 points) Find all *prime implicants* and *essential prime implicants* of F .
- (10 points) Write an optimized SOP and POS expressions for the function F .

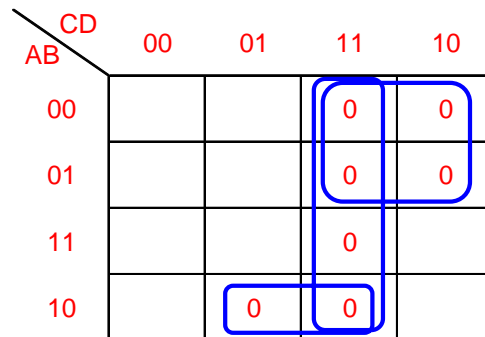
A	B	C	D	F
0	0	0	0	1
0	0	0	1	1
0	0	1	0	0
0	0	1	1	0
0	1	0	0	1
0	1	0	1	1
0	1	1	0	0
0	1	1	1	0
1	0	0	0	1
1	0	0	1	0
1	0	1	0	1
1	0	1	1	0
1	1	0	0	1
1	1	0	1	1
1	1	1	0	1
1	1	1	1	0



PIs (both blue and red): $A\bar{D}, \bar{A}\bar{C}, B\bar{C}, \bar{C}\bar{D}$
 EPIs (only blue): $A\bar{D}, \bar{A}\bar{C}, B\bar{C}$



$F(A,B,C,D) = \text{SOP} = A\bar{D} + \bar{A}\bar{C} + B\bar{C}$



$F(A,B,C,D) = \text{POS} = (\bar{A} + B + \bar{D}) \cdot (\bar{C} + \bar{D}) \cdot (A + \bar{C})$

4. Question 4

a. $E = \Sigma (0, 1, 2, 4) = \Pi (3, 5, 6, 7)$; $F = \Sigma (2, 6, 7) = \Pi (0, 1, 3, 4, 5)$

b. $E' = \Sigma (3, 5, 6, 7) = xy'z' + xy'z + xyz' + xyz$
 $F' = \Sigma (0, 1, 3, 4, 5) = x'y'z' + x'y'z + x'yz + xy'z' + xy'z$

c. $E+F = \Sigma (0, 1, 2, 4, 6, 7)$; $E.F = \Sigma (0)$

d. $E = x'y'z' + x'y'z + x'yz' + xy'z' = (x + y' + z') (x' + y + z') (x' + y' + z)$
 $(x' + y' + z')$; $F = x'yz' + xyz' + xyz = (x + y + z) (x + y + z') (x + y' + z') (x' + y + z) (x' + y + z')$