

Multiplexers and Demultiplexers

In this lesson, you will learn about:

1. Multiplexers
2. Combinational circuit implementation with multiplexers
3. Demultiplexers
4. Some examples

Multiplexer

A Multiplexer (see Figure 1) is a combinational circuit that selects one of the 2^n input signals ($D_0, D_1, D_2, \dots, D_{2^n-1}$) to be passed to the single output line Y .

- Q.** How to select the input line (out of the possible 2^n input signals) to be passed to the output line?
- A.** Selection of the particular input to be passed to the output is controlled by a set of n input signals called “*Select Inputs*” ($S_0, S_1, S_2, \dots, S_{n-1}$).

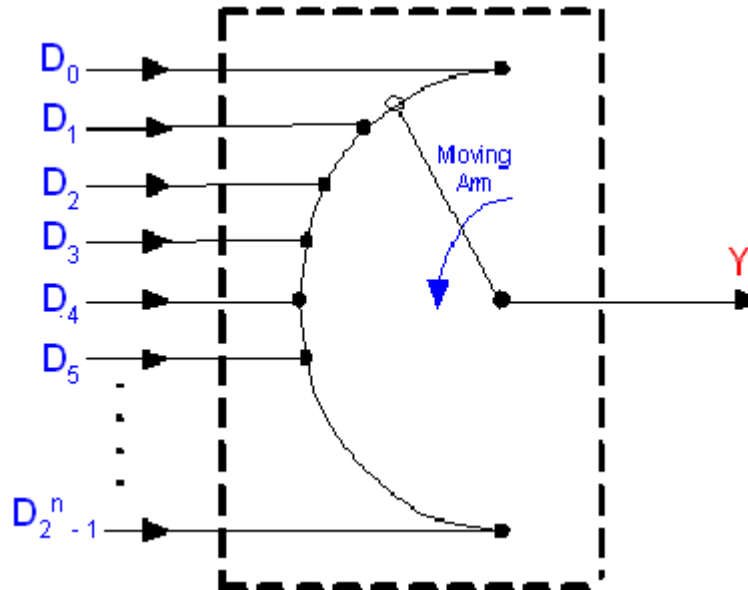


Figure 1: Multiplexer

Example 1: 2x1 Mux

A 2x1 Mux has 2 input lines (D_0 & D_1), one select input (S), and one output line (Y). (see Figure 2)

IF $S=0$, then $Y = D_0$
Else ($S=1$) $Y = D_1$

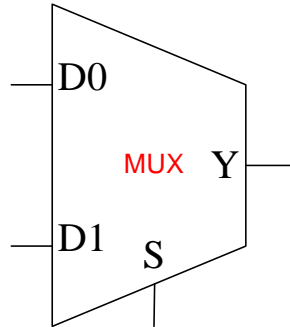


Figure 2: A 2 X 1 Multiplexer

Thus, the output signal Y can be expressed as:

$$Y = \bar{S} D_0 + S D_1$$

Example 2: 4x1 Mux

A 4x1 Mux has 4 input lines (D_0, D_1, D_2, D_3), two select inputs (S_0 & S_1), and one output line Y. (see Figure 3)

- IF $S_1 S_0 = 00$, then $Y = D_0$
- IF $S_1 S_0 = 01$, then $Y = D_1$
- IF $S_1 S_0 = 10$, then $Y = D_2$
- IF $S_1 S_0 = 11$, then $Y = D_3$

Thus, the output signal Y can be expressed as:

$$Y = \underbrace{\bar{S}_1 \bar{S}_0}_{\text{minterm } m_0} D_0 + \underbrace{\bar{S}_1 S_0}_{\text{minterm } m_1} D_1 + \underbrace{S_1 \bar{S}_0}_{\text{minterm } m_2} D_2 + \underbrace{S_1 S_0}_{\text{minterm } m_3} D_3$$

Obviously, the input selected to be passed to the output depends on the minterm expressions of the select inputs.

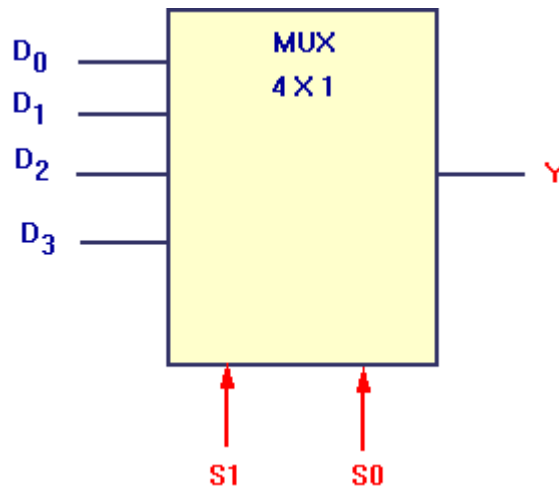


Figure 3: A 4 X 1 Multiplexer

In General,

For MUXes with n select inputs, the output Y is given by

$$Y = m_0D_0 + m_1D_1 + m_2D_2 + \dots + m_{2^n-1}D_{2^n-1}$$

Where $m_i = i^{\text{th}}$ minterm of the *Select Inputs*

Thus

$$Y = \sum_{i=0}^{2^n-1} m_i D_i$$

Example 3: Quad 2X1 Mux

Given two 4-bit numbers A and B , design a multiplexer that selects one of these 2 numbers based on some select signal S . Obviously, the output (Y) is a 4-bit number.

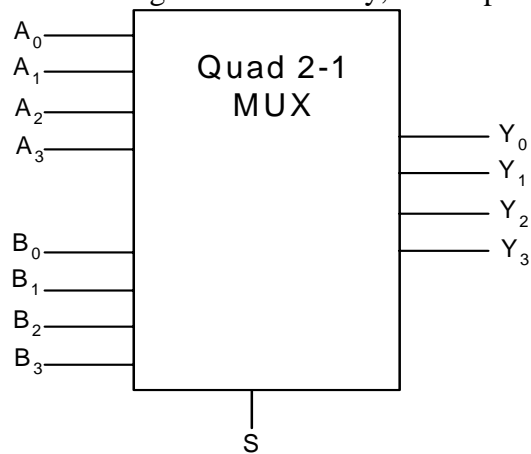


Figure 4: Quad 2 X 1 Multiplexer

The 4-bit output number Y is defined as follows:

$$Y = A \text{ IF } S=0, \text{ otherwise } Y = B$$

The circuit is implemented using four 2x1 Muxes, where the output of each of the Muxes gives one of the outputs (Y_i).

Combinational Circuit Implementation using Muxes

Problem Statement:

Given a function of n -variables, show how to use a MUX to implement this function.

This can be accomplished in one of 2 ways:

- Using a Mux with n -select inputs
- Using a Mux with $n-1$ select inputs

Method 1: Using a Mux with n -select inputs

n variables need to be connected to n select inputs. For a MUX with n select inputs, the output Y is given by:

$$Y = m_0 D_0 + m_1 D_1 + m_2 D_2 + \dots + m_{2^n-1} D_{2^n-1}$$

Alternatively,

$$Y = \sum_{i=0}^{2^n-1} m_i D_i$$

Where $m_i = i^{\text{th}}$ minterm of the *Select Inputs*

The MUX output expression is a *SUM of minterms* expression for all minterms (m_i) which have their corresponding inputs (D_i) equal to 1.

Thus, it is possible to implement any function of *n-variables* using a MUX with *n-select inputs* by proper assignment of the input values ($D_i \in \{0, 1\}$).

$$Y(S_{n-1} \dots S_1 S_0) = \sum(\text{minterms})$$

Example 4: Implement the function $F(A, B, C) = \sum(1, 3, 5, 6)$ (see Figure 5)

Since number of variables $n = 3$, this requires a Mux with 3 select inputs, i.e. an 8x1 Mux

The most significant variable A is connected to the most significant select input S_2 while the least significant variable C is connected to the least significant select input S_0 , thus:

$$S_2 = A, S_1 = B, \text{ and } S_0 = C$$

For the MUX output expression (sum of minterms) to include minterm 1 we assign $D_1 = 1$

Likewise, to include minterms 3, 5, and 6 in the sum of minterms expression while excluding minterms 0, 2, 4, and 7, the following input (D_i) assignments are made

$$D_1 = D_3 = D_5 = D_6 = 1$$

$$D_0 = D_2 = D_4 = D_7 = 0$$

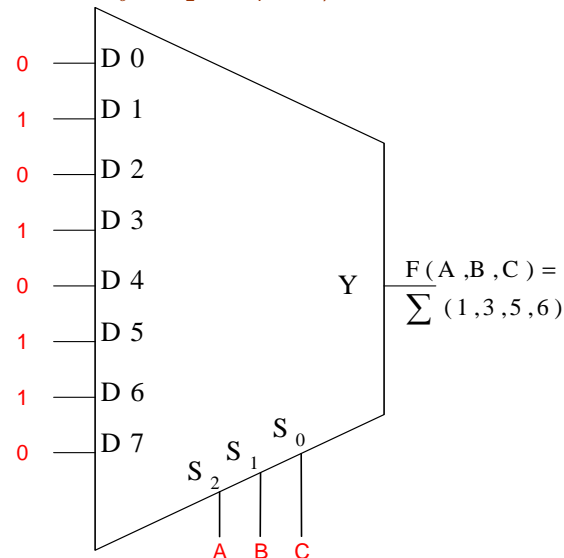


Figure 5: Implementing function with Mux with n select inputs

Method 2: Using a Mux with (n-1) select inputs

Any n-variable logic function can be implemented using a Mux with only (n-1) select inputs (e.g. 4-to-1 mux to implement any 3 variable function)

This can be accomplished as follows:

- Express function in canonical sum-of-minterms form.
- Choose n-1 variables to be connected to the mux select lines.
- Construct the truth table of the function, but grouping the n-1 select input variables together (e.g. by making the n-1 select variables as most significant inputs).

The values of D_i (mux input line) will be 0, or 1, or nth variable or complement of nth variable or value of function F, as will be clarified by the following example.

Example 5: Implement the function $F(A, B, C) = \sum(1, 2, 6, 7)$ (see figure 6)

This function can be implemented with a 4-to-1 line MUX.

A and B are applied to the select line, that is

$$A \Rightarrow S_1, B \Rightarrow S_0$$

The truth table of the function and the implementation are as shown:

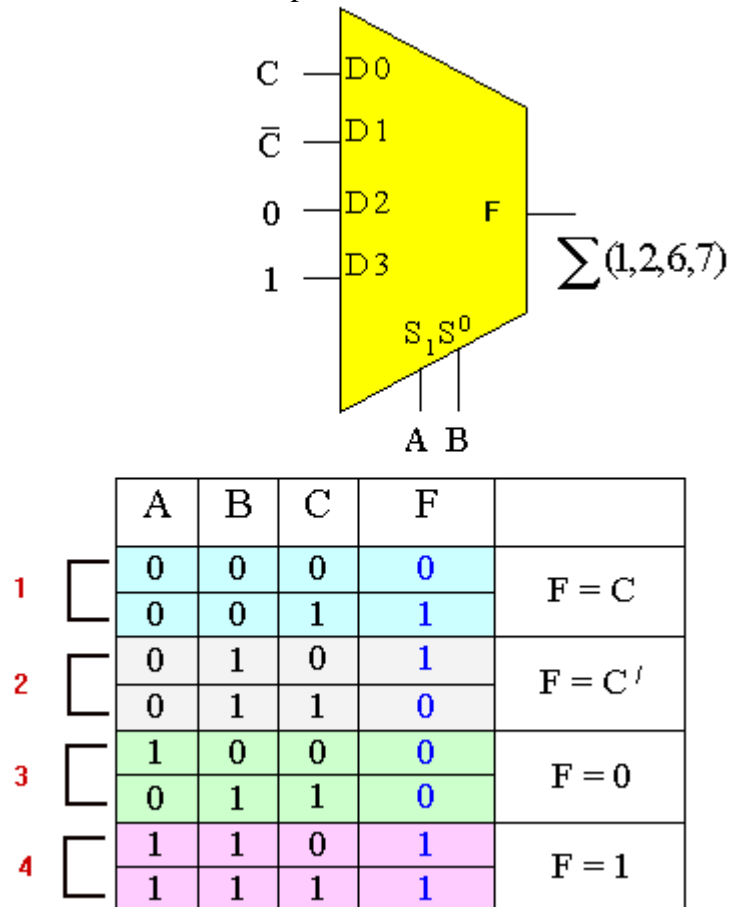


Figure 6: Implementing function with Mux with n-1 select inputs

Example 6: Consider the function $F(A,B,C,D)=\Sigma(1,3,4,11,12,13,14,15)$

This function can be implemented with an 8-to-1 line MUX (see Figure 7)
 A, B, and C are applied to the select inputs as follows:

$$A \Rightarrow S_2, B \Rightarrow S_1, C \Rightarrow S_0$$

The truth table and implementation are shown.

A	B	C	D	F
0	0	0	0	0
0	0	0	1	1
0	0	1	0	0
0	0	1	1	1
0	1	0	0	1
0	1	0	1	0
0	1	1	0	0
0	1	1	1	0
1	0	0	0	0
1	0	0	1	0
1	0	1	0	0
1	0	1	1	1
1	1	0	0	1
1	1	0	1	1
1	1	1	0	1
1	1	1	1	1

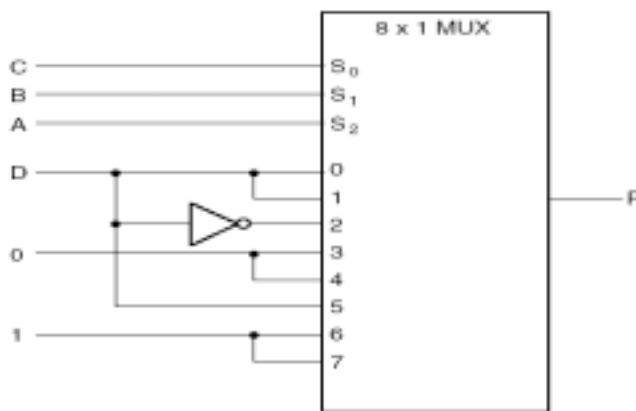


Figure 7: Implementing function of Example 6

Demultiplexer

It is a digital function that performs inverse of the multiplexing operation.

It has one input line (E) and transmits it to one of 2^n possible output lines ($D_0, D_1, D_2, \dots, D_{2^n-1}$). The selection of the specific output is controlled by the bit combination of n select inputs.

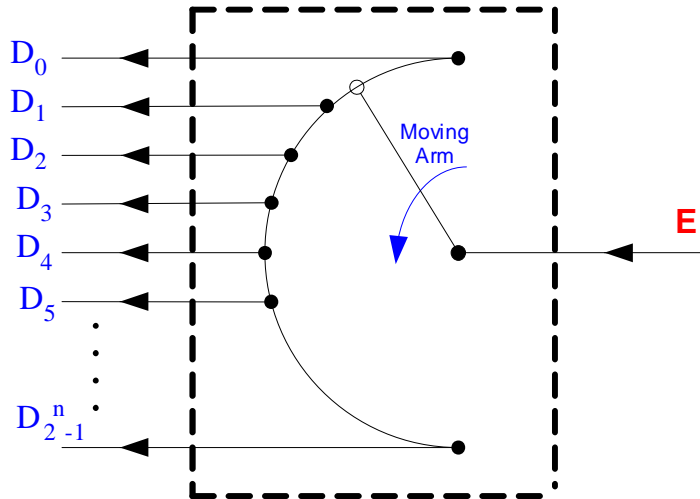


Figure 8: A demultiplexer

Example 7: A 1-to-4 line Demux

The input E is directed to one of the outputs, as specified by the two select lines S_1 and S_0 .

$$D_0 = E \text{ if } S_1 S_0 = 00 \Rightarrow D_0 = S_1' S_0' E$$

$$D_1 = E \text{ if } S_1 S_0 = 01 \Rightarrow D_1 = S_1' S_0 E$$

$$D_2 = E \text{ if } S_1 S_0 = 10 \Rightarrow D_2 = S_1 S_0' E$$

$$D_3 = E \text{ if } S_1 S_0 = 11 \Rightarrow D_3 = S_1 S_0 E$$

A careful inspection of the Demux circuit shows that it is identical to a 2 to 4 decoder with enable input.

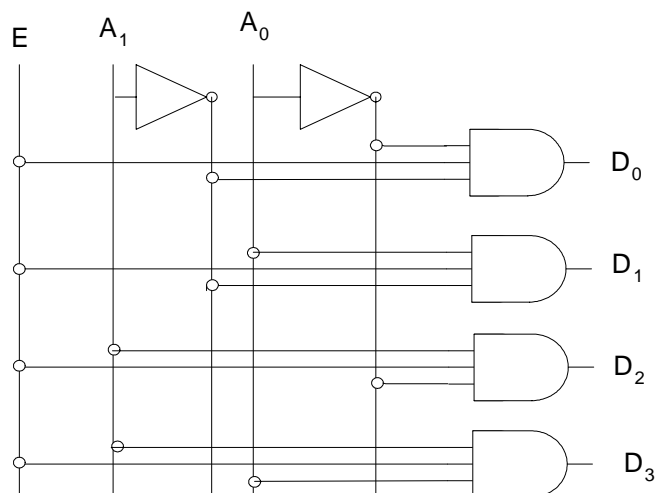


Figure 8: A 1-to-4 line demultiplexer

- For the decoder, the inputs are A_1 and A_0 , and the enable is input E . (see figure 9)
- For demux, input E provides the data, while other inputs accept the selection variables.
- Although the two circuits have different applications, their logic diagrams are exactly the same.

Decimal value	Enable	Inputs		Outputs			
	E	A₁	A₀	D₀	D₁	D₂	D₃
	0	X	X	0	0	0	0
0	1	0	0	1	0	0	0
1	1	0	1	0	1	0	0
2	1	1	0	0	0	1	0
3	1	1	1	0	0	0	1

Figure 9: Table for 1-to-4 line demultiplexer