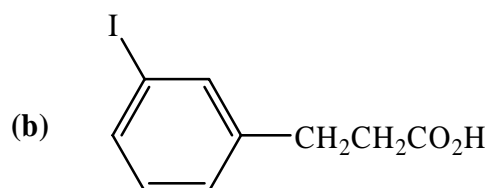
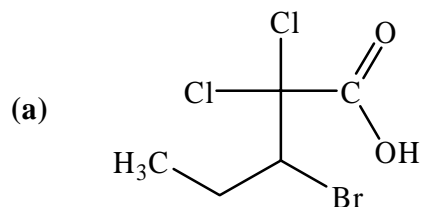


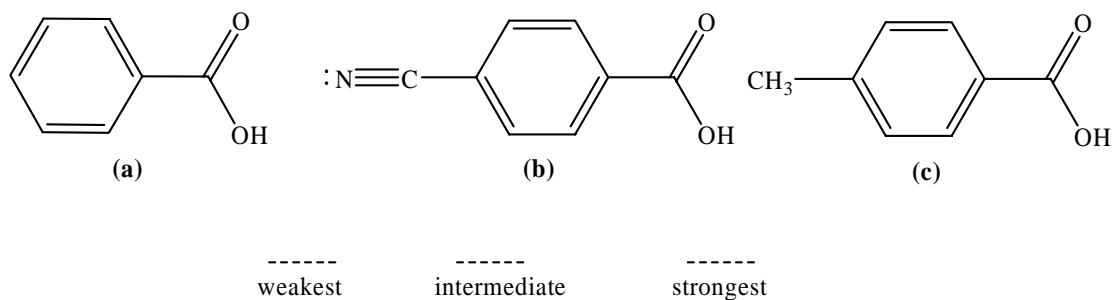
CHEM-202

Quiz # 6 Chapter 14: Carboxylic Acids


Q1. Write the IUPAC name for each of the following compounds:



Q2. Arrange the following acids in order of increasing acidity:



Q3. Show the reaction steps necessary for the following conversion:



Q4. Predict the major organic product(s) from the following reactions:

