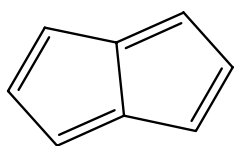
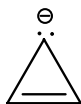
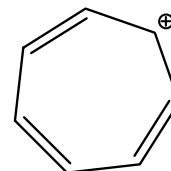


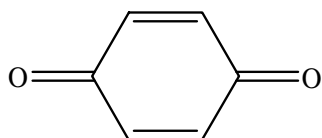
CHEM-202
Quiz # 1 Chapter 11: Aromaticity and Benzene

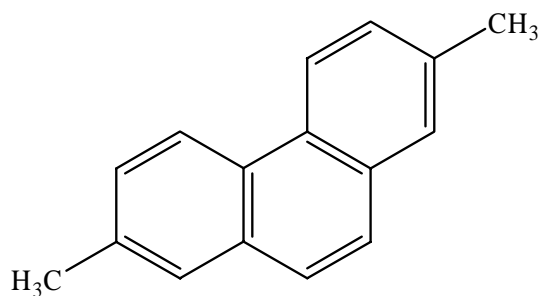
Q1. Define each of the following compounds as being aromatic or not aromatic:
(20 pts)



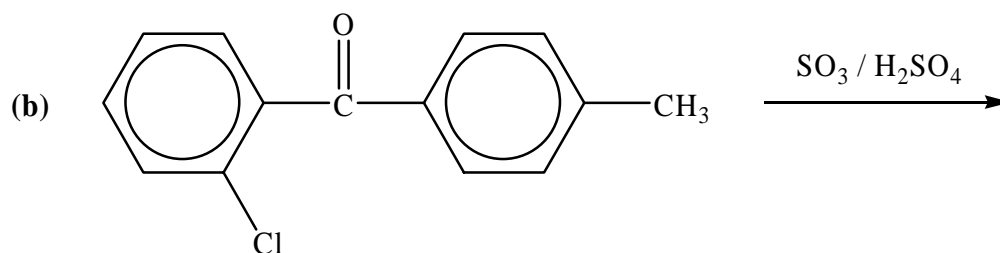
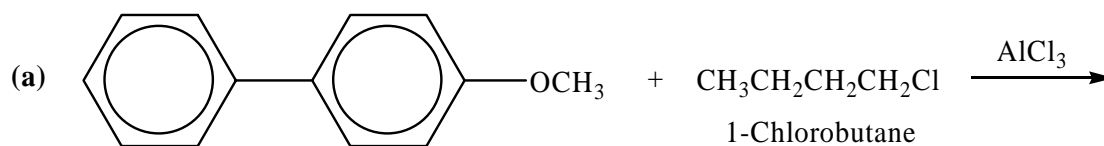








Q2 What is the "single" major product from each of the following reactions?
(24+16 pts)



Q.3 Suggest a reaction sequence to carry out each of the following conversions
(Show the product of each step if more than one step is needed)
(24+16 pts)

