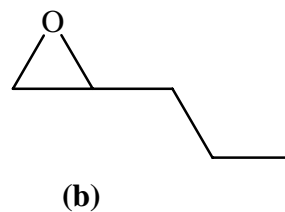
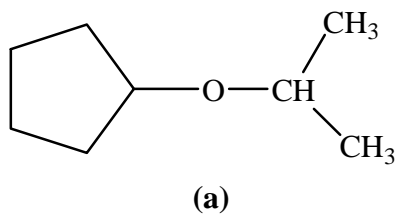
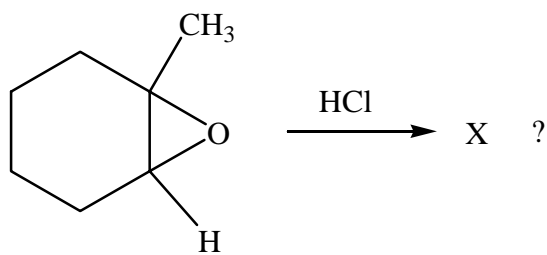


**CHEM 201**  
**Quiz #8 Chapter 8: Ethers, Epoxides, and Sulfides**

1. Write an acceptable IUPAC name for each of the following ethers:



2. What is the product X for the reaction



3. Complete the following reaction:

